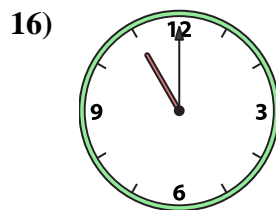
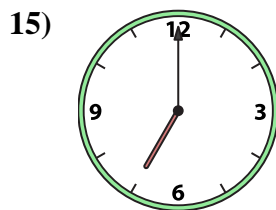
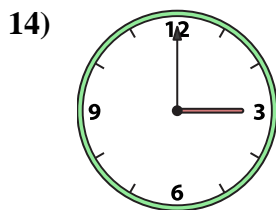
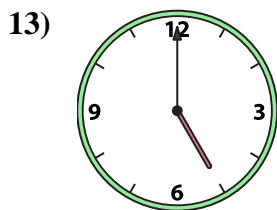
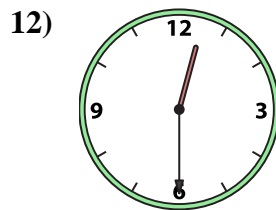
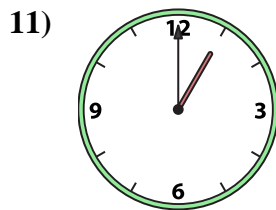
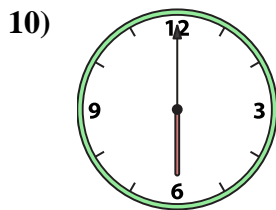
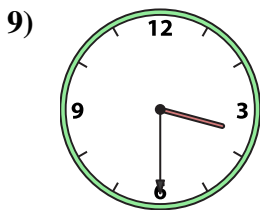
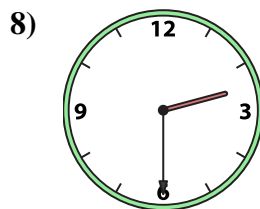
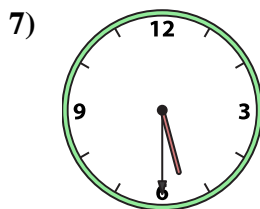
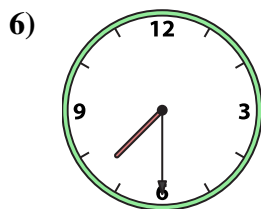
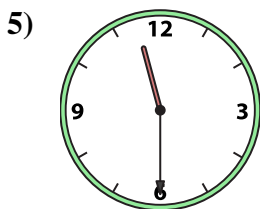
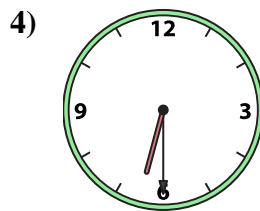
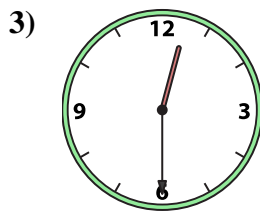
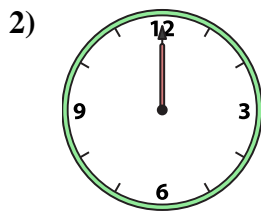
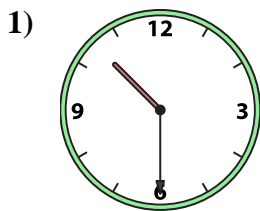




Emparejar el reloj analógico con el reloj digital correspondiente.

Respuestas



1. _____

2. _____

3. _____

4. _____

5. _____

6. _____

7. _____

8. _____

9. _____

10. _____

11. _____

12. _____

13. _____

14. _____

15. _____

16. _____

A.

B.

C.

D.

E.

F.

G.

H.

I.

J.

K.

L.

M.

N.

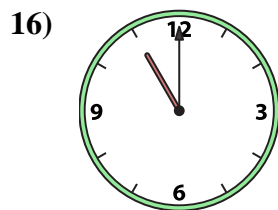
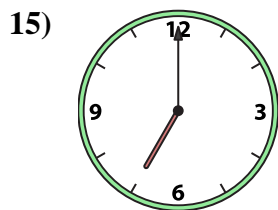
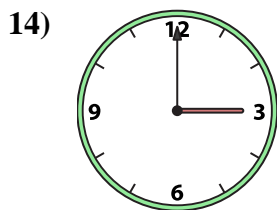
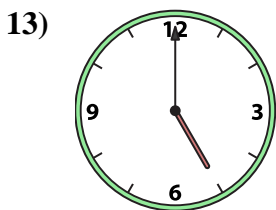
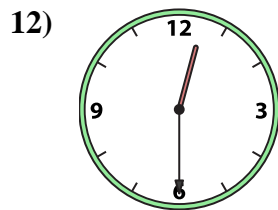
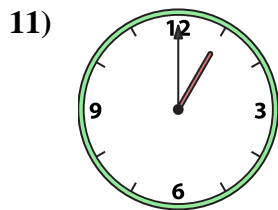
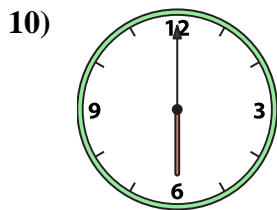
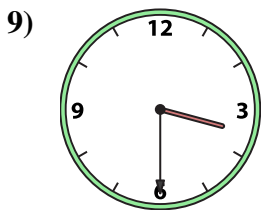
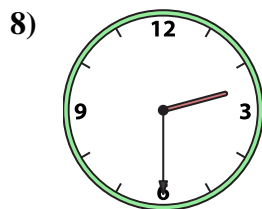
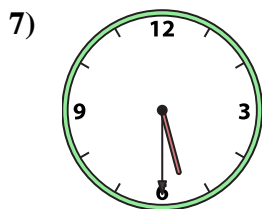
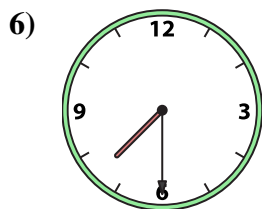
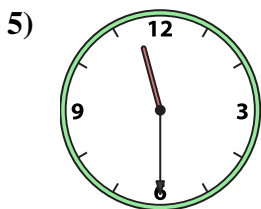
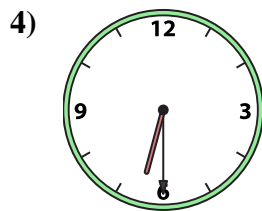
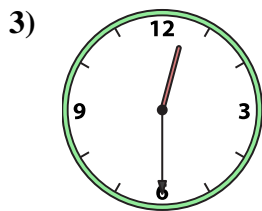
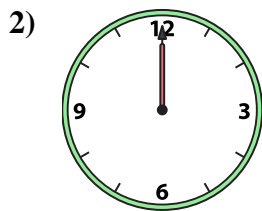
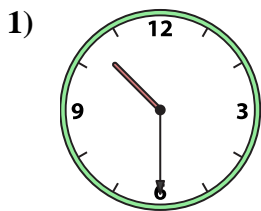
O.

P.



Emparejar el reloj analógico con el reloj digital correspondiente.

Respuestas



A. **2:30**

B. **10:30**

C. **7:30**

D. **6:00**

E. **3:00**

F. **5:30**

G. **1:00**

H. **5:00**

I. **7:00**

J. **12:30**

K. **11:00**

L. **6:30**

M. **12:30**

N. **11:30**

O. **3:30**

P. **12:00**

- 1. **B**
- 2. **P**
- 3. **J**
- 4. **L**
- 5. **N**
- 6. **C**
- 7. **F**
- 8. **A**
- 9. **O**
- 10. **D**
- 11. **G**
- 12. **M**
- 13. **H**
- 14. **E**
- 15. **I**
- 16. **K**