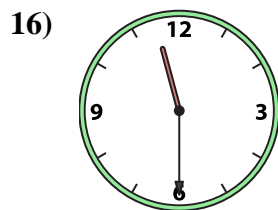
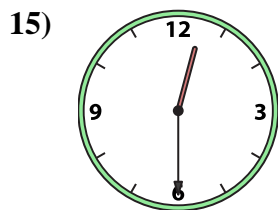
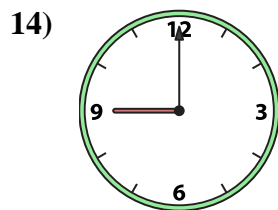
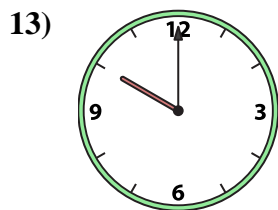

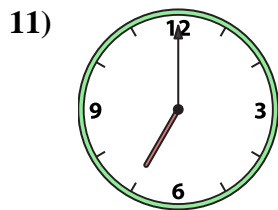
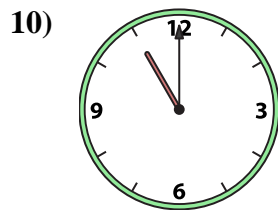
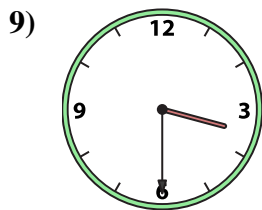
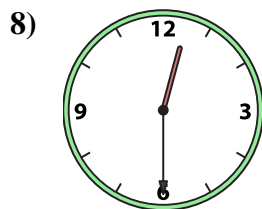

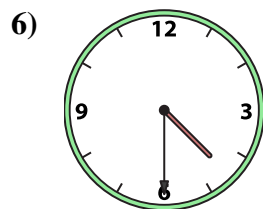
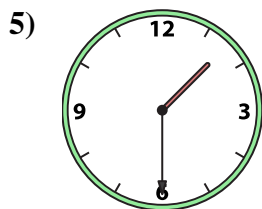
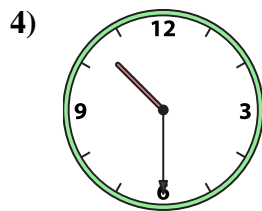
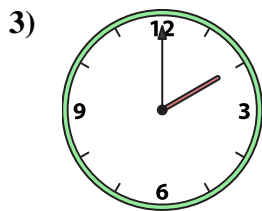
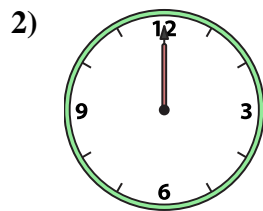
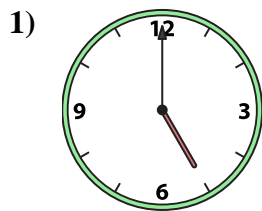




Emparejar el reloj analógico con el reloj digital correspondiente.

Respuestas



A. 11:30

B. 9:00

C. 3:30

D. 12:30

E. 1:30

F. 11:00

G. 7:00

H. 4:30

I. 5:00

J. 10:00

K. 4:00

L. 8:00

M. 2:00

N. 12:00

O. 10:30

P. 12:30

1. _____
2. _____
3. _____
4. _____
5. _____
6. _____
7. _____
8. _____
9. _____
10. _____
11. _____
12. _____
13. _____
14. _____
15. _____
16. _____



Emparejar el reloj analógico con el reloj digital correspondiente.

Respuestas

1)

2)

3)

4)

5)

6)

7)

8)

9)

10)

11)

12)

13)

14)

15)

16)

1. **I**
2. **N**
3. **M**
4. **O**
5. **E**
6. **H**
7. **L**
8. **P**
9. **C**
10. **F**
11. **G**
12. **K**
13. **J**
14. **B**
15. **D**
16. **A**

A.

B.

C.

D.

E.

F.

G.

H.

I.

J.

K.

L.

M.

N.

O.

P.