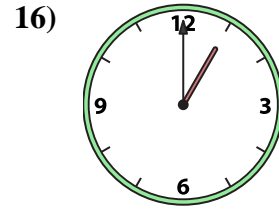
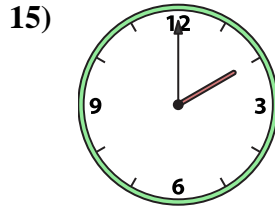
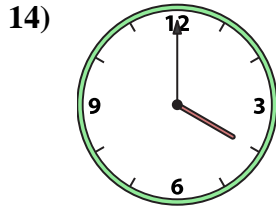
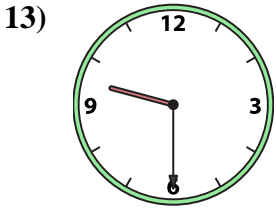
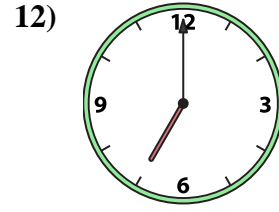
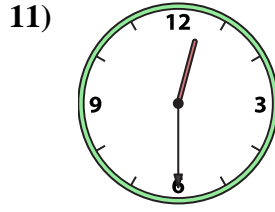
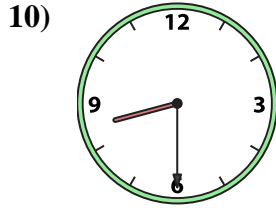

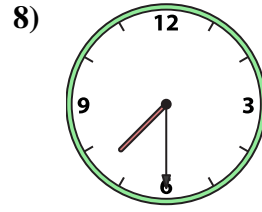
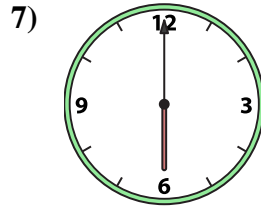
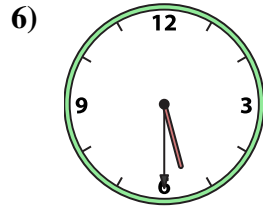
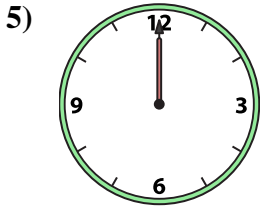
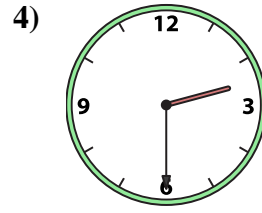
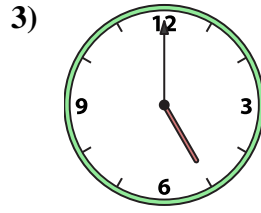
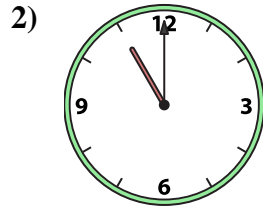
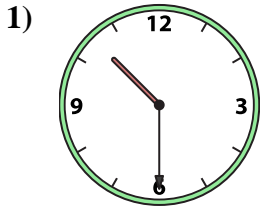




Emparejar el reloj analógico con el reloj digital correspondiente.

**Respuestas**



A.

B.

C.

D.

E.

F.

G.

H.

I.

J.

K.

L.

M.

N.

O.

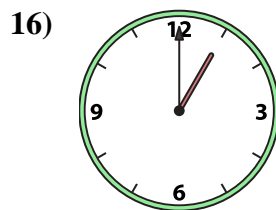

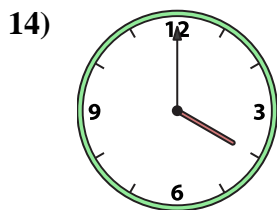
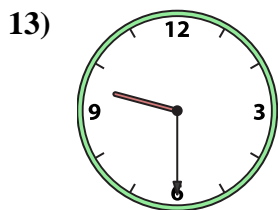
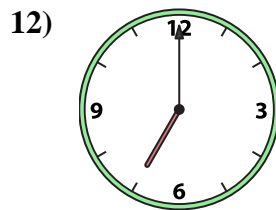
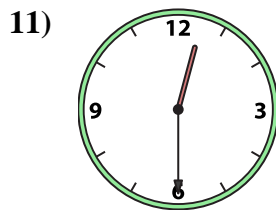
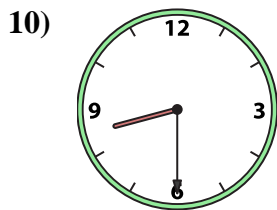
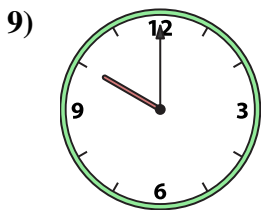
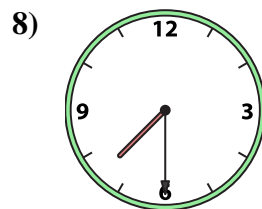
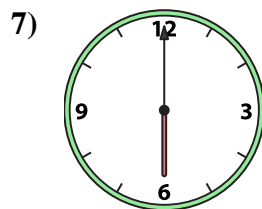
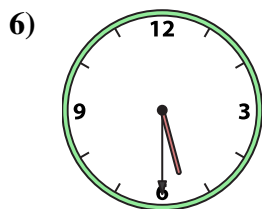
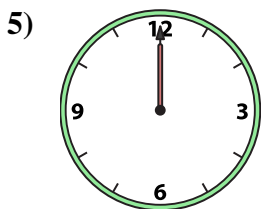
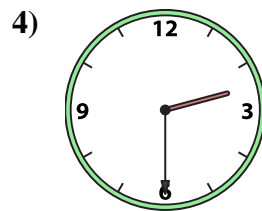
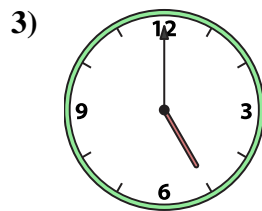
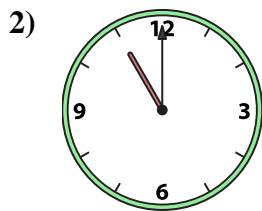
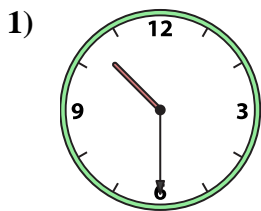
P.

- 1. \_\_\_\_\_
- 2. \_\_\_\_\_
- 3. \_\_\_\_\_
- 4. \_\_\_\_\_
- 5. \_\_\_\_\_
- 6. \_\_\_\_\_
- 7. \_\_\_\_\_
- 8. \_\_\_\_\_
- 9. \_\_\_\_\_
- 10. \_\_\_\_\_
- 11. \_\_\_\_\_
- 12. \_\_\_\_\_
- 13. \_\_\_\_\_
- 14. \_\_\_\_\_
- 15. \_\_\_\_\_
- 16. \_\_\_\_\_



Emparejar el reloj analógico con el reloj digital correspondiente.

**Respuestas**



A. 1:00

B. 4:00

C. 2:00

D. 9:30

E. 10:30

F. 8:30

G. 5:30

H. 12:00

I. 11:00

J. 6:00

K. 5:00

L. 12:30

M. 7:00

N. 7:30

O. 10:00

P. 2:30

1. **E**

2. **I**

3. **K**

4. **P**

5. **H**

6. **G**

7. **J**

8. **N**

9. **O**

10. **F**

11. **L**

12. **M**

13. **D**

14. **B**

15. **C**

16. **A**