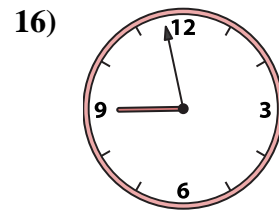
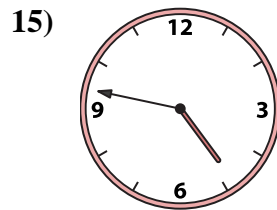
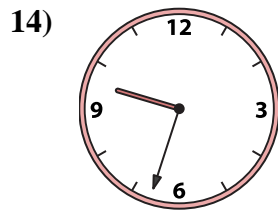
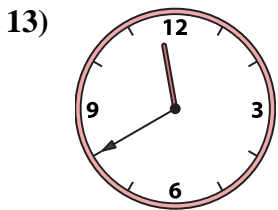
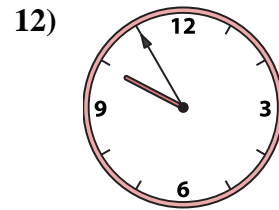
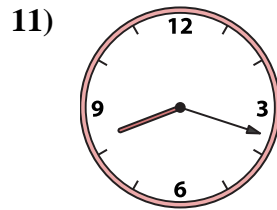
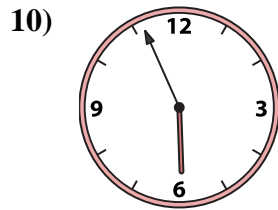
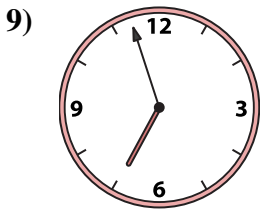
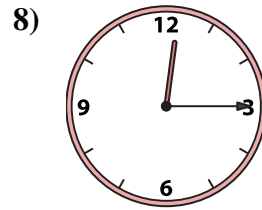
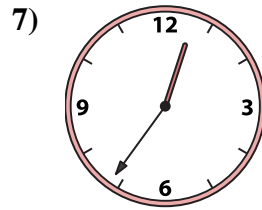
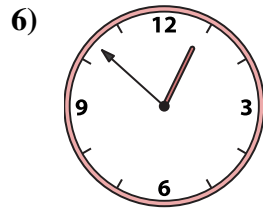

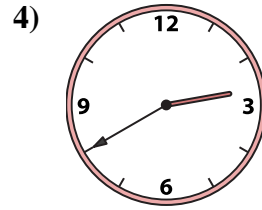
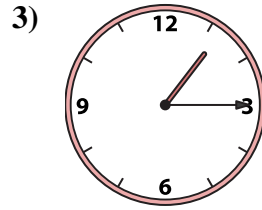
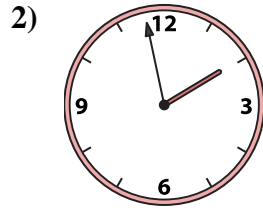
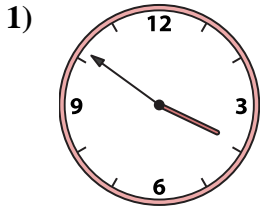




Emparejar el reloj analógico con el reloj digital correspondiente.

Respuestas



1. \_\_\_\_\_
2. \_\_\_\_\_
3. \_\_\_\_\_
4. \_\_\_\_\_
5. \_\_\_\_\_
6. \_\_\_\_\_
7. \_\_\_\_\_
8. \_\_\_\_\_
9. \_\_\_\_\_
10. \_\_\_\_\_
11. \_\_\_\_\_
12. \_\_\_\_\_
13. \_\_\_\_\_
14. \_\_\_\_\_
15. \_\_\_\_\_
16. \_\_\_\_\_

A. 9:55

B. 5:56

C. 4:47

D. 11:40

E. 3:51

F. 1:58

G. 8:18

H. 1:15

I. 6:57

J. 8:58

K. 9:33

L. 12:52

M. 11:55

N. 12:15

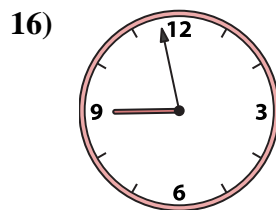
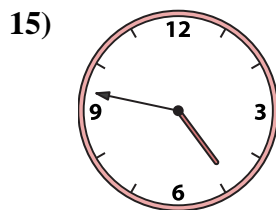
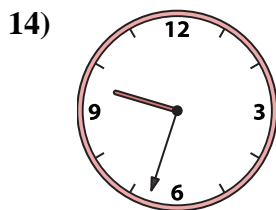
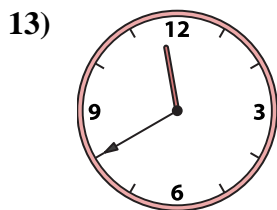
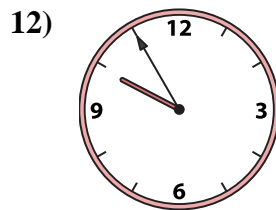
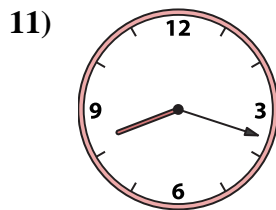
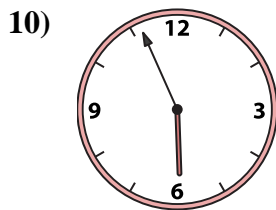
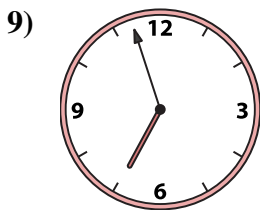
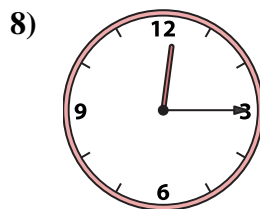
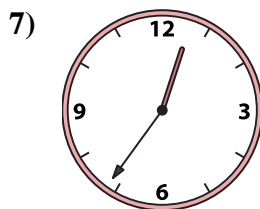
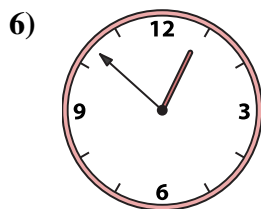

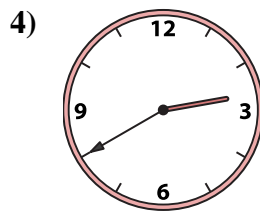
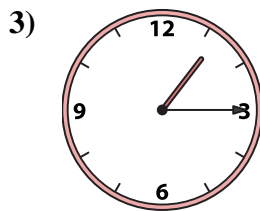
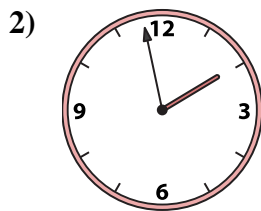
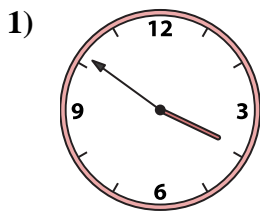
O. 12:36

P. 2:40



Emparejar el reloj analógico con el reloj digital correspondiente.

**Respuestas**



A. 9:55

B. 5:56

C. 4:47

D. 11:40

E. 3:51

F. 1:58

G. 8:18

H. 1:15

I. 6:57

J. 8:58

K. 9:33

L. 12:52

M. 11:55

N. 12:15

O. 12:36

P. 2:40

- 1.   **E**
- 2.   **F**
- 3.   **H**
- 4.   **P**
- 5.   **M**
- 6.   **L**
- 7.   **O**
- 8.   **N**
- 9.   **I**
- 10.   **B**
- 11.   **G**
- 12.   **A**
- 13.   **D**
- 14.   **K**
- 15.   **C**
- 16.   **J**