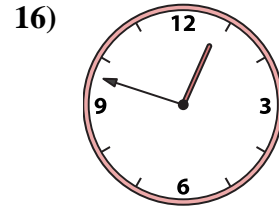
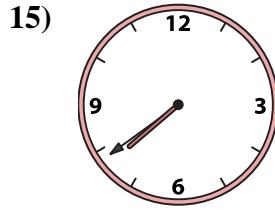
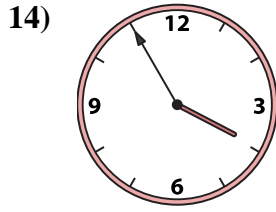
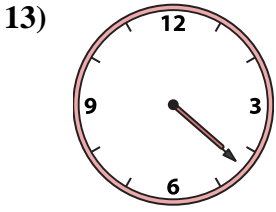
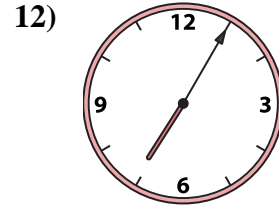
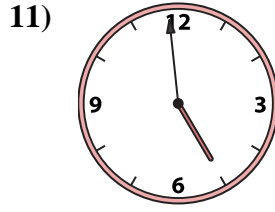
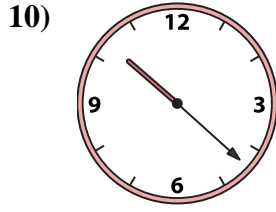
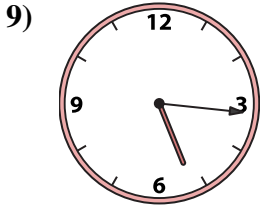
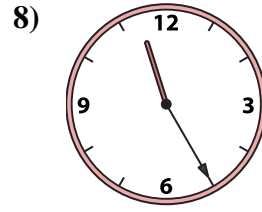
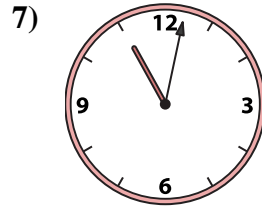
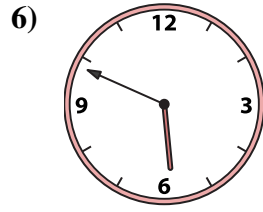
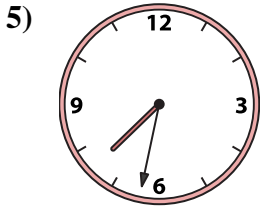
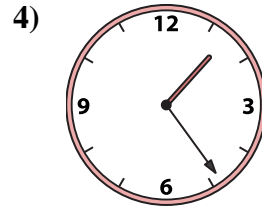
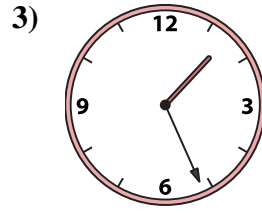
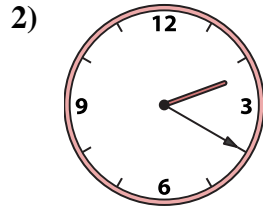





Emparejar el reloj analógico con el reloj digital correspondiente.

**Respuestas**



- 1. \_\_\_\_\_
- 2. \_\_\_\_\_
- 3. \_\_\_\_\_
- 4. \_\_\_\_\_
- 5. \_\_\_\_\_
- 6. \_\_\_\_\_
- 7. \_\_\_\_\_
- 8. \_\_\_\_\_
- 9. \_\_\_\_\_
- 10. \_\_\_\_\_
- 11. \_\_\_\_\_
- 12. \_\_\_\_\_
- 13. \_\_\_\_\_
- 14. \_\_\_\_\_
- 15. \_\_\_\_\_
- 16. \_\_\_\_\_

A. 11:02

B. 1:24

C. 11:25

D. 5:16

E. 4:59

F. 4:22

G. 3:55

H. 5:49

I. 7:32

J. 1:01

K. 1:26

L. 12:48

M. 7:39

N. 2:20

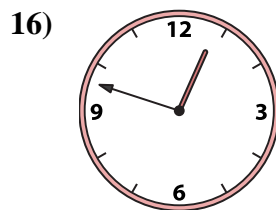
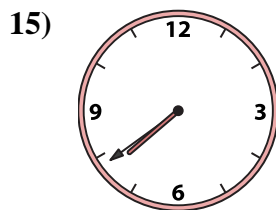
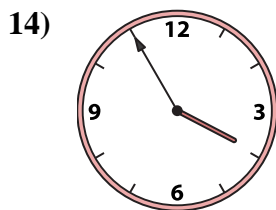
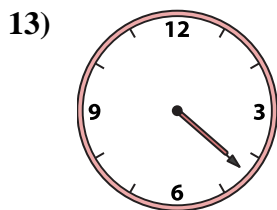
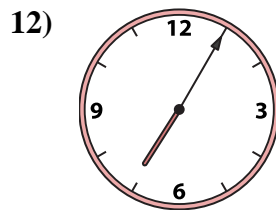
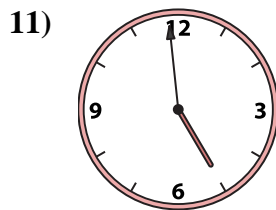
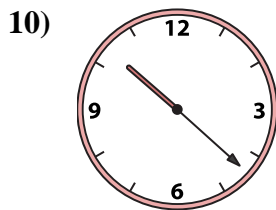
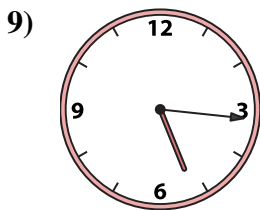
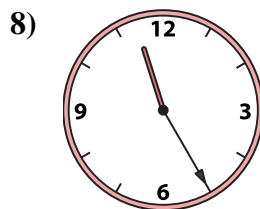
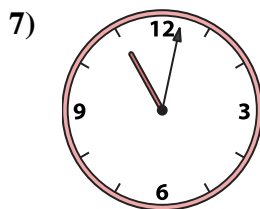
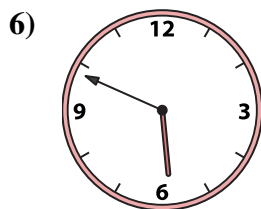
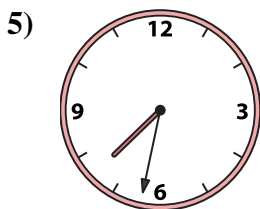
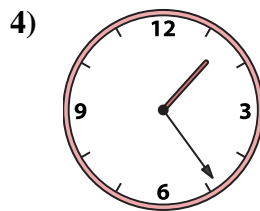
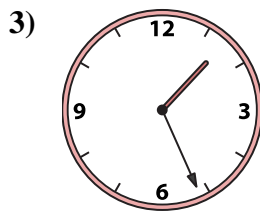
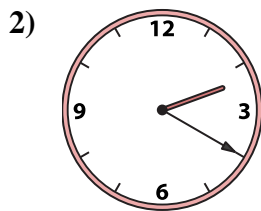

O. 10:22

P. 7:05



Emparejar el reloj analógico con el reloj digital correspondiente.

**Respuestas**



1.     **J**    

2.     **N**    

3.     **K**    

4.     **B**    

5.     **I**    

6.     **H**    

7.     **A**    

8.     **C**    

9.     **D**    

10.     **O**    

11.     **E**    

12.     **P**    

13.     **F**    

14.     **G**    

15.     **M**    

16.     **L**    

A. **11:02**

B. **1:24**

C. **11:25**

D. **5:16**

E. **4:59**

F. **4:22**

G. **3:55**

H. **5:49**

I. **7:32**

J. **1:01**

K. **1:26**

L. **12:48**

M. **7:39**

N. **2:20**

O. **10:22**

P. **7:05**