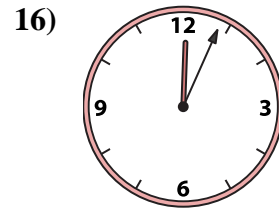
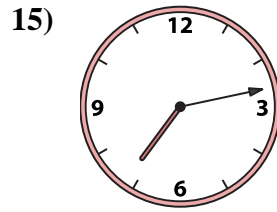
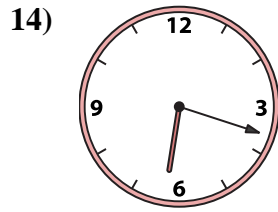
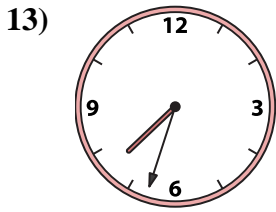
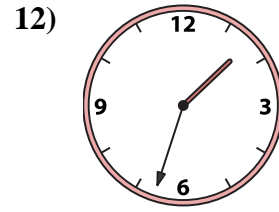
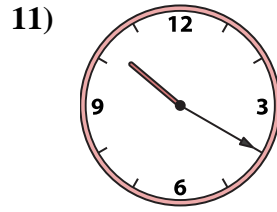
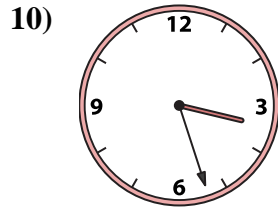

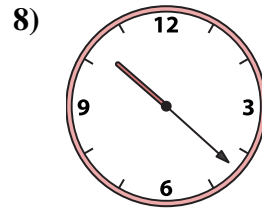
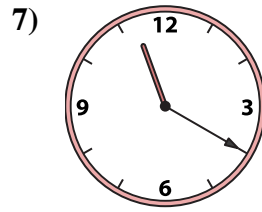
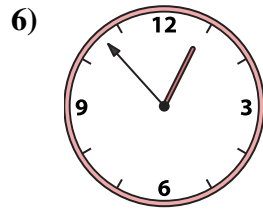
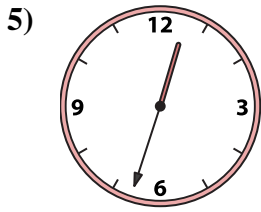
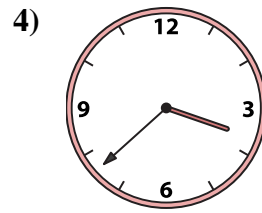
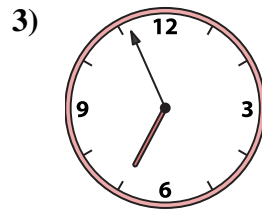
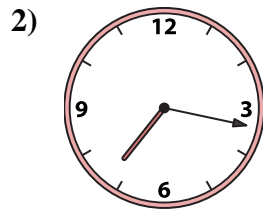
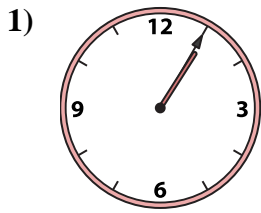




Emparejar el reloj analógico con el reloj digital correspondiente.

Respuestas



- 1. _____
- 2. _____
- 3. _____
- 4. _____
- 5. _____
- 6. _____
- 7. _____
- 8. _____
- 9. _____
- 10. _____
- 11. _____
- 12. _____
- 13. _____
- 14. _____
- 15. _____
- 16. _____

A. 7:33

B. 1:08

C. 6:18

D. 10:22

E. 1:05

F. 12:04

G. 3:27

H. 3:38

I. 12:33

J. 11:20

K. 10:20

L. 7:13

M. 12:53

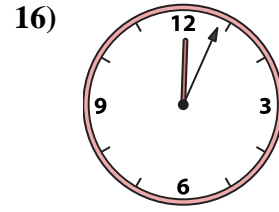
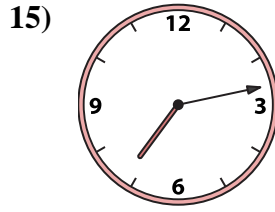
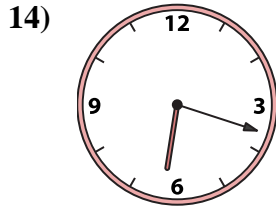
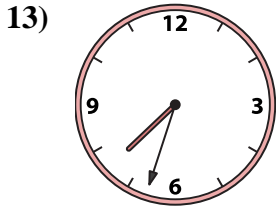
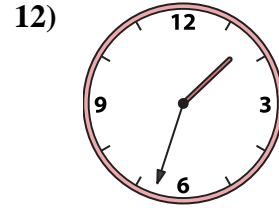
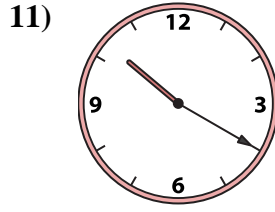
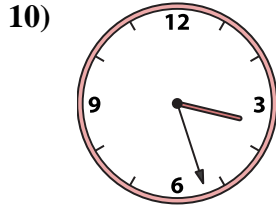
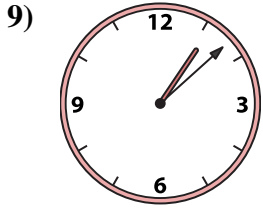
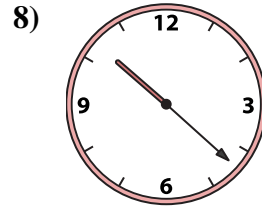
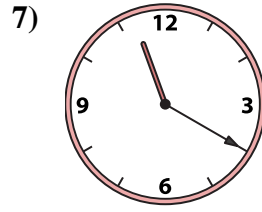
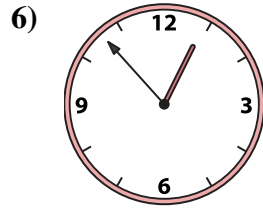
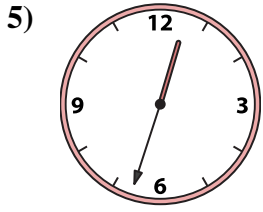
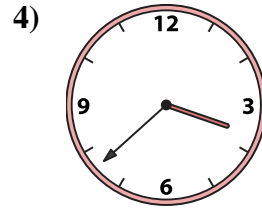
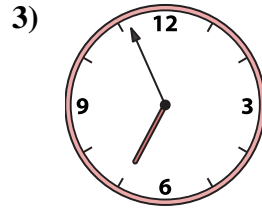
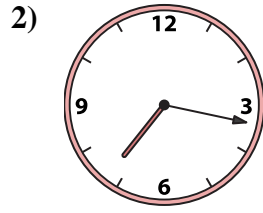

N. 6:56

O. 7:17

P. 1:33



Emparejar el reloj analógico con el reloj digital correspondiente.



A. 7:33

B. 1:08

C. 6:18

D. 10:22

E. 1:05

F. 12:04

G. 3:27

H. 3:38

I. 12:33

J. 11:20

K. 10:20

L. 7:13

M. 12:53

N. 6:56

O. 7:17

P. 1:33

Respuestas

1. **E**

2. **O**

3. **N**

4. **H**

5. **I**

6. **M**

7. **J**

8. **D**

9. **B**

10. **G**

11. **K**

12. **P**

13. **A**

14. **C**

15. **L**

16. **F**