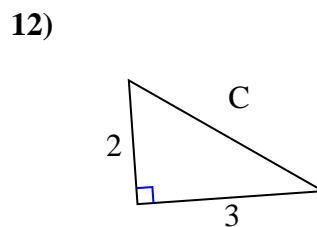
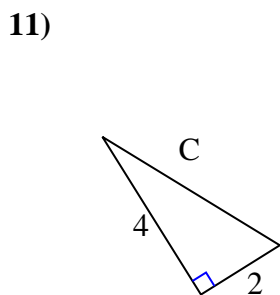
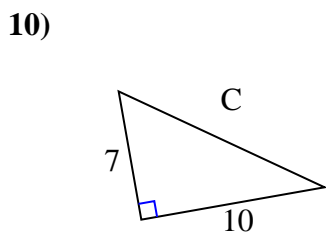
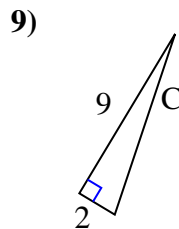
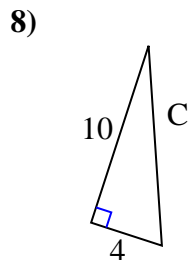
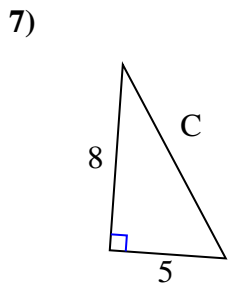
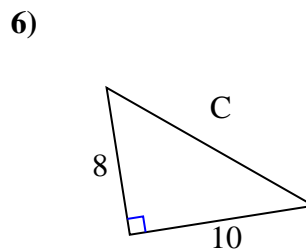
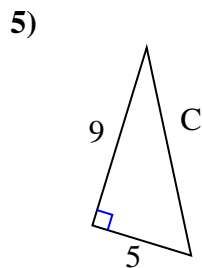
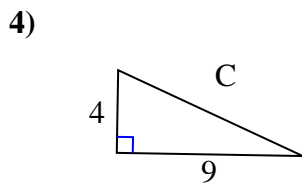
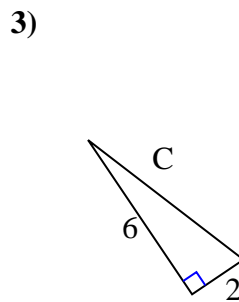
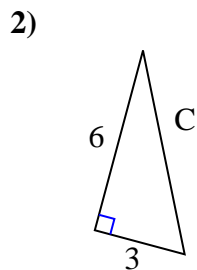
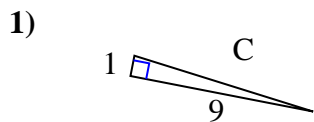




Encuentra el valor de 'C', redondea tu respuesta al centésimo más cercano.

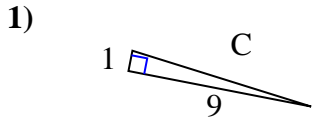
Respuestas



1. _____
2. _____
3. _____
4. _____
5. _____
6. _____
7. _____
8. _____
9. _____
10. _____
11. _____
12. _____

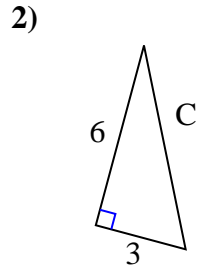


Encuentra el valor de 'C', redondea tu respuesta al centésimo más cercano.

Respuestas

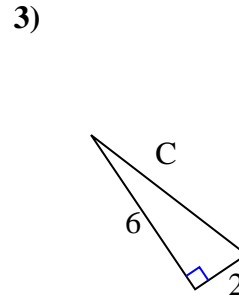
$$1 + 81 = 82$$

$$\sqrt{82} = 9.06$$



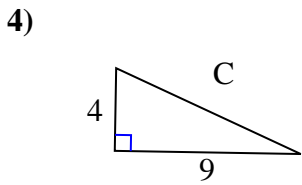
$$36 + 9 = 45$$

$$\sqrt{45} = 6.71$$



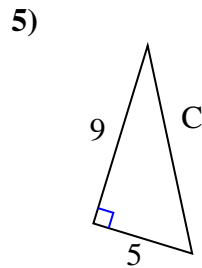
$$36 + 4 = 40$$

$$\sqrt{40} = 6.32$$



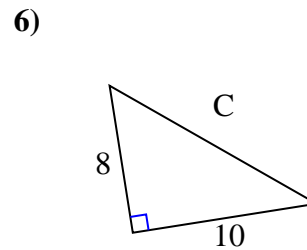
$$16 + 81 = 97$$

$$\sqrt{97} = 9.85$$



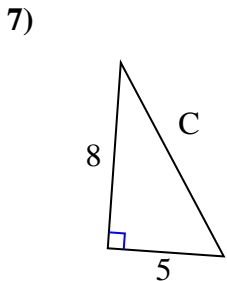
$$81 + 25 = 106$$

$$\sqrt{106} = 10.3$$



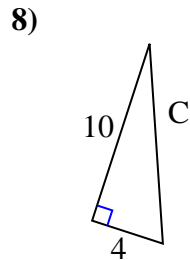
$$64 + 100 = 164$$

$$\sqrt{164} = 12.81$$



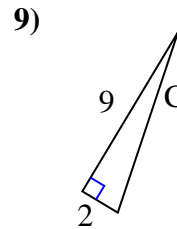
$$64 + 25 = 89$$

$$\sqrt{89} = 9.43$$



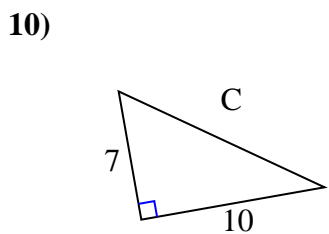
$$100 + 16 = 116$$

$$\sqrt{116} = 10.77$$



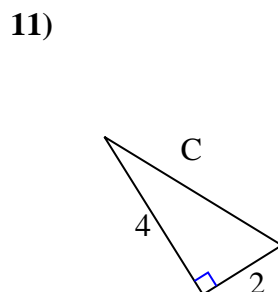
$$81 + 4 = 85$$

$$\sqrt{85} = 9.22$$



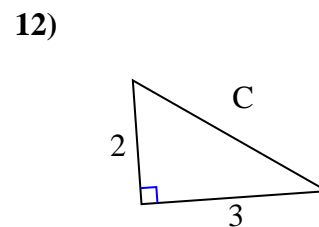
$$49 + 100 = 149$$

$$\sqrt{149} = 12.21$$



$$16 + 4 = 20$$

$$\sqrt{20} = 4.47$$



$$4 + 9 = 13$$

$$\sqrt{13} = 3.61$$

1. 9.06
2. 6.71
3. 6.32
4. 9.85
5. 10.3
6. 12.81
7. 9.43
8. 10.77
9. 9.22
10. 12.21
11. 4.47
12. 3.61