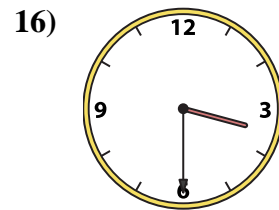
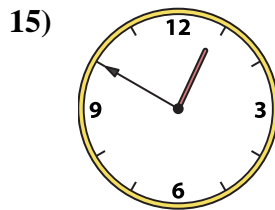
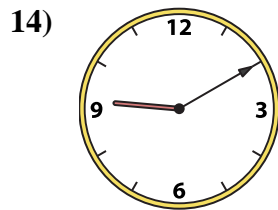
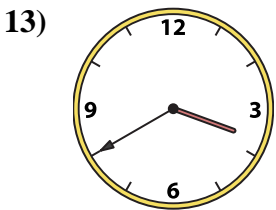
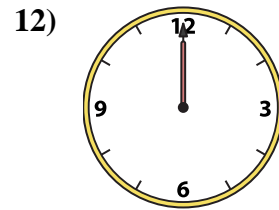
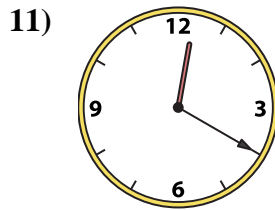
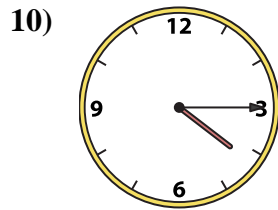
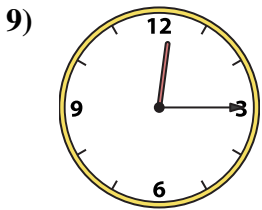
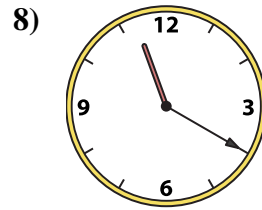
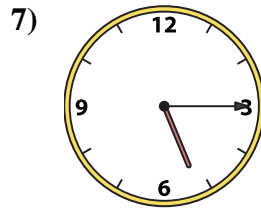
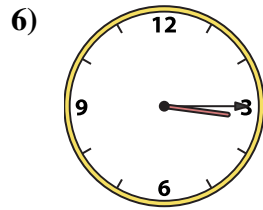
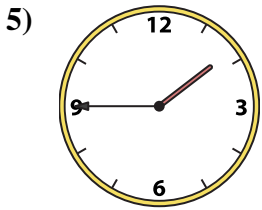
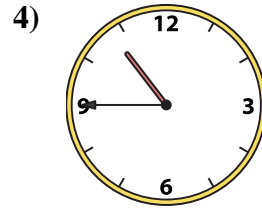
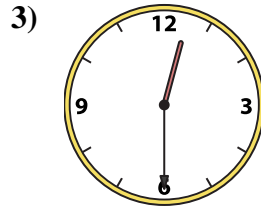
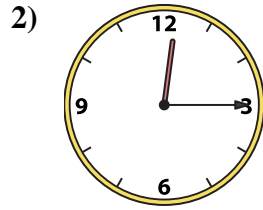
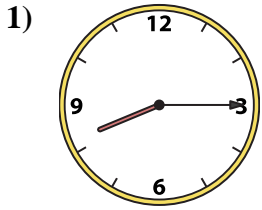




Emparejar el reloj analógico con el reloj digital correspondiente.

Respuestas



1. \_\_\_\_\_
2. \_\_\_\_\_
3. \_\_\_\_\_
4. \_\_\_\_\_
5. \_\_\_\_\_
6. \_\_\_\_\_
7. \_\_\_\_\_
8. \_\_\_\_\_
9. \_\_\_\_\_
10. \_\_\_\_\_
11. \_\_\_\_\_
12. \_\_\_\_\_
13. \_\_\_\_\_
14. \_\_\_\_\_
15. \_\_\_\_\_
16. \_\_\_\_\_

A. 3:40

B. 9:10

C. 12:20

D. 12:15

E. 12:00

F. 12:15

G. 10:45

H. 12:50

I. 8:15

J. 11:20

K. 5:15

L. 1:45

M. 12:30

N. 4:15

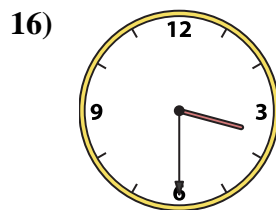
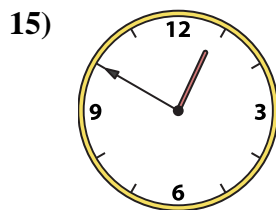
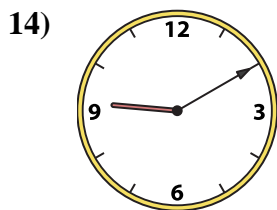
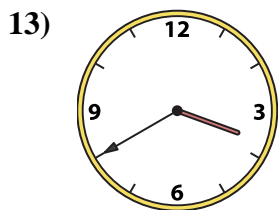
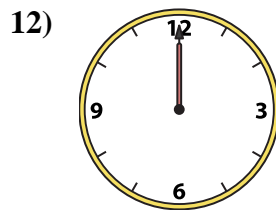
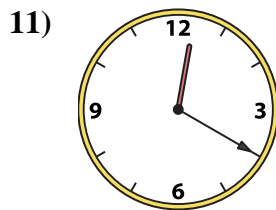
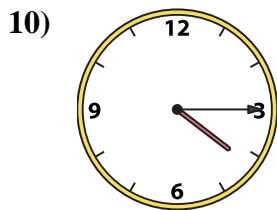
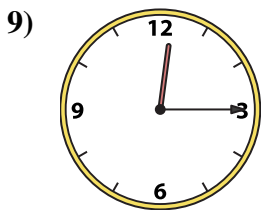

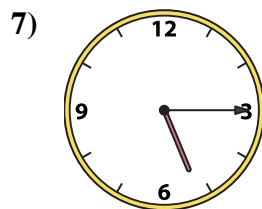
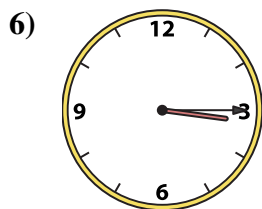
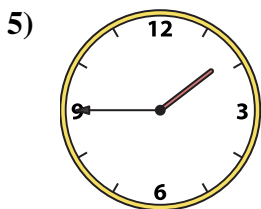
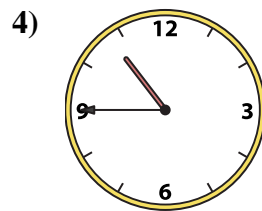
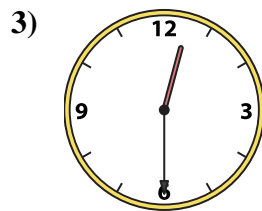
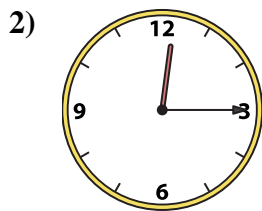
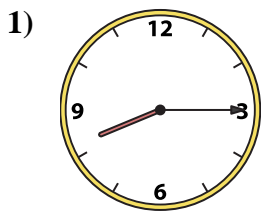
O. 3:30

P. 3:15



Emparejar el reloj analógico con el reloj digital correspondiente.

**Respuestas**



1. I

2. D

3. M

4. G

5. L

6. P

7. K

8. J

9. F

10. N

11. C

12. E

13. A

14. B

15. H

16. O

A. **3:40**

B. **9:10**

C. **12:20**

D. **12:15**

E. **12:00**

F. **12:15**

G. **10:45**

H. **12:50**

I. **8:15**

J. **11:20**

K. **5:15**

L. **1:45**

M. **12:30**

N. **4:15**

O. **3:30**

P. **3:15**