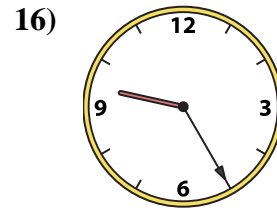
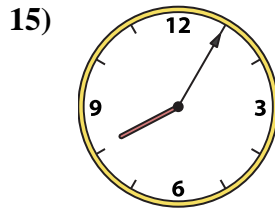
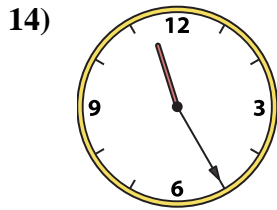
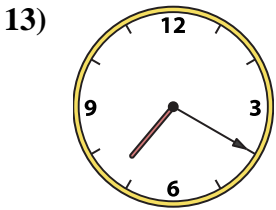
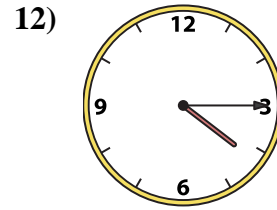
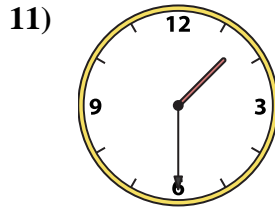
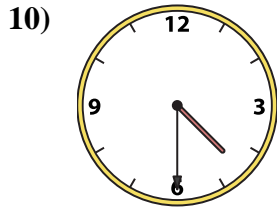

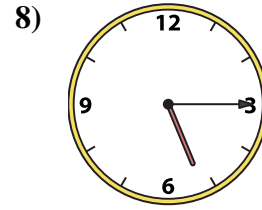
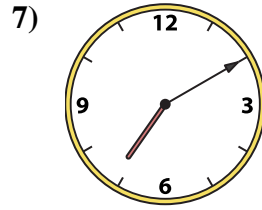
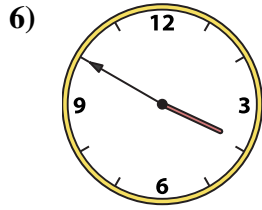

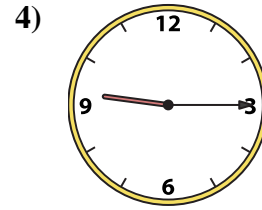
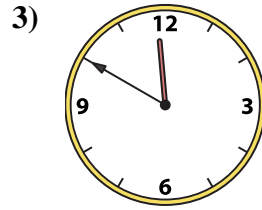
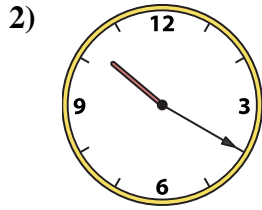
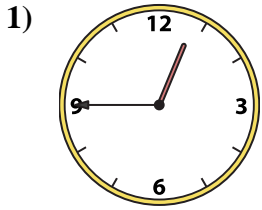




Emparejar el reloj analógico con el reloj digital correspondiente.

Respuestas



A. 11:55

B. 9:25

C. 11:50

D. 3:50

E. 12:45

F. 1:30

G. 11:25

H. 7:10

I. 4:30

J. 5:15

K. 7:20

L. 10:20

M. 9:15

N. 12:50

O. 4:15

P. 8:05

1. \_\_\_\_\_
2. \_\_\_\_\_
3. \_\_\_\_\_
4. \_\_\_\_\_
5. \_\_\_\_\_
6. \_\_\_\_\_
7. \_\_\_\_\_
8. \_\_\_\_\_
9. \_\_\_\_\_
10. \_\_\_\_\_
11. \_\_\_\_\_
12. \_\_\_\_\_
13. \_\_\_\_\_
14. \_\_\_\_\_
15. \_\_\_\_\_
16. \_\_\_\_\_



Emparejar el reloj analógico con el reloj digital correspondiente.

1)

2)

3)

4)

5)

6)

7)

8)

9)

10)

11)

12)

13)

14)

15)

16)

Respuestas

1.     **E**
2.     **L**
3.     **C**
4.     **M**
5.     **A**
6.     **D**
7.     **H**
8.     **J**
9.     **N**
10.     **I**
11.     **F**
12.     **O**
13.     **K**
14.     **G**
15.     **P**
16.     **B**

A.

B.

C.

D.

E.

F.

G.

H.

I.

J.

K.

L.

M.

N.

O.

P.