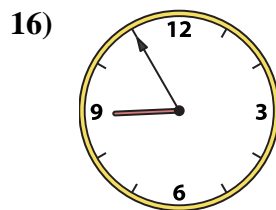
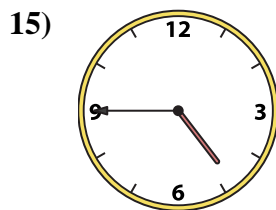
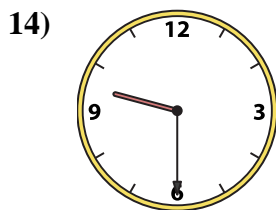

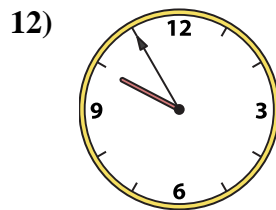
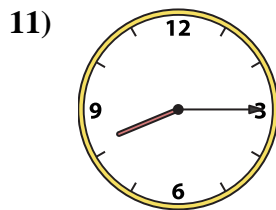
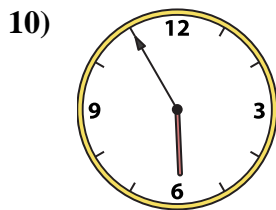
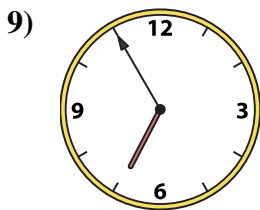
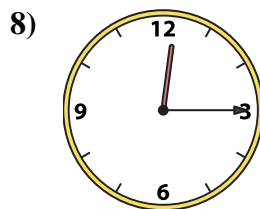
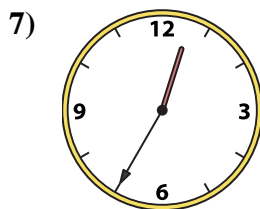
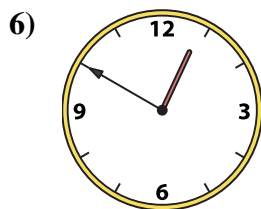

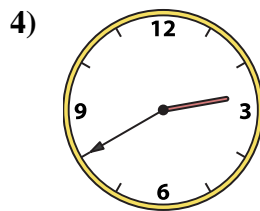
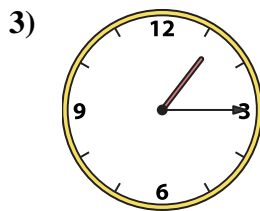
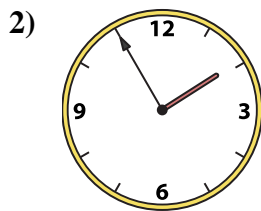
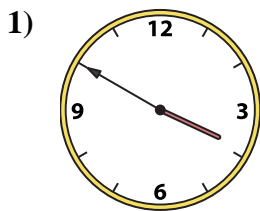




Emparejar el reloj analógico con el reloj digital correspondiente.

Respuestas



1. \_\_\_\_\_
2. \_\_\_\_\_
3. \_\_\_\_\_
4. \_\_\_\_\_
5. \_\_\_\_\_
6. \_\_\_\_\_
7. \_\_\_\_\_
8. \_\_\_\_\_
9. \_\_\_\_\_
10. \_\_\_\_\_
11. \_\_\_\_\_
12. \_\_\_\_\_
13. \_\_\_\_\_
14. \_\_\_\_\_
15. \_\_\_\_\_
16. \_\_\_\_\_

A. 9:55

B. 5:55

C. 4:45

D. 11:40

E. 3:50

F. 1:55

G. 8:15

H. 1:15

I. 6:55

J. 8:55

K. 9:30

L. 12:50

M. 11:55

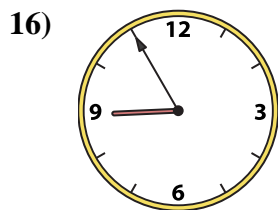
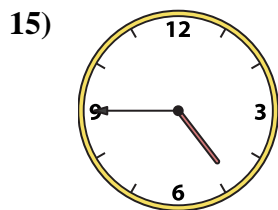
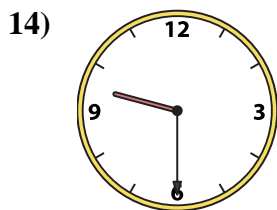

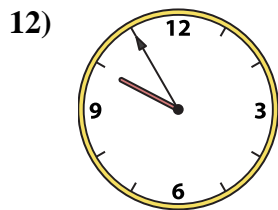
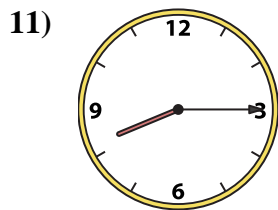
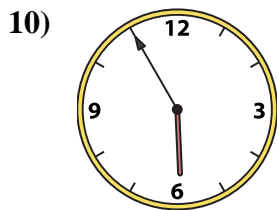
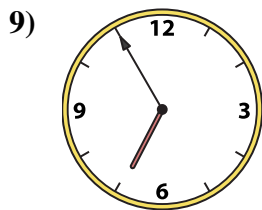
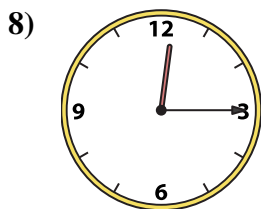
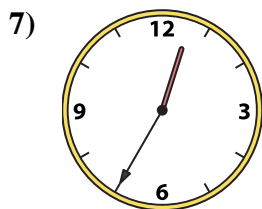
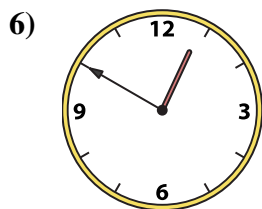

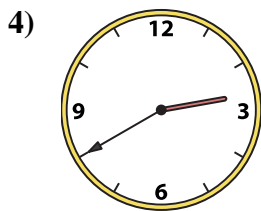
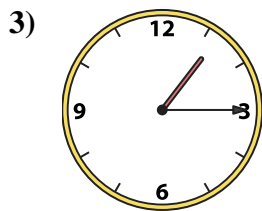
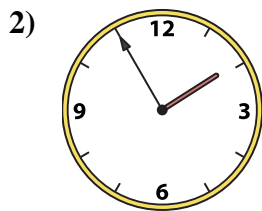
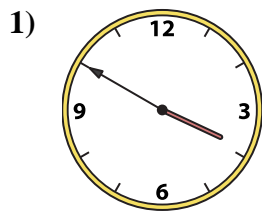
N. 12:15

O. 12:35

P. 2:40



Emparejar el reloj analógico con el reloj digital correspondiente.



A. 9:55

B. 5:55

C. 4:45

D. 11:40

E. 3:50

F. 1:55

G. 8:15

H. 1:15

I. 6:55

J. 8:55

K. 9:30

L. 12:50

M. 11:55

N. 12:15

O. 12:35

P. 2:40

Respuestas

1. **E**

2. **F**

3. **H**

4. **P**

5. **M**

6. **L**

7. **O**

8. **N**

9. **I**

10. **B**

11. **G**

12. **A**

13. **D**

14. **K**

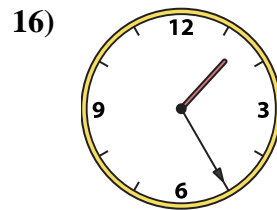
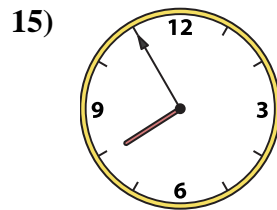
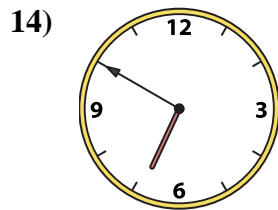
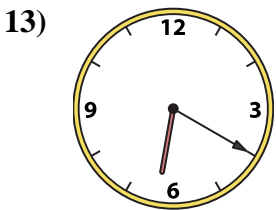
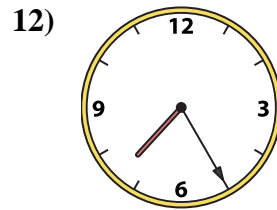
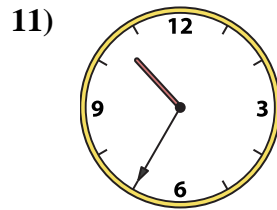
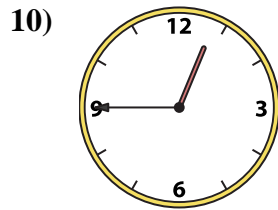
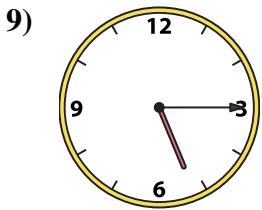
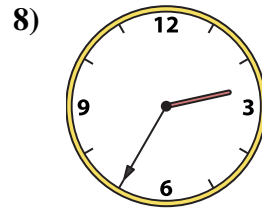
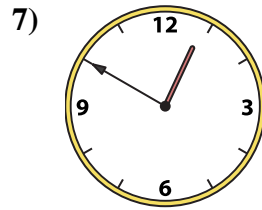
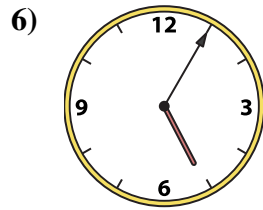
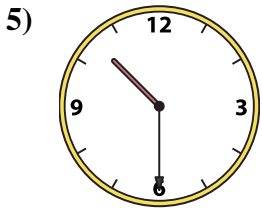
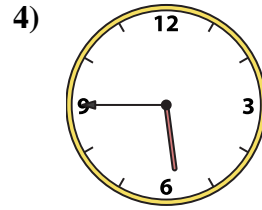
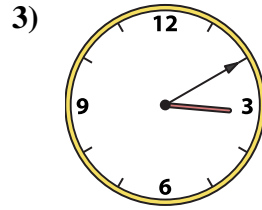
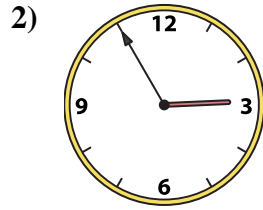

15. **C**

16. **J**



Emparejar el reloj analógico con el reloj digital correspondiente.

Respuestas



A. 2:55

B. 10:30

C. 7:55

D. 6:20

E. 3:10

F. 5:45

G. 2:35

H. 1:25

I. 5:05

J. 10:35

K. 7:25

L. 12:50

M. 5:15

N. 12:45

O. 11:00

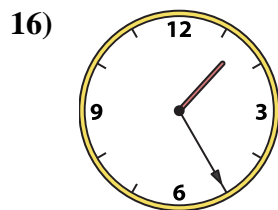
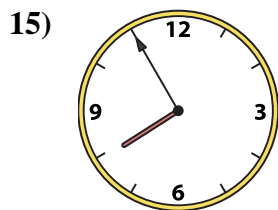
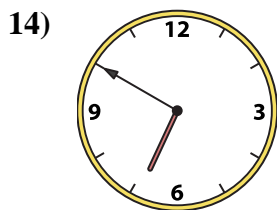
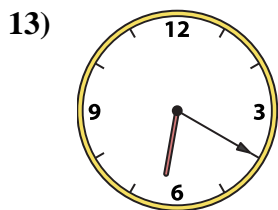
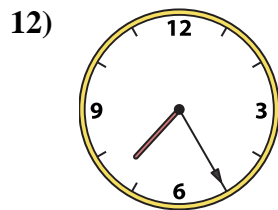
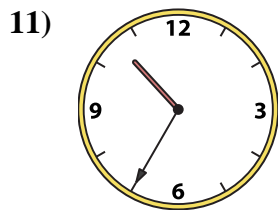
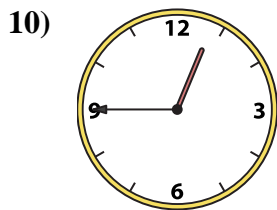
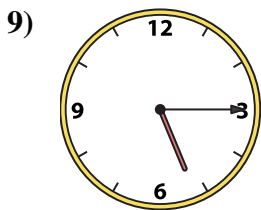
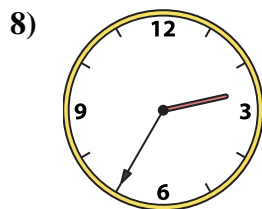
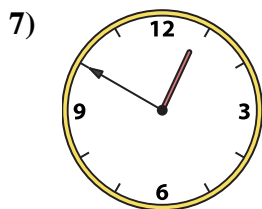
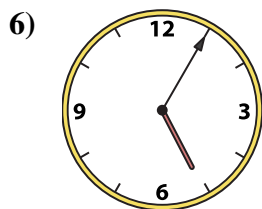
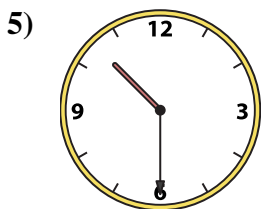
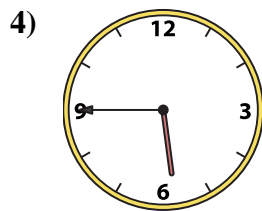
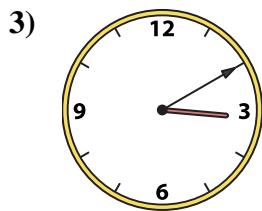
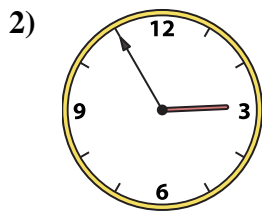
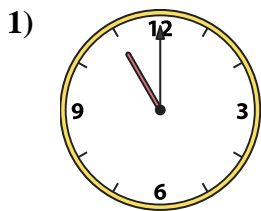
P. 6:50

1. \_\_\_\_\_
2. \_\_\_\_\_
3. \_\_\_\_\_
4. \_\_\_\_\_
5. \_\_\_\_\_
6. \_\_\_\_\_
7. \_\_\_\_\_
8. \_\_\_\_\_
9. \_\_\_\_\_
10. \_\_\_\_\_
11. \_\_\_\_\_
12. \_\_\_\_\_
13. \_\_\_\_\_
14. \_\_\_\_\_
15. \_\_\_\_\_
16. \_\_\_\_\_



Emparejar el reloj analógico con el reloj digital correspondiente.

**Respuestas**



1.     **O**    

2.     **A**    

3.     **E**    

4.     **F**    

5.     **B**    

6.     **I**    

7.     **L**    

8.     **G**    

9.     **M**    

10.     **N**    

11.     **J**    

12.     **K**    

13.     **D**    

14.     **P**    

15.     **C**    

16.     **H**    

A. **2:55**

B. **10:30**

C. **7:55**

D. **6:20**

E. **3:10**

F. **5:45**

G. **2:35**

H. **1:25**

I. **5:05**

J. **10:35**

K. **7:25**

L. **12:50**

M. **5:15**

N. **12:45**

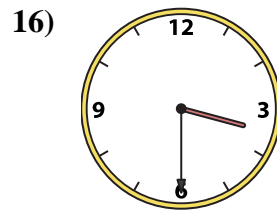
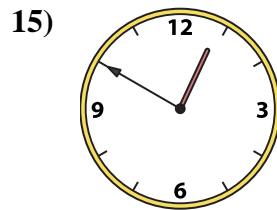
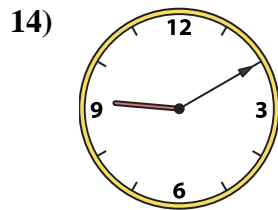
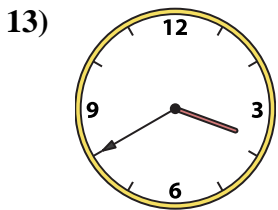
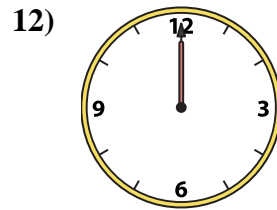
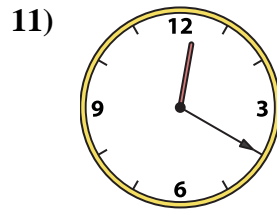
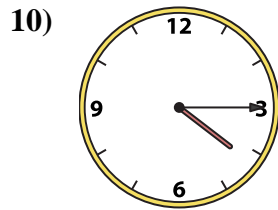
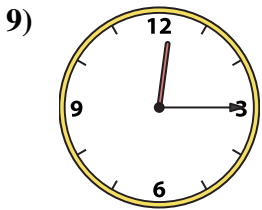
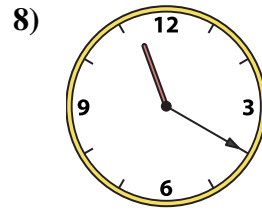
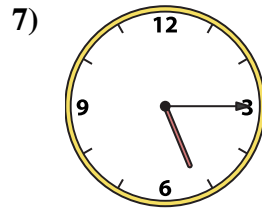
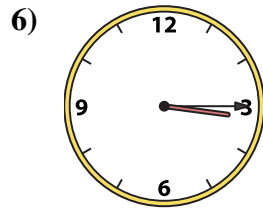
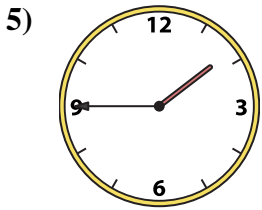
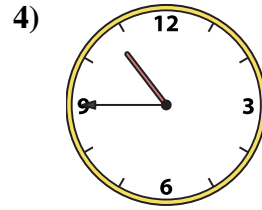
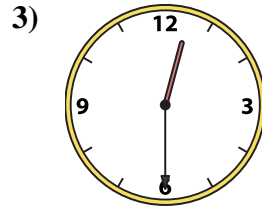
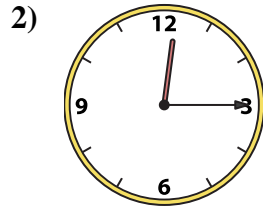
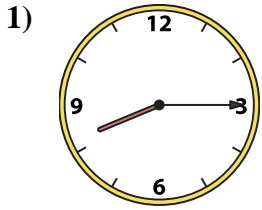
O. **11:00**

P. **6:50**



Emparejar el reloj analógico con el reloj digital correspondiente.

**Respuestas**



A.

B.

C.

D.

E.

F.

G.

H.

I.

J.

K.

L.

M.

N.

O.

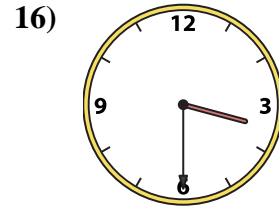
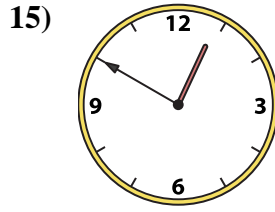
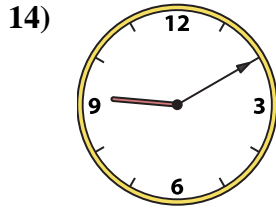
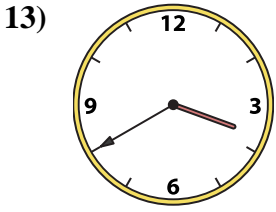
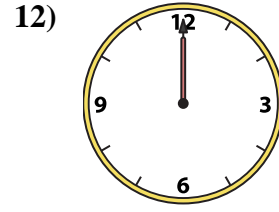
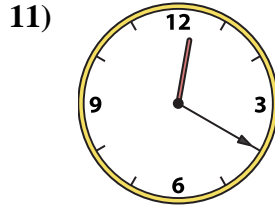
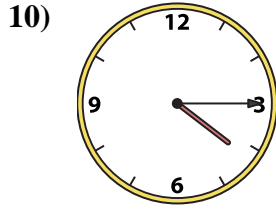
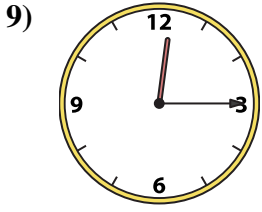
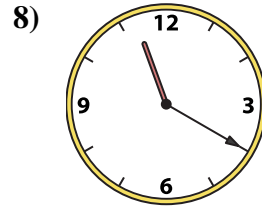
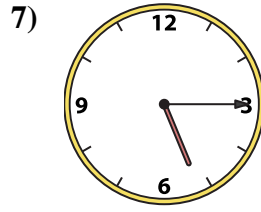
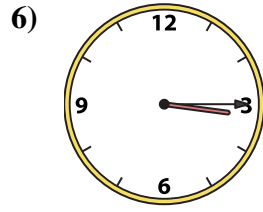
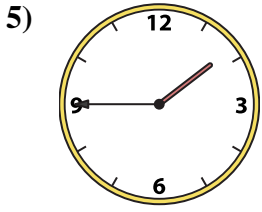
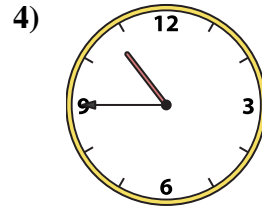
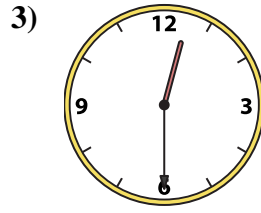
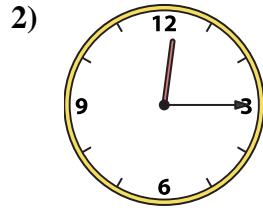
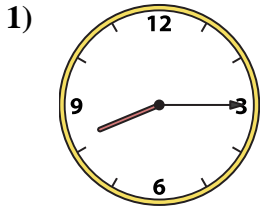
P.

1. \_\_\_\_\_
2. \_\_\_\_\_
3. \_\_\_\_\_
4. \_\_\_\_\_
5. \_\_\_\_\_
6. \_\_\_\_\_
7. \_\_\_\_\_
8. \_\_\_\_\_
9. \_\_\_\_\_
10. \_\_\_\_\_
11. \_\_\_\_\_
12. \_\_\_\_\_
13. \_\_\_\_\_
14. \_\_\_\_\_
15. \_\_\_\_\_
16. \_\_\_\_\_



Emparejar el reloj analógico con el reloj digital correspondiente.

**Respuestas**



1. I

2. D

3. M

4. G

5. L

6. P

7. K

8. J

9. F

10. N

11. C

12. E

13. A

14. B

15. H

16. O

A. **3:40**

B. **9:10**

C. **12:20**

D. **12:15**

E. **12:00**

F. **12:15**

G. **10:45**

H. **12:50**

I. **8:15**

J. **11:20**

K. **5:15**

L. **1:45**

M. **12:30**

N. **4:15**

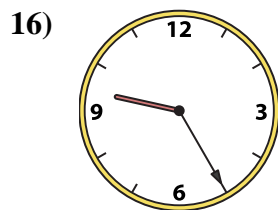
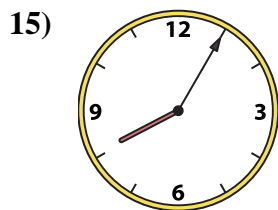
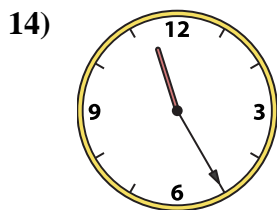
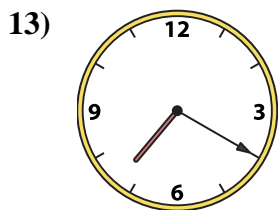
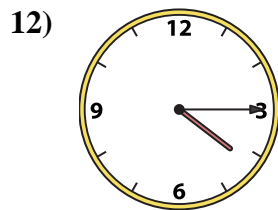
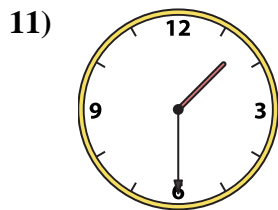
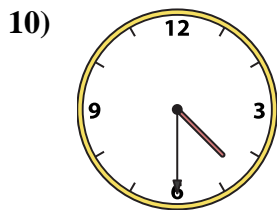
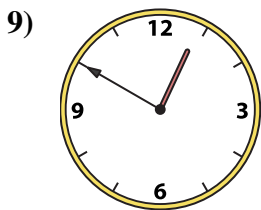
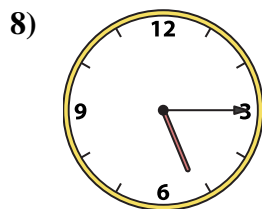
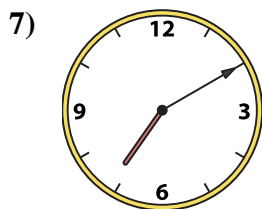
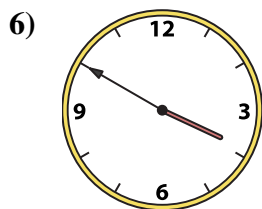

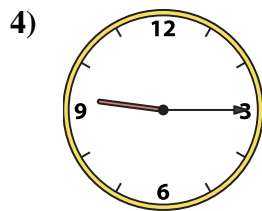
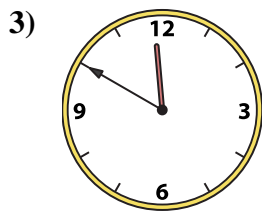
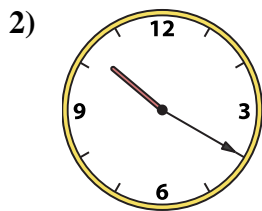
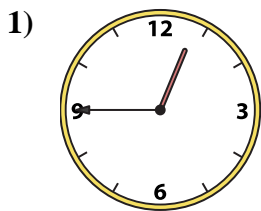
O. **3:30**

P. **3:15**



Emparejar el reloj analógico con el reloj digital correspondiente.

Respuestas



A. 11:55

B. 9:25

C. 11:50

D. 3:50

E. 12:45

F. 1:30

G. 11:25

H. 7:10

I. 4:30

J. 5:15

K. 7:20

L. 10:20

M. 9:15

N. 12:50

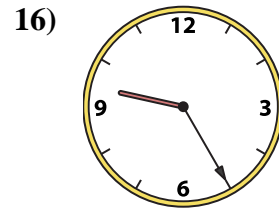
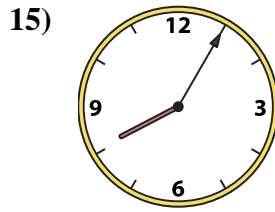
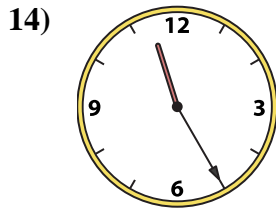
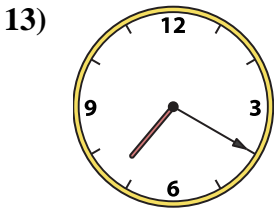
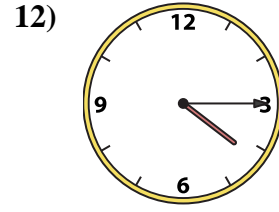
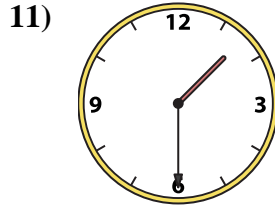
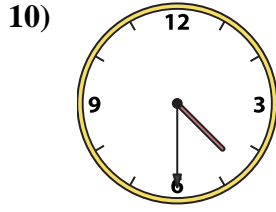
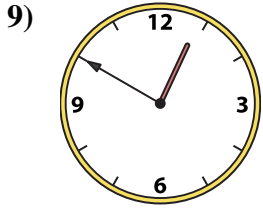
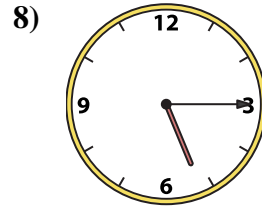
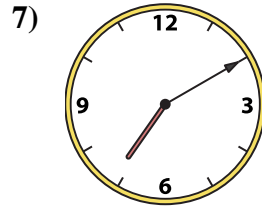
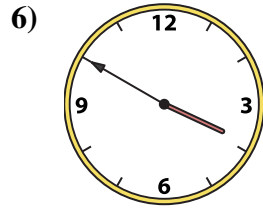
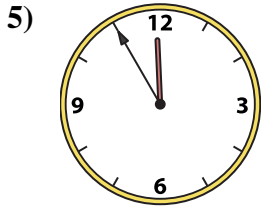
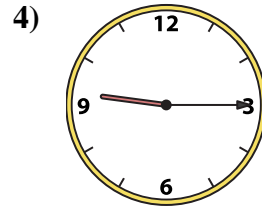
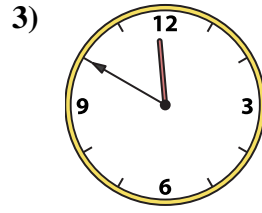
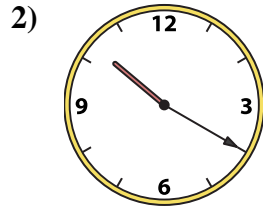
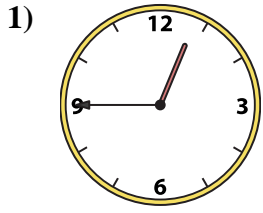
O. 4:15

P. 8:05

- 1. \_\_\_\_\_
- 2. \_\_\_\_\_
- 3. \_\_\_\_\_
- 4. \_\_\_\_\_
- 5. \_\_\_\_\_
- 6. \_\_\_\_\_
- 7. \_\_\_\_\_
- 8. \_\_\_\_\_
- 9. \_\_\_\_\_
- 10. \_\_\_\_\_
- 11. \_\_\_\_\_
- 12. \_\_\_\_\_
- 13. \_\_\_\_\_
- 14. \_\_\_\_\_
- 15. \_\_\_\_\_
- 16. \_\_\_\_\_



Emparejar el reloj analógico con el reloj digital correspondiente.



A. 11:55

B. 9:25

C. 11:50

D. 3:50

E. 12:45

F. 1:30

G. 11:25

H. 7:10

I. 4:30

J. 5:15

K. 7:20

L. 10:20

M. 9:15

N. 12:50

O. 4:15

P. 8:05

Respuestas

1. **E**

2. **L**

3. **C**

4. **M**

5. **A**

6. **D**

7. **H**

8. **J**

9. **N**

10. **I**

11. **F**

12. **O**

13. **K**

14. **G**

15. **P**

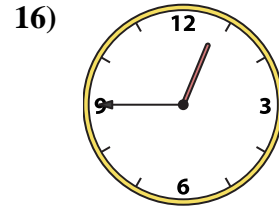
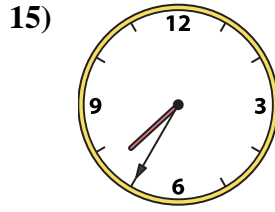
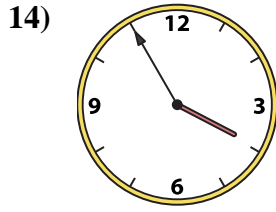
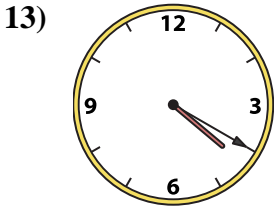
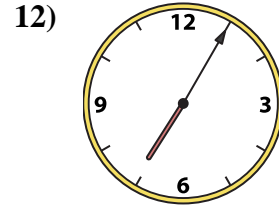
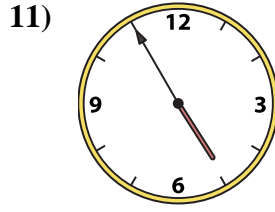
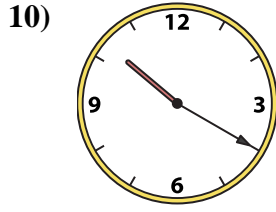
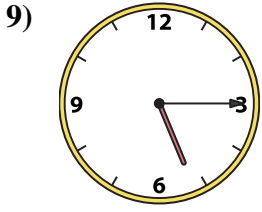
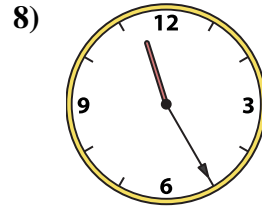
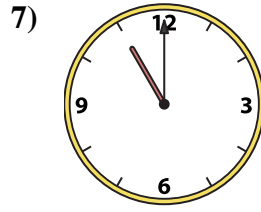
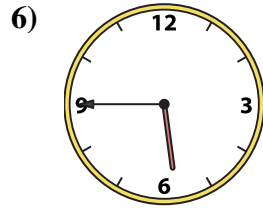
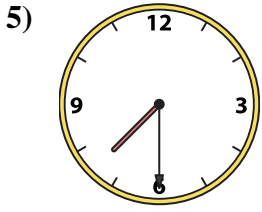
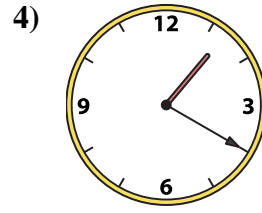
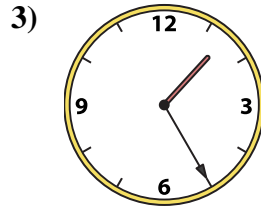
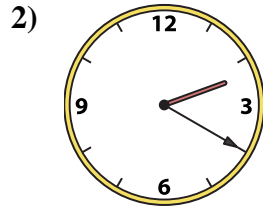

16. **B**





Emparejar el reloj analógico con el reloj digital correspondiente.

Respuestas



A. 11:00

B. 1:20

C. 11:25

D. 5:15

E. 4:55

F. 4:20

G. 3:55

H. 5:45

I. 7:30

J. 1:00

K. 1:25

L. 12:45

M. 7:35

N. 2:20

O. 10:20

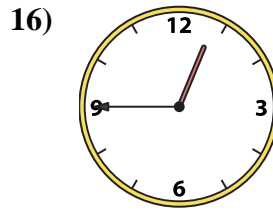
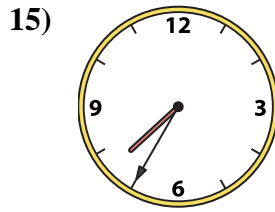
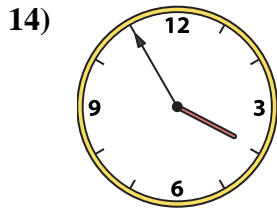
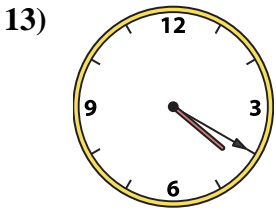
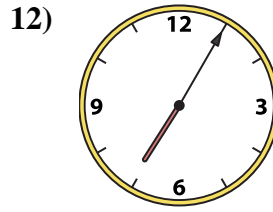
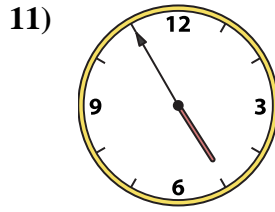
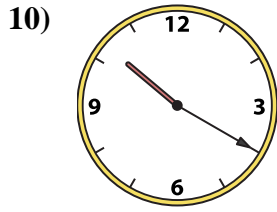
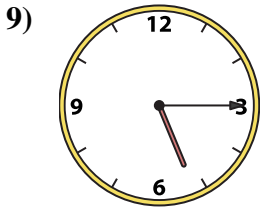

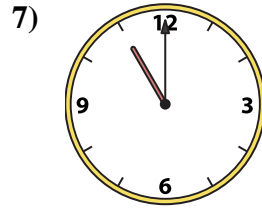
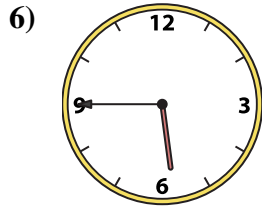
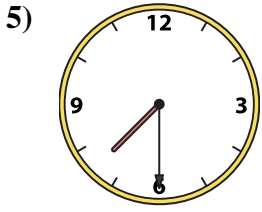
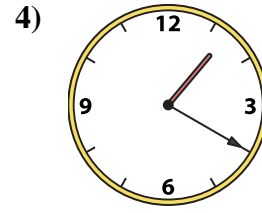
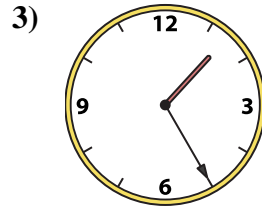
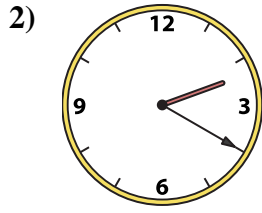

P. 7:05

1. \_\_\_\_\_
2. \_\_\_\_\_
3. \_\_\_\_\_
4. \_\_\_\_\_
5. \_\_\_\_\_
6. \_\_\_\_\_
7. \_\_\_\_\_
8. \_\_\_\_\_
9. \_\_\_\_\_
10. \_\_\_\_\_
11. \_\_\_\_\_
12. \_\_\_\_\_
13. \_\_\_\_\_
14. \_\_\_\_\_
15. \_\_\_\_\_
16. \_\_\_\_\_



Emparejar el reloj analógico con el reloj digital correspondiente.

**Respuestas**



A. 11:00

B. 1:20

C. 11:25

D. 5:15

E. 4:55

F. 4:20

G. 3:55

H. 5:45

I. 7:30

J. 1:00

K. 1:25

L. 12:45

M. 7:35

N. 2:20

O. 10:20

P. 7:05

1. **J**

2. **N**

3. **K**

4. **B**

5. **I**

6. **H**

7. **A**

8. **C**

9. **D**

10. **O**

11. **E**

12. **P**

13. **F**

14. **G**

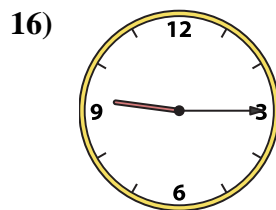
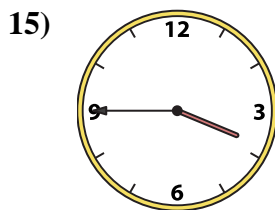
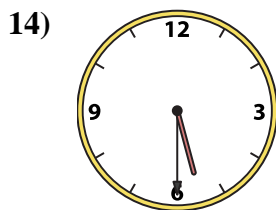
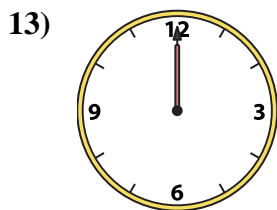
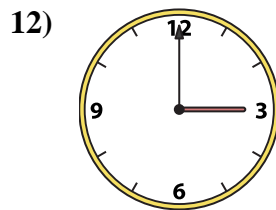
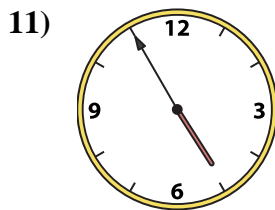
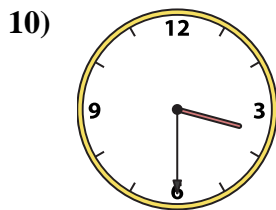
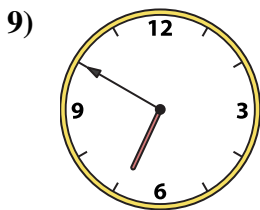
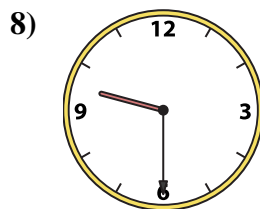
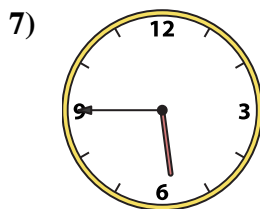

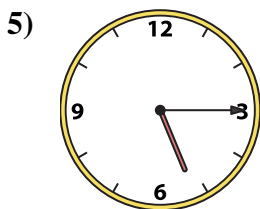
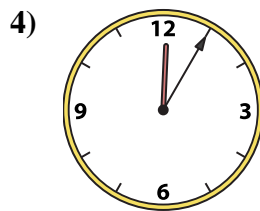
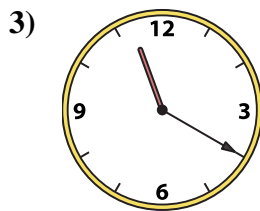
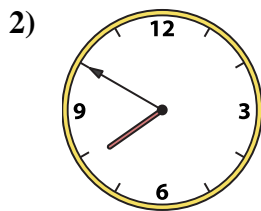
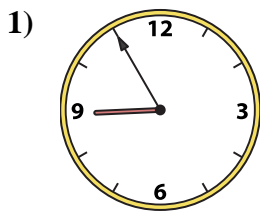
15. **M**

16. **L**



Emparejar el reloj analógico con el reloj digital correspondiente.

Respuestas



A. 5:45

B. 3:00

C. 3:45

D. 12:05

E. 3:30

F. 6:50

G. 7:50

H. 12:00

I. 9:30

J. 3:55

K. 4:55

L. 8:55

M. 5:15

N. 9:15

O. 11:20

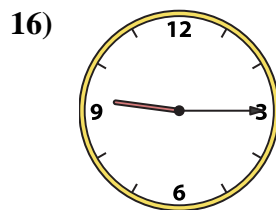
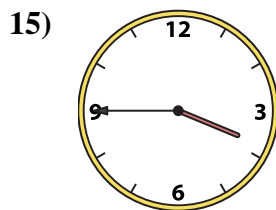
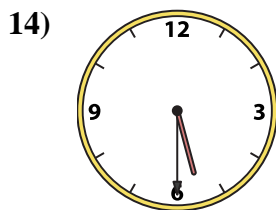
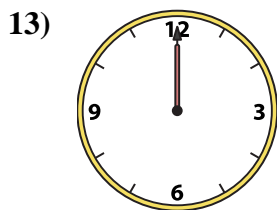
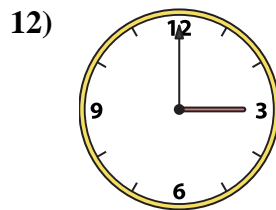
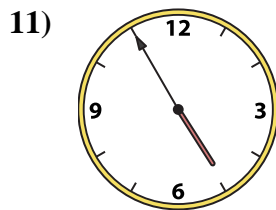
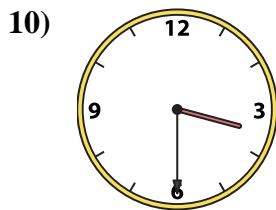
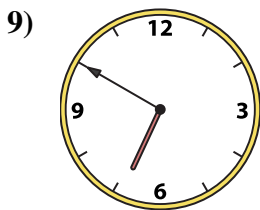
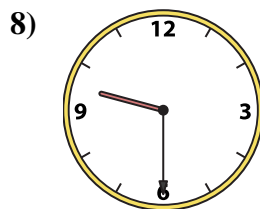
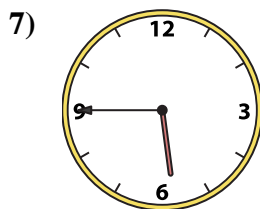

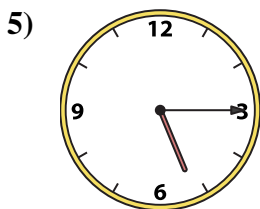
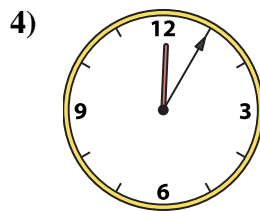
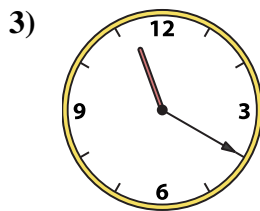
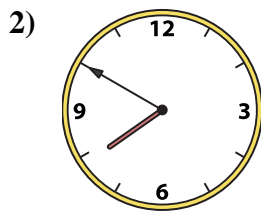
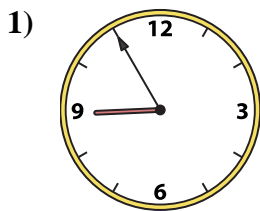
P. 5:30

- 1. \_\_\_\_\_
- 2. \_\_\_\_\_
- 3. \_\_\_\_\_
- 4. \_\_\_\_\_
- 5. \_\_\_\_\_
- 6. \_\_\_\_\_
- 7. \_\_\_\_\_
- 8. \_\_\_\_\_
- 9. \_\_\_\_\_
- 10. \_\_\_\_\_
- 11. \_\_\_\_\_
- 12. \_\_\_\_\_
- 13. \_\_\_\_\_
- 14. \_\_\_\_\_
- 15. \_\_\_\_\_
- 16. \_\_\_\_\_



Emparejar el reloj analógico con el reloj digital correspondiente.

**Respuestas**



A. 5:45

B. 3:00

C. 3:45

D. 12:05

E. 3:30

F. 6:50

G. 7:50

H. 12:00

I. 9:30

J. 3:55

K. 4:55

L. 8:55

M. 5:15

N. 9:15

O. 11:20

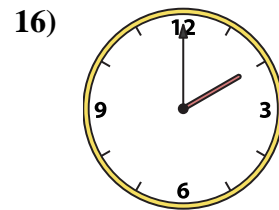
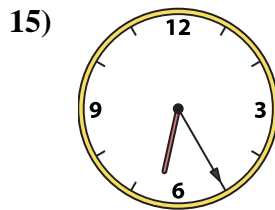
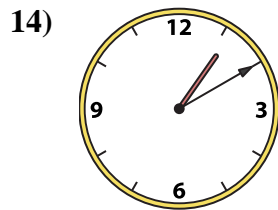
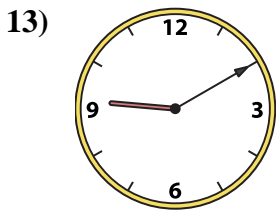
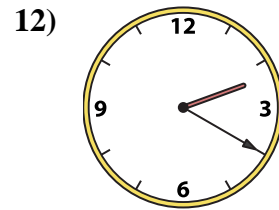
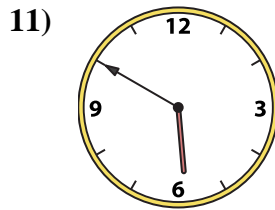
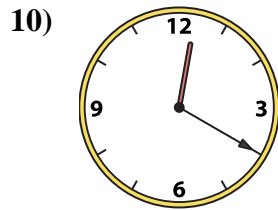
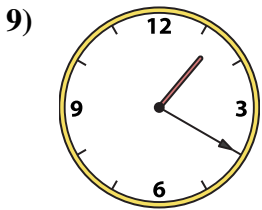
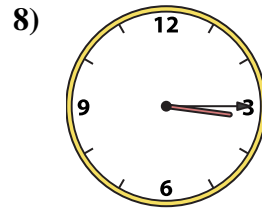
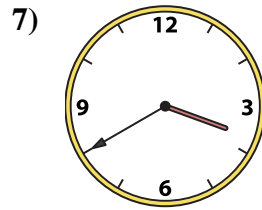
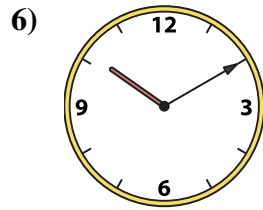
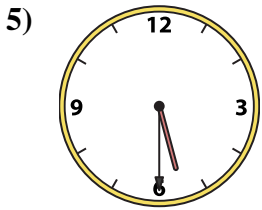
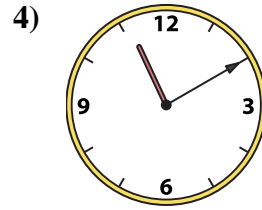
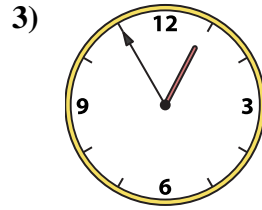
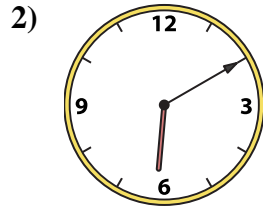
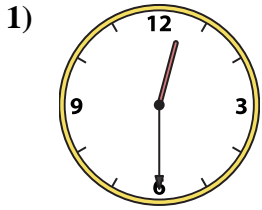
P. 5:30

- 1.   **L**
- 2.   **G**
- 3.   **O**
- 4.   **D**
- 5.   **M**
- 6.   **J**
- 7.   **A**
- 8.   **I**
- 9.   **F**
- 10.   **E**
- 11.   **K**
- 12.   **B**
- 13.   **H**
- 14.   **P**
- 15.   **C**
- 16.   **N**



Emparejar el reloj analógico con el reloj digital correspondiente.

Respuestas



- 1. \_\_\_\_\_
- 2. \_\_\_\_\_
- 3. \_\_\_\_\_
- 4. \_\_\_\_\_
- 5. \_\_\_\_\_
- 6. \_\_\_\_\_
- 7. \_\_\_\_\_
- 8. \_\_\_\_\_
- 9. \_\_\_\_\_
- 10. \_\_\_\_\_
- 11. \_\_\_\_\_
- 12. \_\_\_\_\_
- 13. \_\_\_\_\_
- 14. \_\_\_\_\_
- 15. \_\_\_\_\_
- 16. \_\_\_\_\_

A. 10:10

B. 3:40

C. 1:20

D. 12:30

E. 12:20

F. 3:15

G. 1:10

H. 6:10

I. 5:50

J. 2:00

K. 5:30

L. 6:25

M. 12:55

N. 11:10

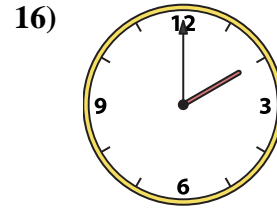
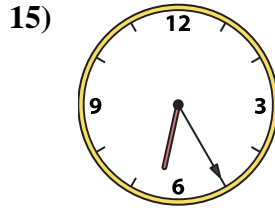
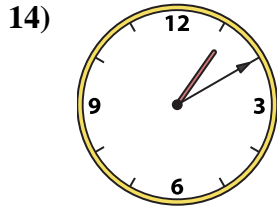
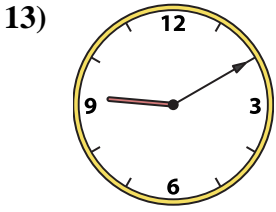
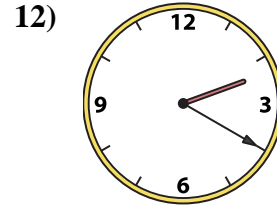
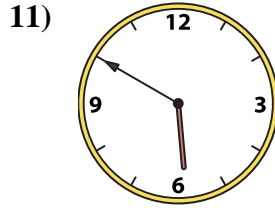
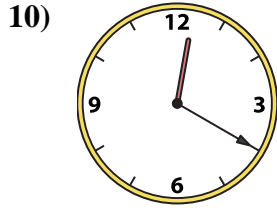
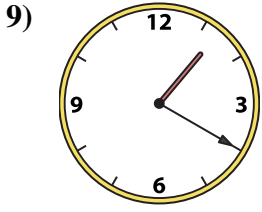
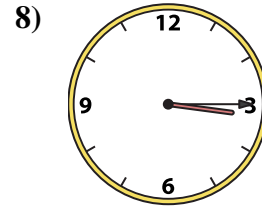
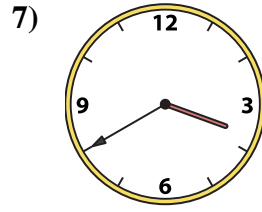
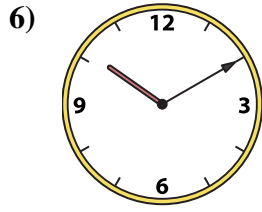
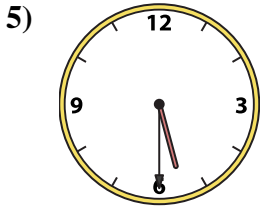
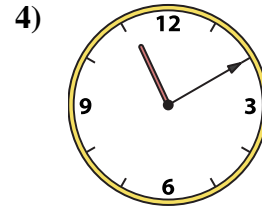
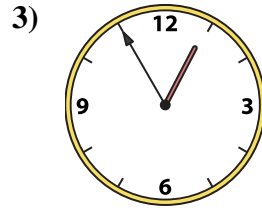
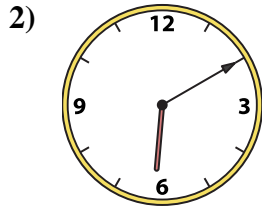
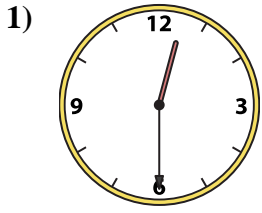
O. 9:10

P. 2:20



Emparejar el reloj analógico con el reloj digital correspondiente.

**Respuestas**



A. 10:10

B. 3:40

C. 1:20

D. 12:30

E. 12:20

F. 3:15

G. 1:10

H. 6:10

I. 5:50

J. 2:00

K. 5:30

L. 6:25

M. 12:55

N. 11:10

O. 9:10

P. 2:20

1. **D**

2. **H**

3. **M**

4. **N**

5. **K**

6. **A**

7. **B**

8. **F**

9. **C**

10. **E**

11. **I**

12. **P**

13. **O**

14. **G**

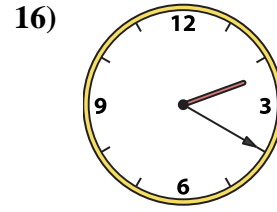
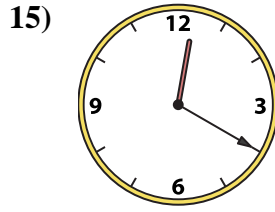
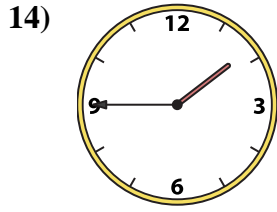
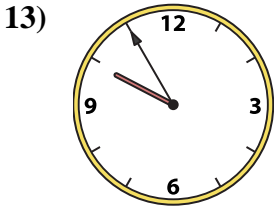
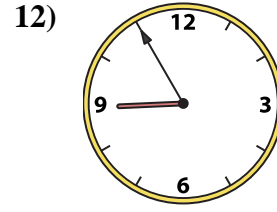
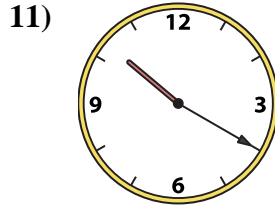
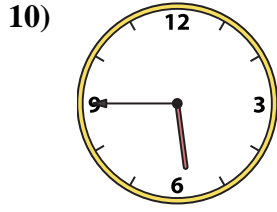
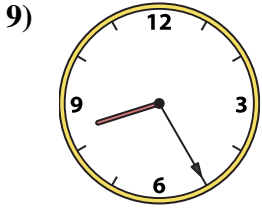
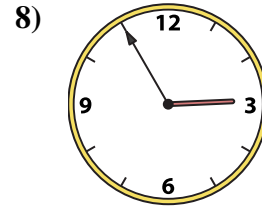
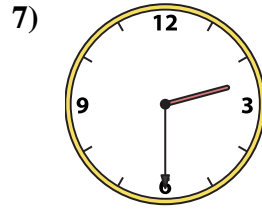
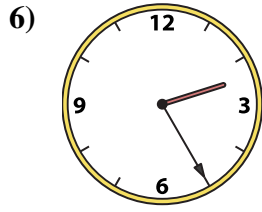
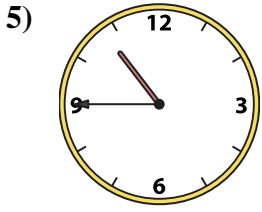
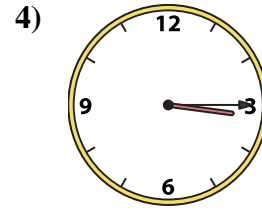
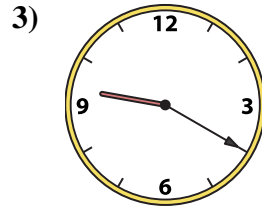
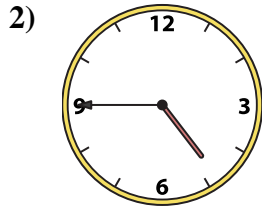

15. **L**

16. **J**



Emparejar el reloj analógico con el reloj digital correspondiente.

Respuestas



- 1. \_\_\_\_\_
- 2. \_\_\_\_\_
- 3. \_\_\_\_\_
- 4. \_\_\_\_\_
- 5. \_\_\_\_\_
- 6. \_\_\_\_\_
- 7. \_\_\_\_\_
- 8. \_\_\_\_\_
- 9. \_\_\_\_\_
- 10. \_\_\_\_\_
- 11. \_\_\_\_\_
- 12. \_\_\_\_\_
- 13. \_\_\_\_\_
- 14. \_\_\_\_\_
- 15. \_\_\_\_\_
- 16. \_\_\_\_\_

A. 12:20

B. 8:25

C. 1:45

D. 3:15

E. 2:55

F. 4:45

G. 2:20

H. 2:25

I. 10:45

J. 9:20

K. 10:20

L. 5:45

M. 2:30

N. 9:55

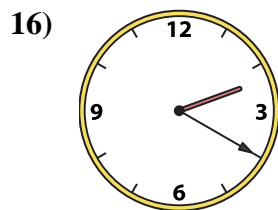
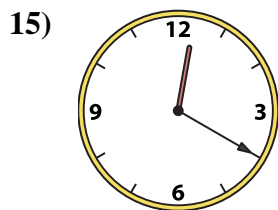
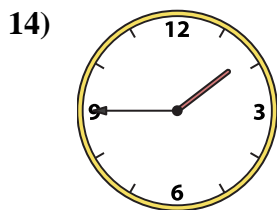

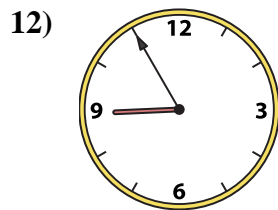
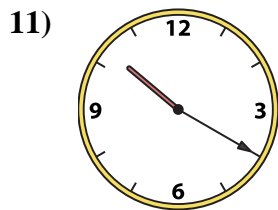
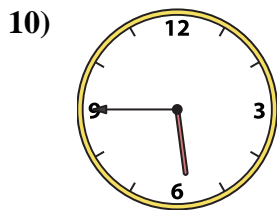
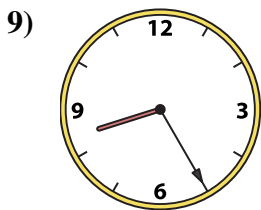
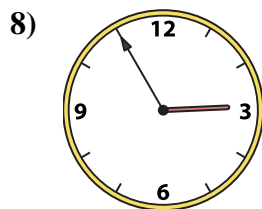
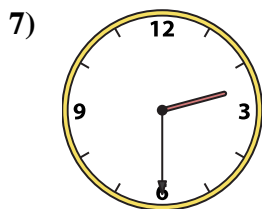
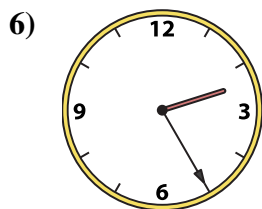
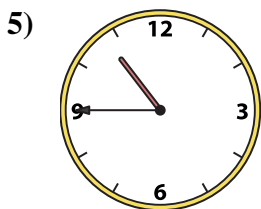
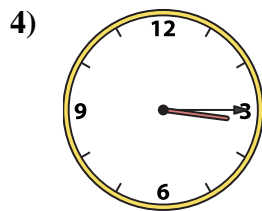
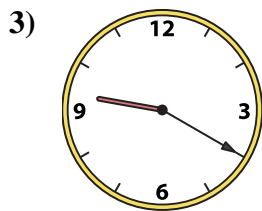
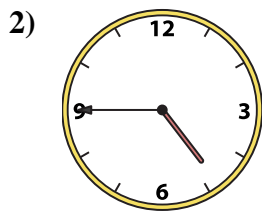
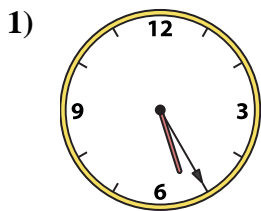
O. 8:55

P. 5:25



Emparejar el reloj analógico con el reloj digital correspondiente.

**Respuestas**



- 1.     **P**
- 2.     **F**
- 3.     **J**
- 4.     **D**
- 5.     **I**
- 6.     **H**
- 7.     **M**
- 8.     **E**
- 9.     **B**
- 10.     **L**
- 11.     **K**
- 12.     **O**
- 13.     **N**
- 14.     **C**
- 15.     **A**
- 16.     **G**

A. **12:20**

B. **8:25**

C. **1:45**

D. **3:15**

E. **2:55**

F. **4:45**

G. **2:20**

H. **2:25**

I. **10:45**

J. **9:20**

K. **10:20**

L. **5:45**

M. **2:30**

N. **9:55**

O. **8:55**

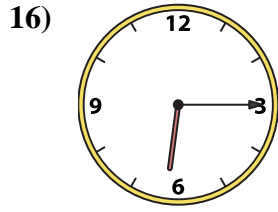
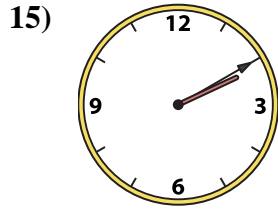
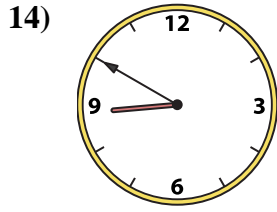
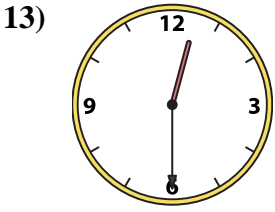
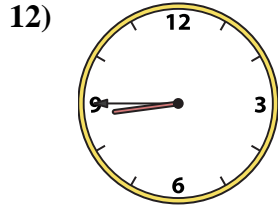
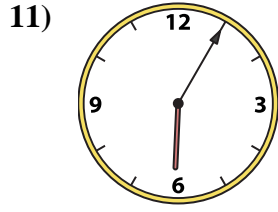
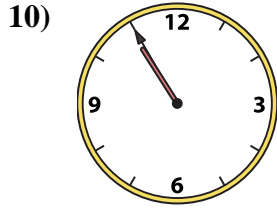
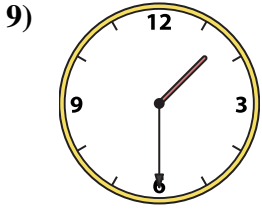
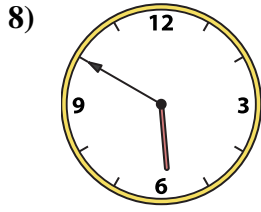
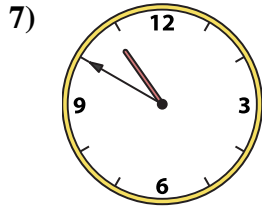
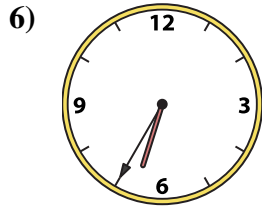
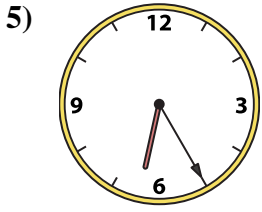
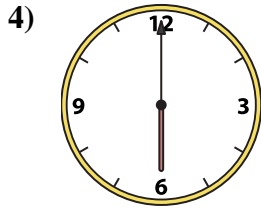
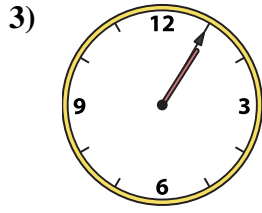
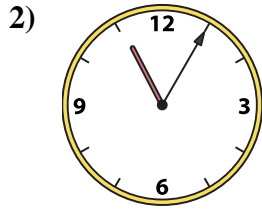
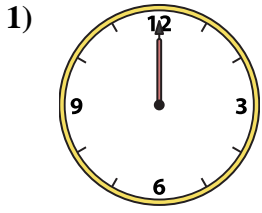
P. **5:25**





Emparejar el reloj analógico con el reloj digital correspondiente.

Respuestas



1. \_\_\_\_\_
2. \_\_\_\_\_
3. \_\_\_\_\_
4. \_\_\_\_\_
5. \_\_\_\_\_
6. \_\_\_\_\_
7. \_\_\_\_\_
8. \_\_\_\_\_
9. \_\_\_\_\_
10. \_\_\_\_\_
11. \_\_\_\_\_
12. \_\_\_\_\_
13. \_\_\_\_\_
14. \_\_\_\_\_
15. \_\_\_\_\_
16. \_\_\_\_\_

A. 6:05

B. 1:30

C. 6:00

D. 6:35

E. 12:00

F. 2:10

G. 12:30

H. 10:50

I. 1:05

J. 8:45

K. 8:50

L. 5:50

M. 6:25

N. 10:55

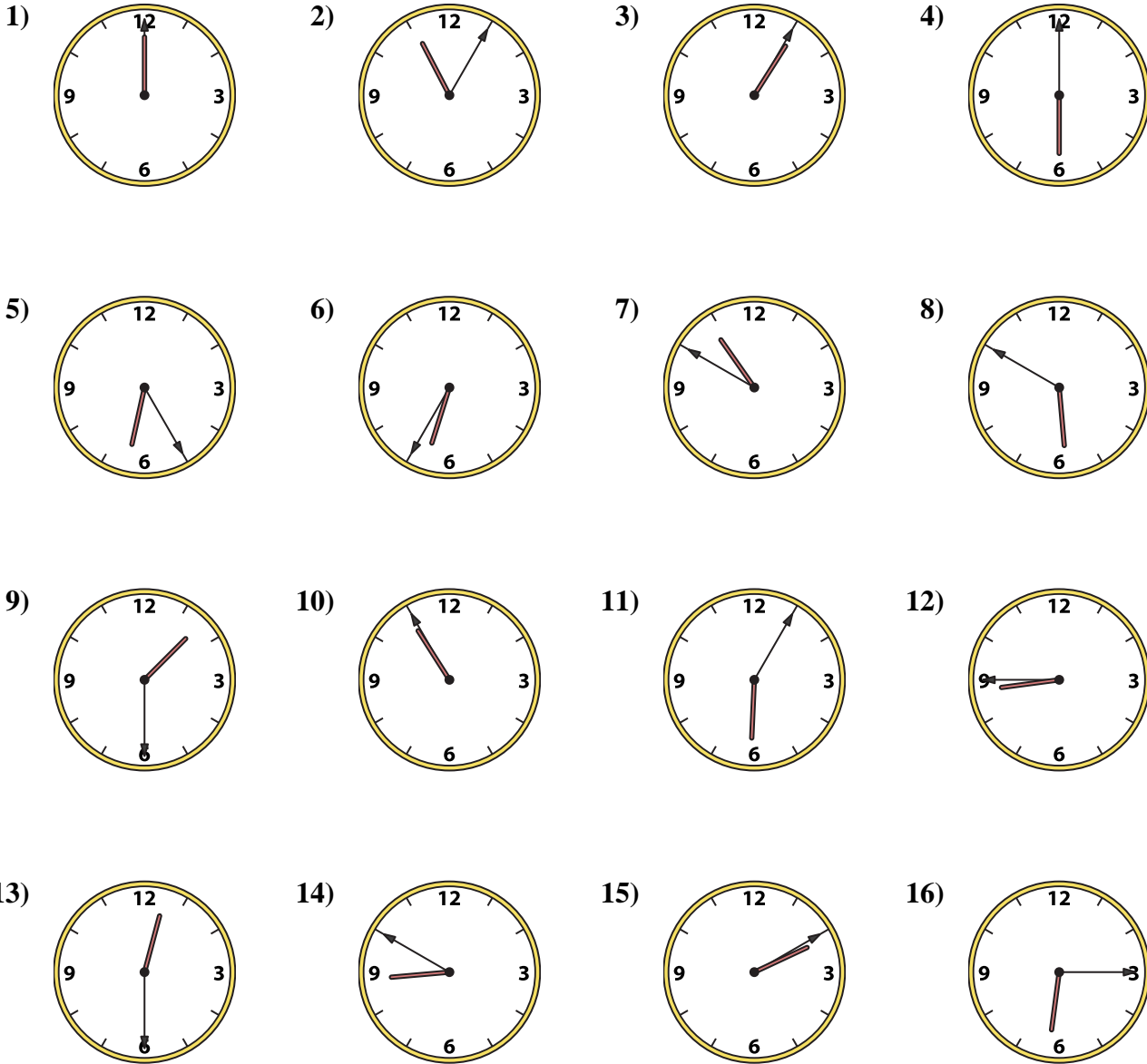
O. 11:05

P. 6:15



Emparejar el reloj analógico con el reloj digital correspondiente.

**Respuestas**



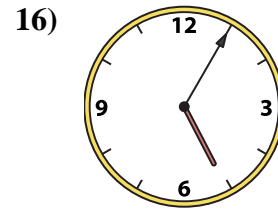
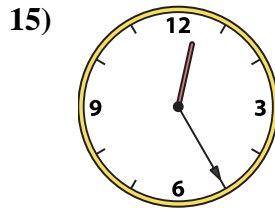
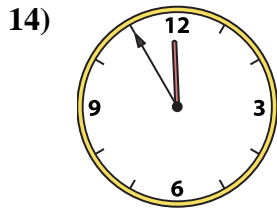
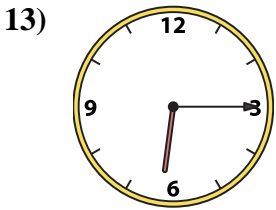
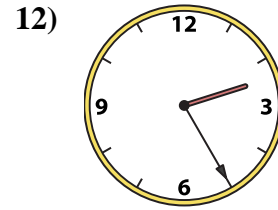
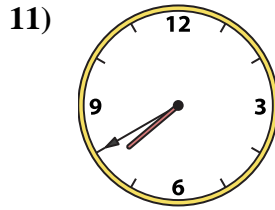
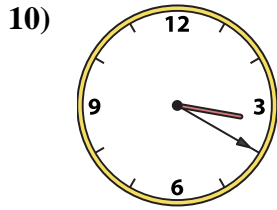
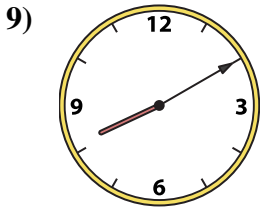
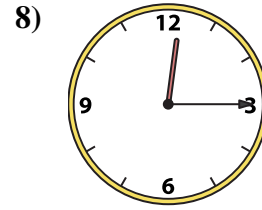
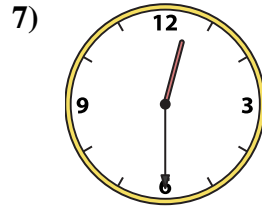
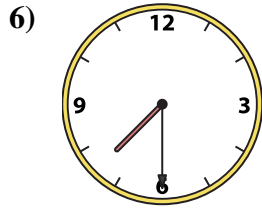
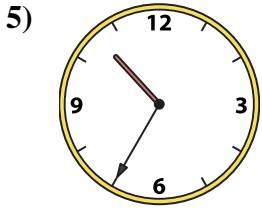
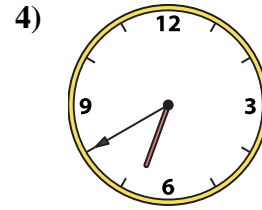
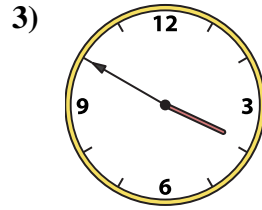
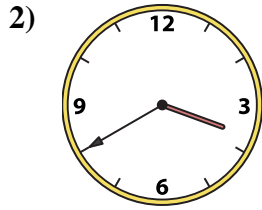
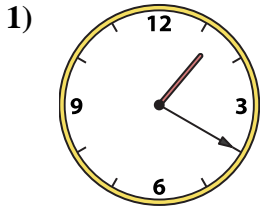
1.     **E**
2.     **O**
3.     **I**
4.     **C**
5.     **M**
6.     **D**
7.     **H**
8.     **L**
9.     **B**
10.     **N**
11.     **A**
12.     **J**
13.     **G**
14.     **K**
15.     **F**
16.     **P**

- A. 6:05    B. 1:30    C. 6:00    D. 6:35
- E. 12:00    F. 2:10    G. 12:30    H. 10:50
- I. 1:05    J. 8:45    K. 8:50    L. 5:50
- M. 6:25    N. 10:55    O. 11:05    P. 6:15



Emparejar el reloj analógico con el reloj digital correspondiente.

Respuestas



- 1. \_\_\_\_\_
- 2. \_\_\_\_\_
- 3. \_\_\_\_\_
- 4. \_\_\_\_\_
- 5. \_\_\_\_\_
- 6. \_\_\_\_\_
- 7. \_\_\_\_\_
- 8. \_\_\_\_\_
- 9. \_\_\_\_\_
- 10. \_\_\_\_\_
- 11. \_\_\_\_\_
- 12. \_\_\_\_\_
- 13. \_\_\_\_\_
- 14. \_\_\_\_\_
- 15. \_\_\_\_\_
- 16. \_\_\_\_\_

A. 10:35

B. 2:25

C. 7:40

D. 12:30

E. 6:40

F. 1:20

G. 12:25

H. 6:15

I. 3:50

J. 3:20

K. 11:55

L. 5:05

M. 7:30

N. 3:40

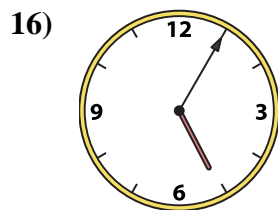
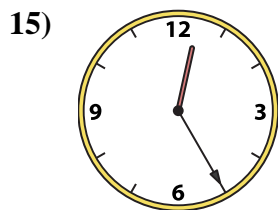
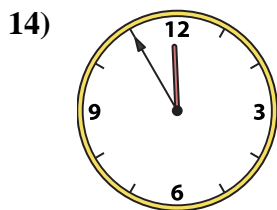
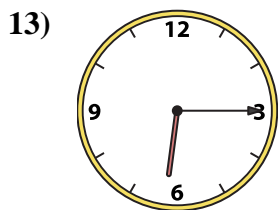
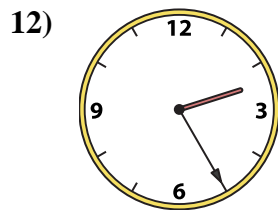
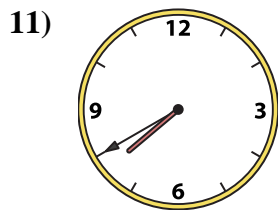
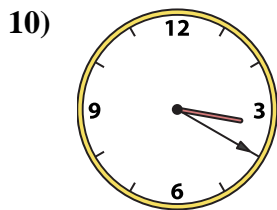
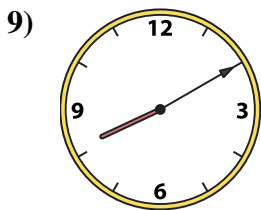
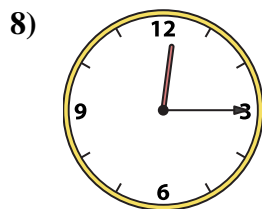
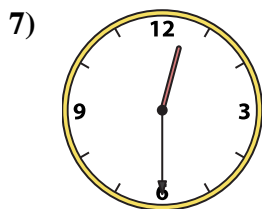
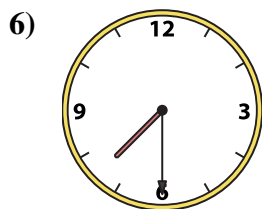
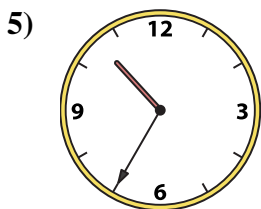
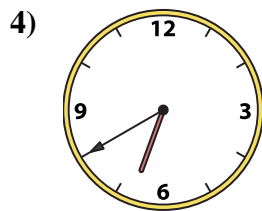
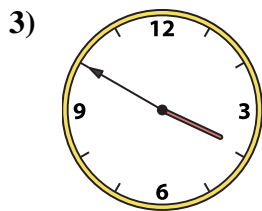
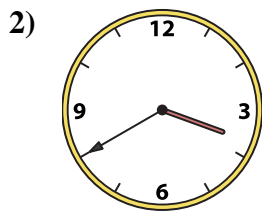
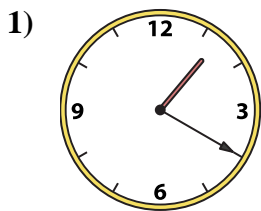
O. 8:10

P. 12:15



Emparejar el reloj analógico con el reloj digital correspondiente.

**Respuestas**



A. 10:35

B. 2:25

C. 7:40

D. 12:30

E. 6:40

F. 1:20

G. 12:25

H. 6:15

I. 3:50

J. 3:20

K. 11:55

L. 5:05

M. 7:30

N. 3:40

O. 8:10

P. 12:15

1. **F**

2. **N**

3. **I**

4. **E**

5. **A**

6. **M**

7. **D**

8. **P**

9. **O**

10. **J**

11. **C**

12. **B**

13. **H**

14. **K**

15. **G**

16. **L**