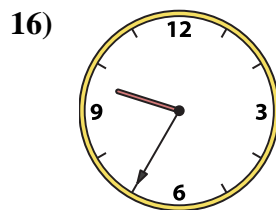
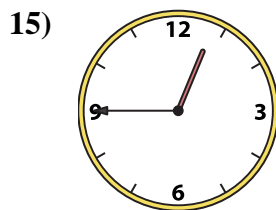
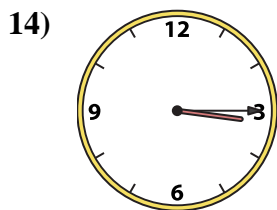
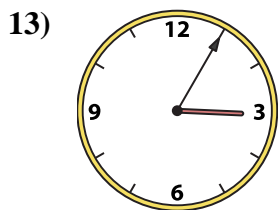
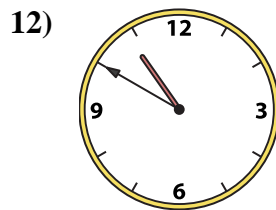
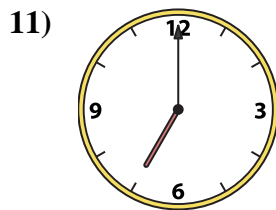
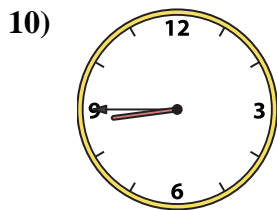
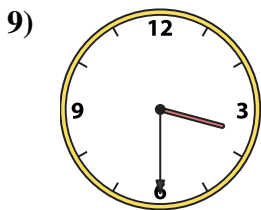
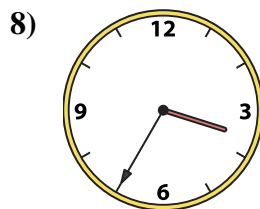
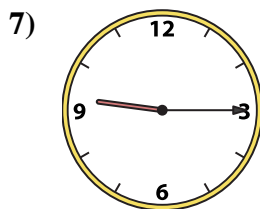
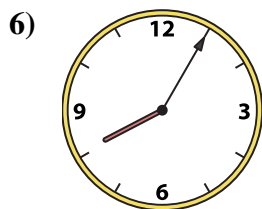
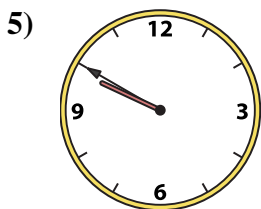
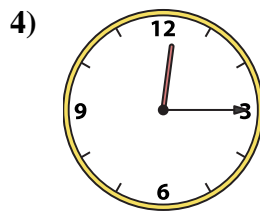
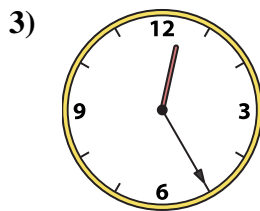
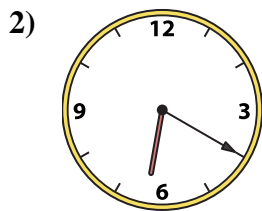
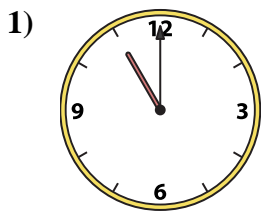




Emparejar el reloj analógico con el reloj digital correspondiente.

Respuestas



A. 10:50

B. 3:30

C. 6:20

D. 3:35

E. 8:45

F. 9:15

G. 3:05

H. 11:00

I. 12:45

J. 9:50

K. 12:15

L. 12:25

M. 8:05

N. 9:35

O. 3:15

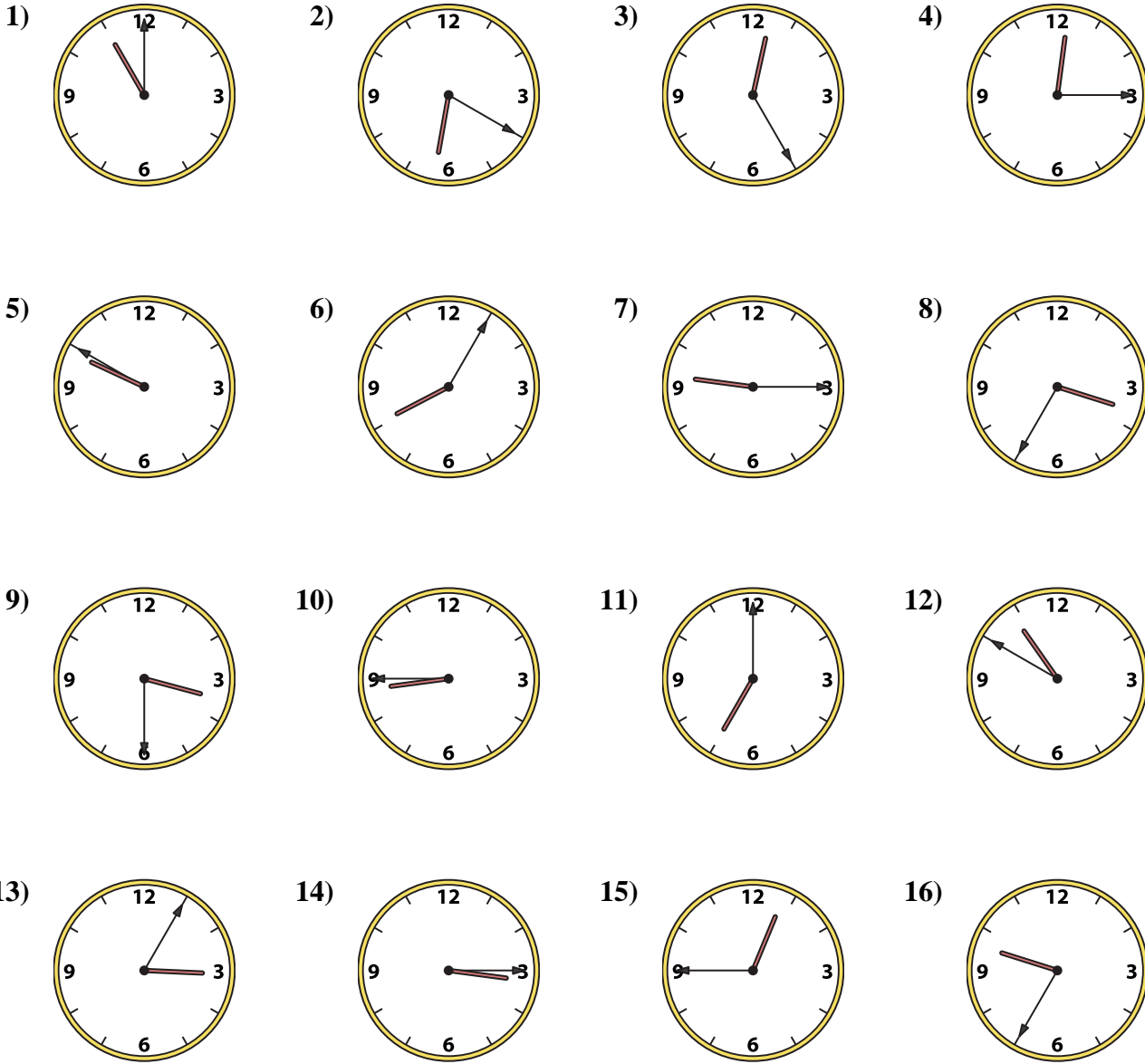
P. 7:00

- 1. _____
- 2. _____
- 3. _____
- 4. _____
- 5. _____
- 6. _____
- 7. _____
- 8. _____
- 9. _____
- 10. _____
- 11. _____
- 12. _____
- 13. _____
- 14. _____
- 15. _____
- 16. _____



Emparejar el reloj analógico con el reloj digital correspondiente.

Respuestas



1. **H**
2. **C**
3. **L**
4. **K**
5. **J**
6. **M**
7. **F**
8. **D**
9. **B**
10. **E**
11. **P**
12. **A**
13. **G**
14. **O**
15. **I**
16. **N**

- A. **10:50** B. **3:30** C. **6:20** D. **3:35**
- E. **8:45** F. **9:15** G. **3:05** H. **11:00**
- I. **12:45** J. **9:50** K. **12:15** L. **12:25**
- M. **8:05** N. **9:35** O. **3:15** P. **7:00**