



Determine cuántos grupos de 100 se pueden crear a partir de los bloques que se muestran.

Respuestas

Ej)

Ej. 2

1)

1. _____

2)

2. _____

3)

3. _____

4)

4. _____

5)

5. _____

6)

6. _____

7)

7. _____

8)

8. _____

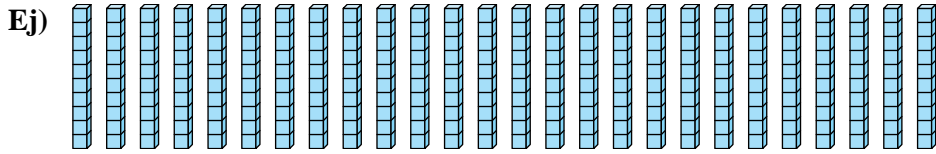
9)

9. _____

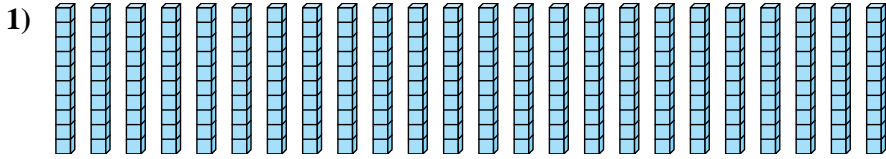


Determine cuántos grupos de 100 se pueden crear a partir de los bloques que se muestran.

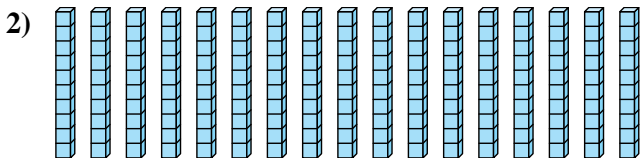
Respuestas




Ej. 2



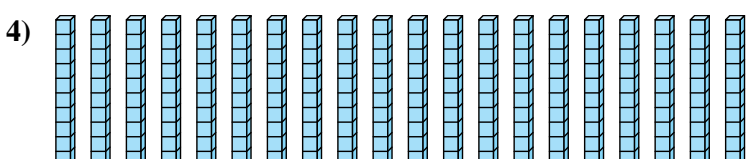
1. 2



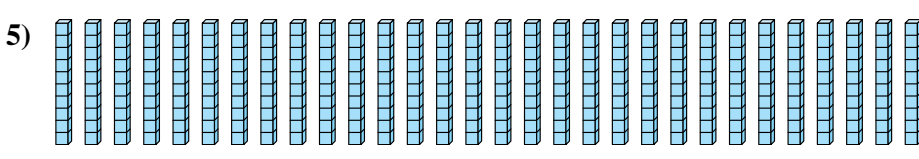
2. 1



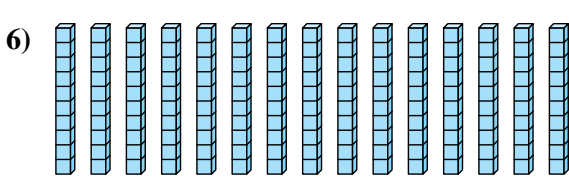
3. 1



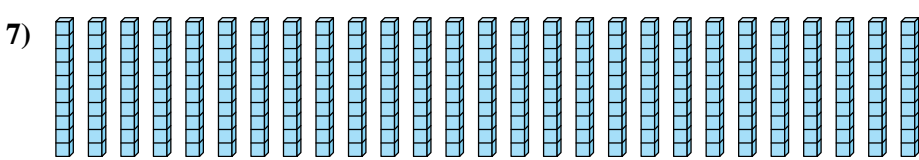
4. 2



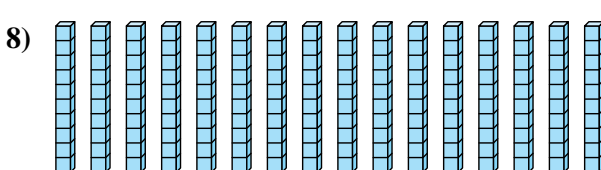
5. 3



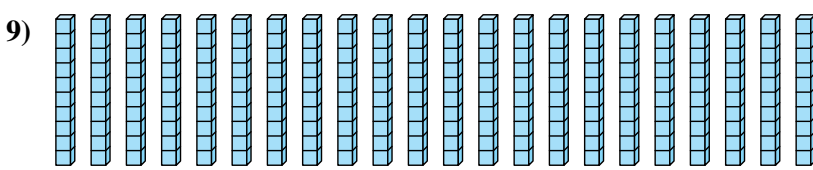
6. 1



7. 2



8. 1



9. 2