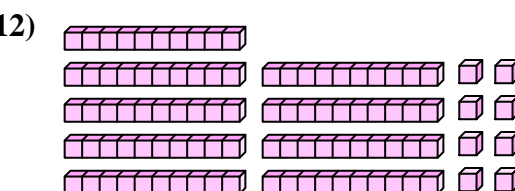
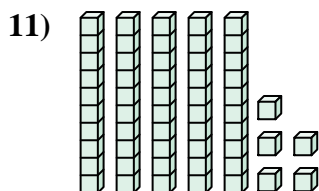
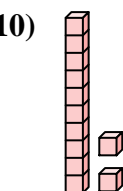
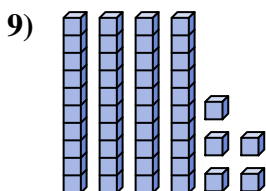
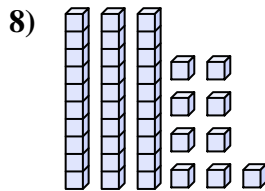
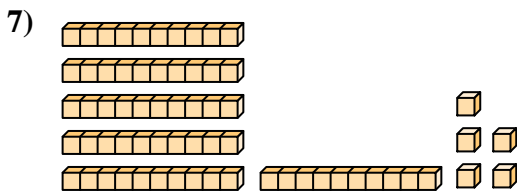
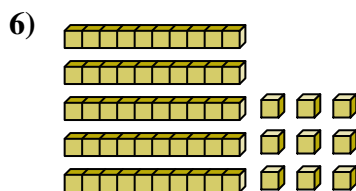
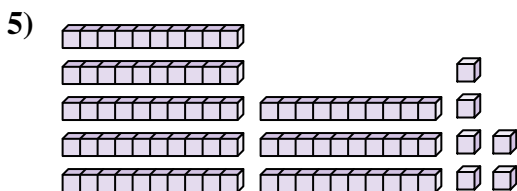
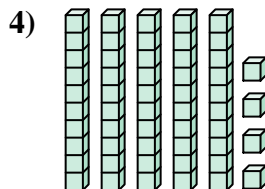
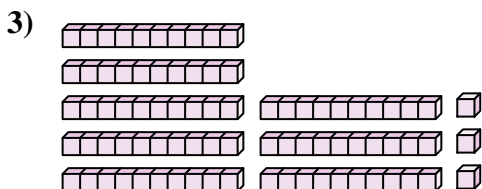
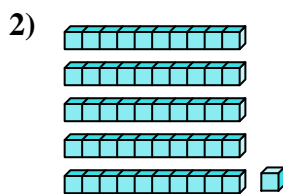





Contar el número total de pequeños bloques.

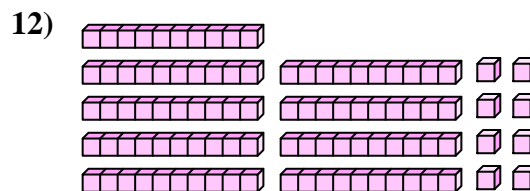
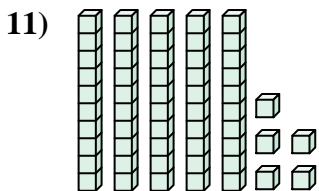
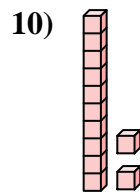
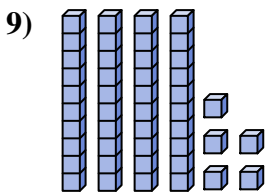
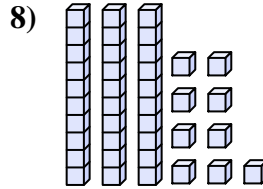
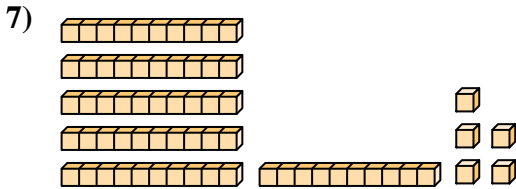
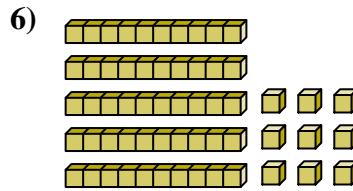
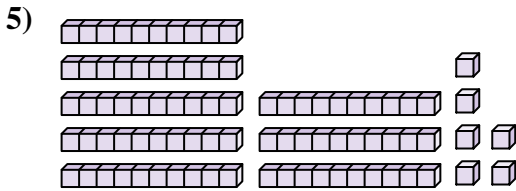

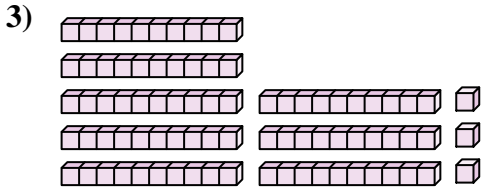
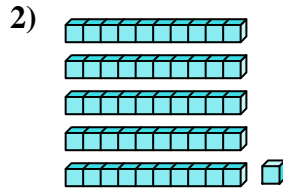
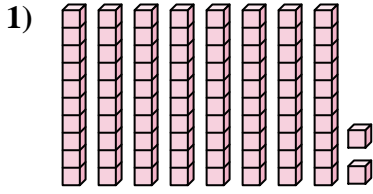
Respuestas



1. _____
2. _____
3. _____
4. _____
5. _____
6. _____
7. _____
8. _____
9. _____
10. _____
11. _____
12. _____



Contar el número total de pequeños bloques.



Respuestas

1. **82**

2. **51**

3. **83**

4. **54**

5. **86**

6. **59**

7. **65**

8. **39**

9. **45**

10. **12**

11. **55**

12. **98**



Contar el número total de pequeños bloques.

51

45

54

39

65

86

59

82

12

83

Respuestas

1. _____

2. _____

3. _____

4. _____

5. _____

6. _____

7. _____

8. _____

9. _____

10. _____

