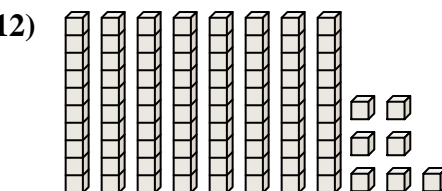
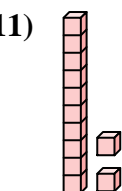
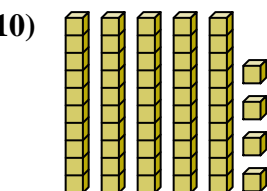
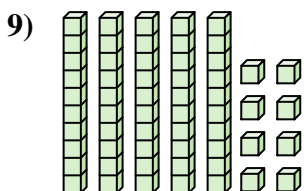
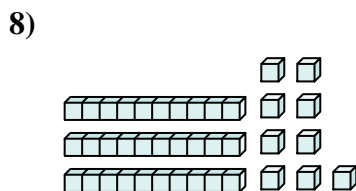
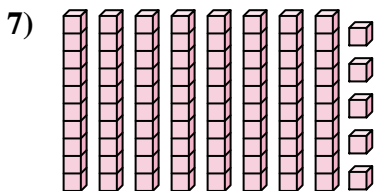
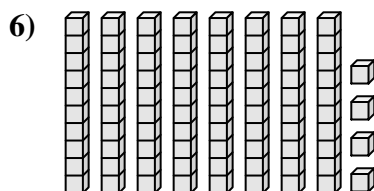
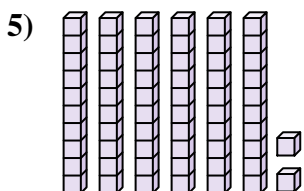
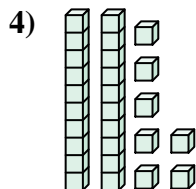
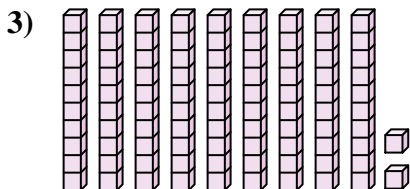
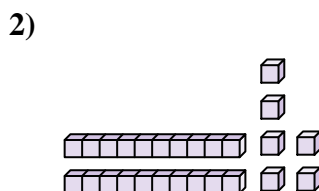
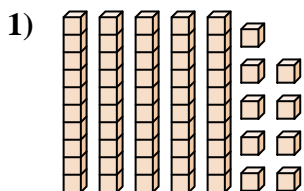




Contar el número total de pequeños bloques.

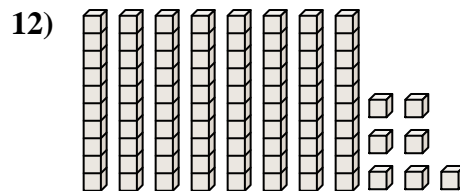
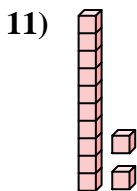
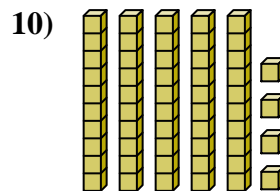
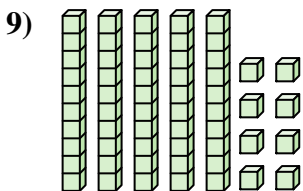
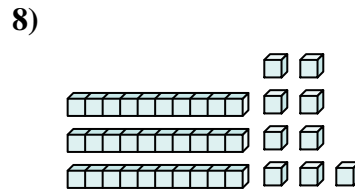

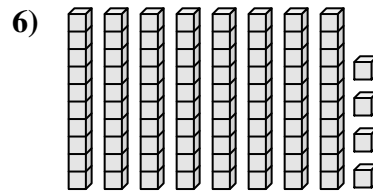
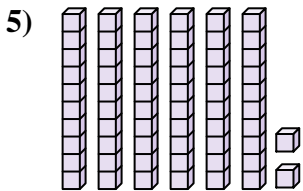
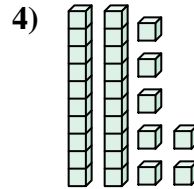
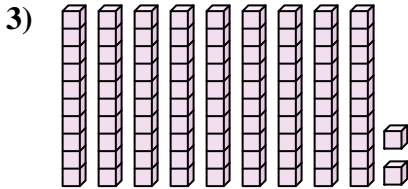
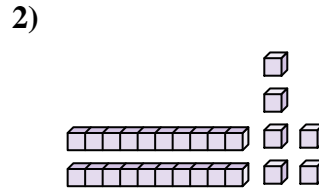
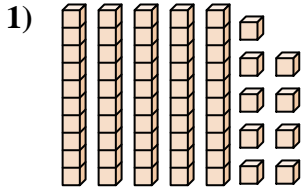
**Respuestas**



1. \_\_\_\_\_
2. \_\_\_\_\_
3. \_\_\_\_\_
4. \_\_\_\_\_
5. \_\_\_\_\_
6. \_\_\_\_\_
7. \_\_\_\_\_
8. \_\_\_\_\_
9. \_\_\_\_\_
10. \_\_\_\_\_
11. \_\_\_\_\_
12. \_\_\_\_\_



Contar el número total de pequeños bloques.



**Respuestas**

1. **59**

2. **26**

3. **92**

4. **27**

5. **62**

6. **84**

7. **85**

8. **39**

9. **58**

10. **54**

11. **12**

12. **87**



Contar el número total de pequeños bloques.

62

54

58

27

84

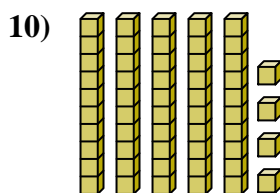
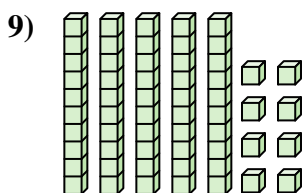
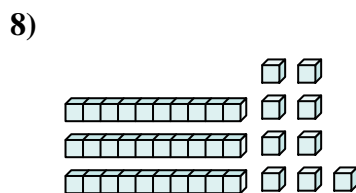
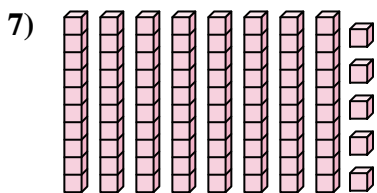
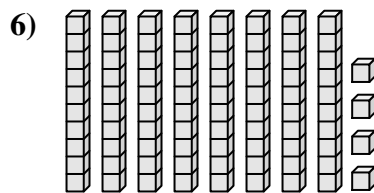
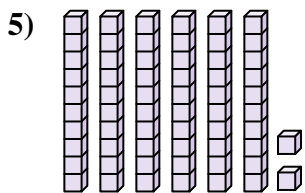
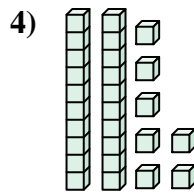
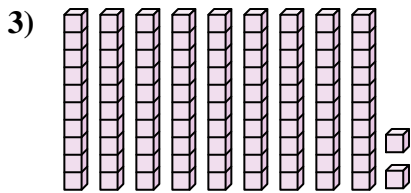
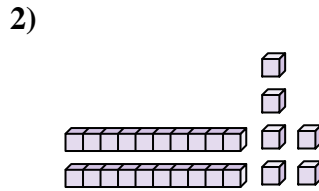
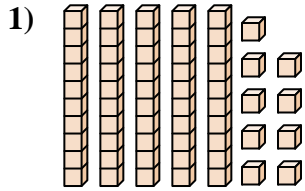
59

85

26

92

39



**Respuestas**

1. \_\_\_\_\_

2. \_\_\_\_\_

3. \_\_\_\_\_

4. \_\_\_\_\_

5. \_\_\_\_\_

6. \_\_\_\_\_

7. \_\_\_\_\_

8. \_\_\_\_\_

9. \_\_\_\_\_

10. \_\_\_\_\_