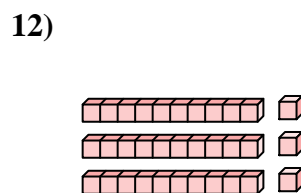
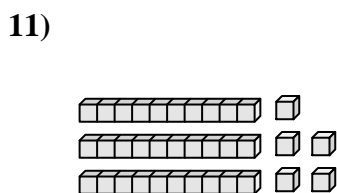
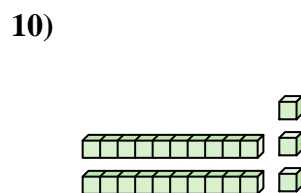
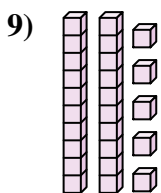
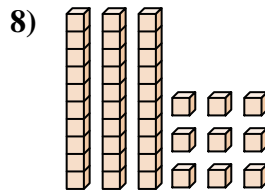
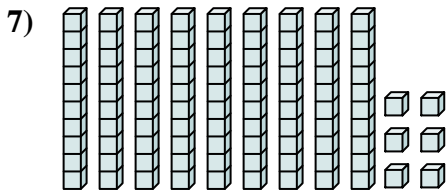
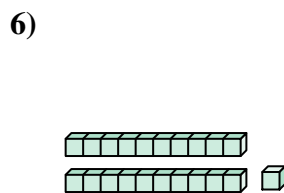
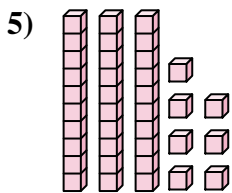
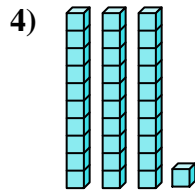
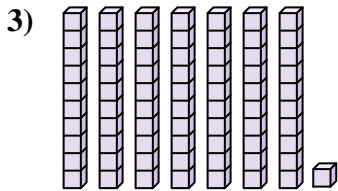
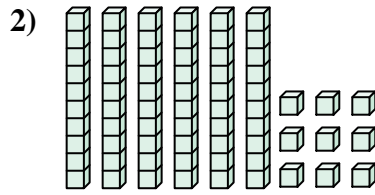
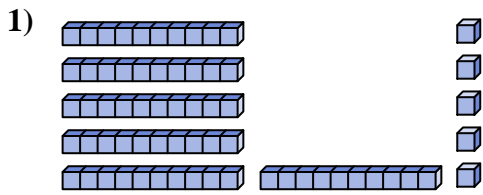




Contar el número total de pequeños bloques.

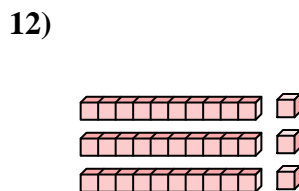
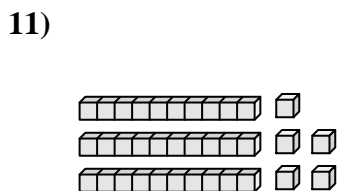
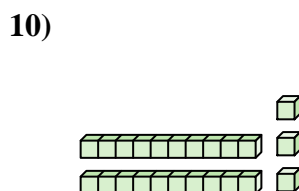
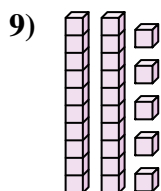
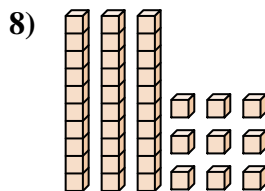
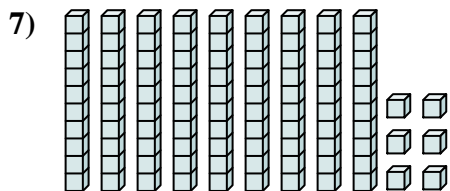
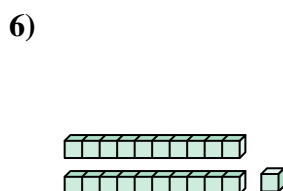
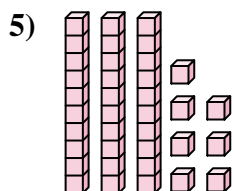
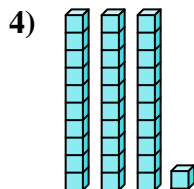
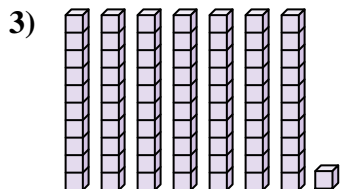
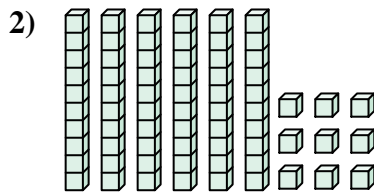
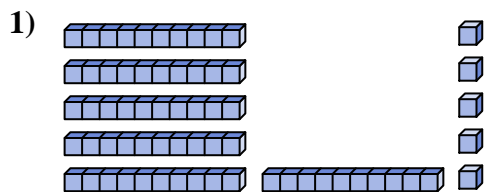
**Respuestas**



1. \_\_\_\_\_
2. \_\_\_\_\_
3. \_\_\_\_\_
4. \_\_\_\_\_
5. \_\_\_\_\_
6. \_\_\_\_\_
7. \_\_\_\_\_
8. \_\_\_\_\_
9. \_\_\_\_\_
10. \_\_\_\_\_
11. \_\_\_\_\_
12. \_\_\_\_\_



Contar el número total de pequeños bloques.



**Respuestas**

1. 65

2. 69

3. 71

4. 31

5. 37

6. 21

7. 96

8. 39

9. 25

10. 23

11. 35

12. 33



Contar el número total de pequeños bloques.

**Respuestas**

23

71

65

31

69

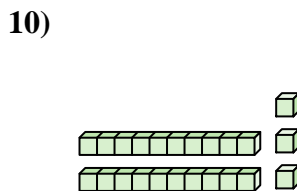
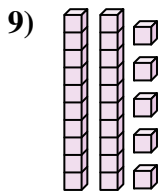
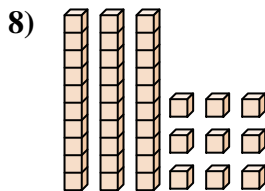
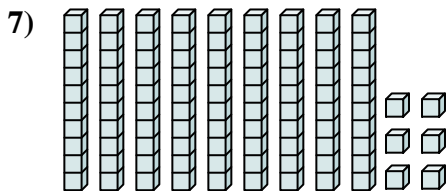
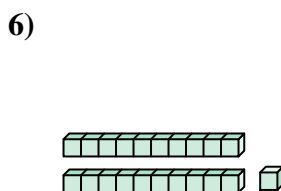
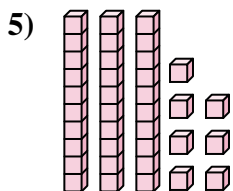
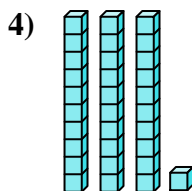
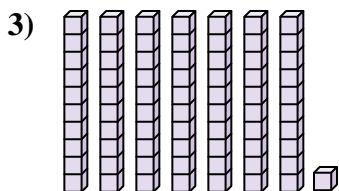
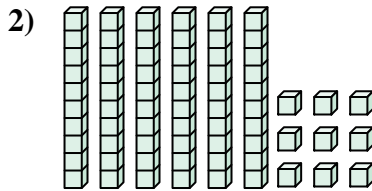
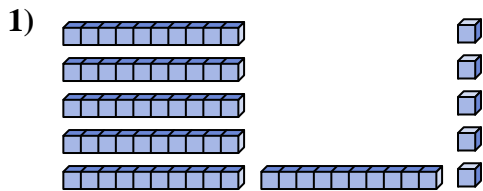
96

21

37

39

25



1. \_\_\_\_\_
2. \_\_\_\_\_
3. \_\_\_\_\_
4. \_\_\_\_\_
5. \_\_\_\_\_
6. \_\_\_\_\_
7. \_\_\_\_\_
8. \_\_\_\_\_
9. \_\_\_\_\_
10. \_\_\_\_\_