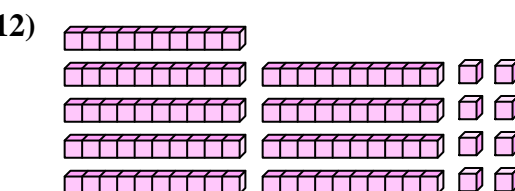
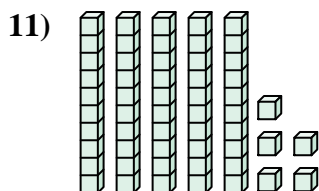
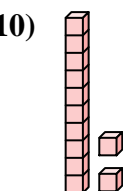
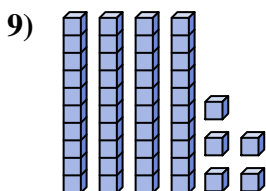
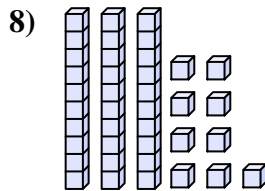
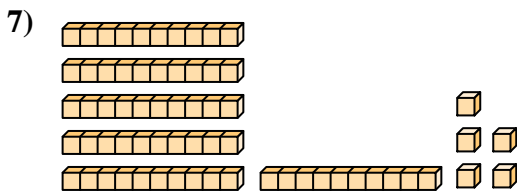
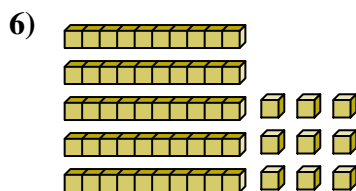
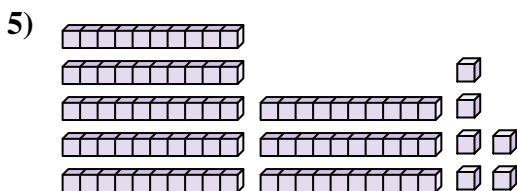
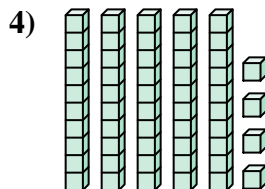
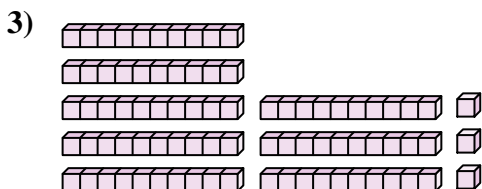
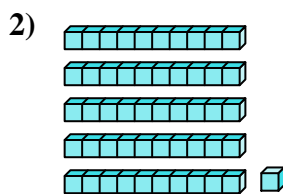





Contar el número total de pequeños bloques.

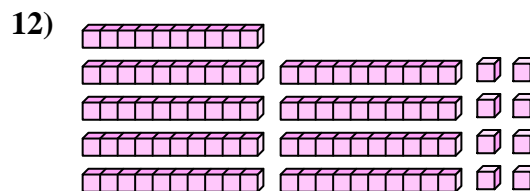
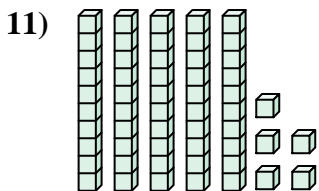
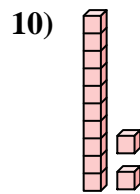
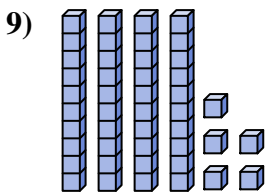
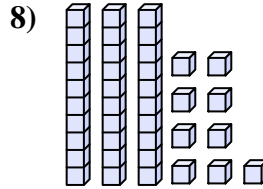
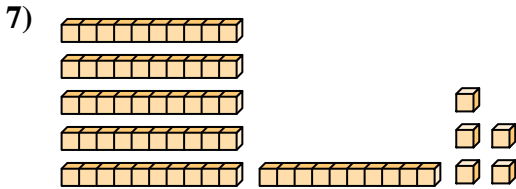
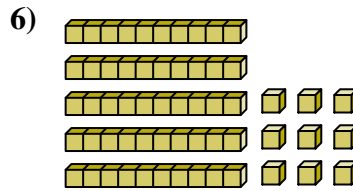
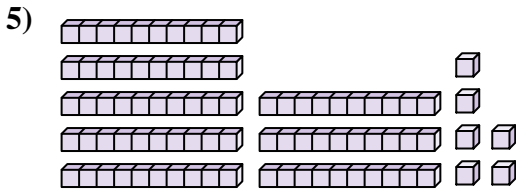

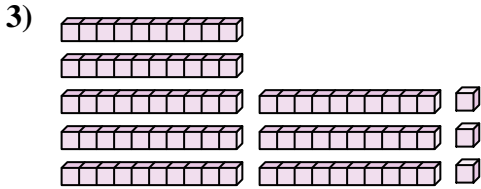
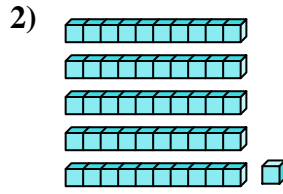

**Respuestas**



1. \_\_\_\_\_
2. \_\_\_\_\_
3. \_\_\_\_\_
4. \_\_\_\_\_
5. \_\_\_\_\_
6. \_\_\_\_\_
7. \_\_\_\_\_
8. \_\_\_\_\_
9. \_\_\_\_\_
10. \_\_\_\_\_
11. \_\_\_\_\_
12. \_\_\_\_\_



Contar el número total de pequeños bloques.



**Respuestas**

1. **82**

2. **51**

3. **83**

4. **54**

5. **86**

6. **59**

7. **65**

8. **39**

9. **45**

10. **12**

11. **55**

12. **98**



Contar el número total de pequeños bloques.

51

45

54

39

65

86

59

82

12

83

**Respuestas**

1. \_\_\_\_\_

2. \_\_\_\_\_

3. \_\_\_\_\_

4. \_\_\_\_\_

5. \_\_\_\_\_

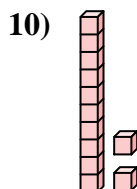
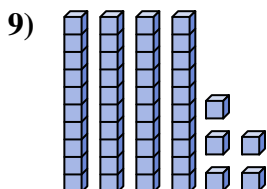
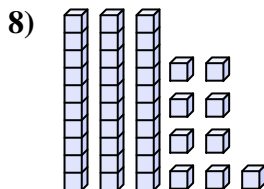
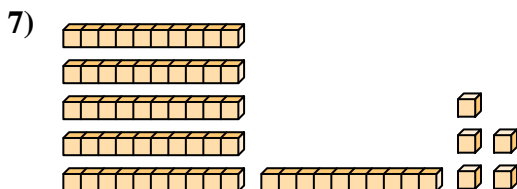
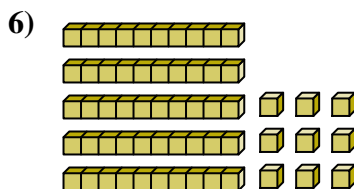
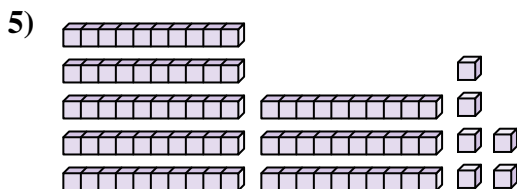
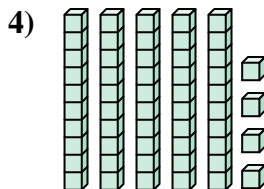
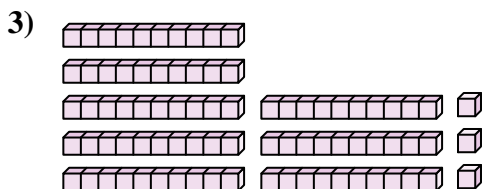
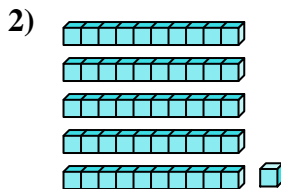

6. \_\_\_\_\_

7. \_\_\_\_\_

8. \_\_\_\_\_

9. \_\_\_\_\_

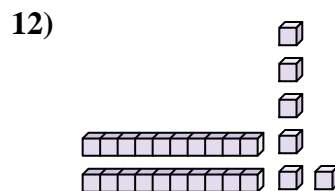
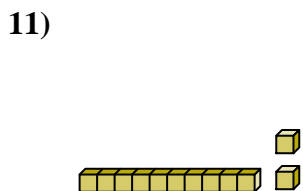
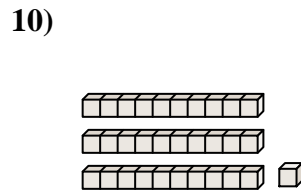
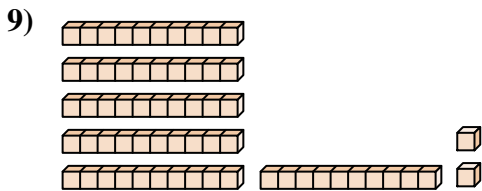
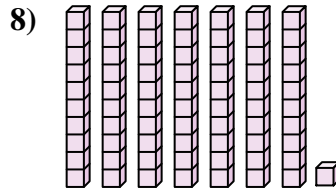
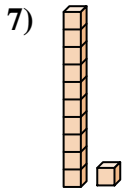
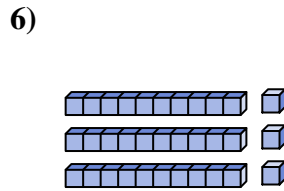
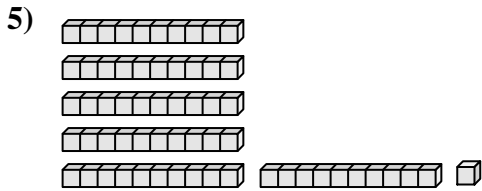
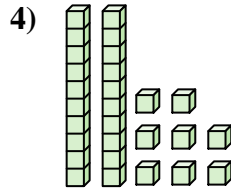
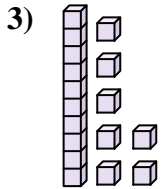
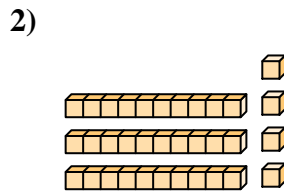
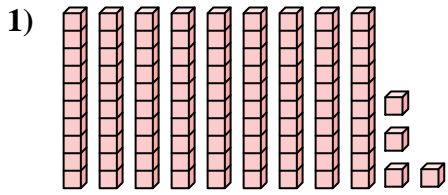
10. \_\_\_\_\_





Contar el número total de pequeños bloques.

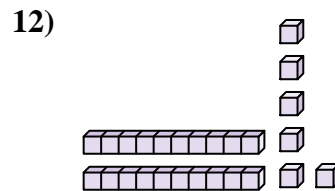
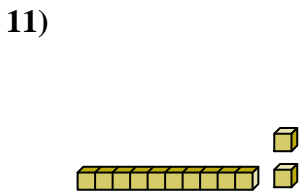
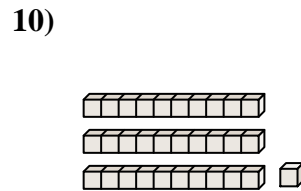
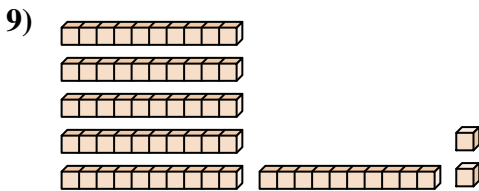
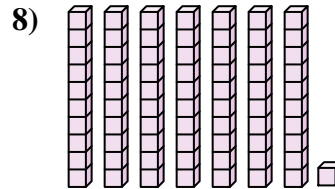
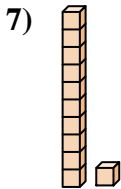
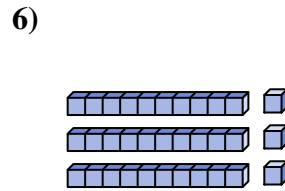
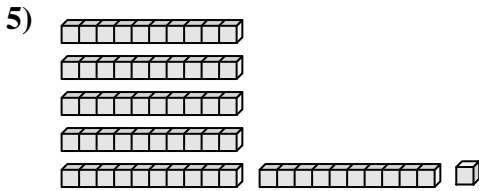
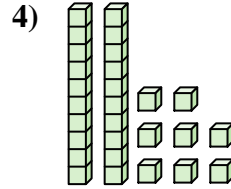
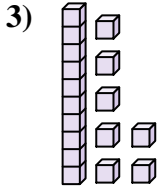
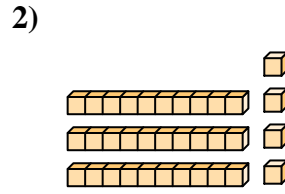
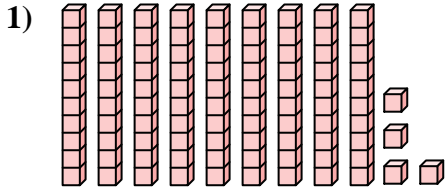
**Respuestas**



1. \_\_\_\_\_
2. \_\_\_\_\_
3. \_\_\_\_\_
4. \_\_\_\_\_
5. \_\_\_\_\_
6. \_\_\_\_\_
7. \_\_\_\_\_
8. \_\_\_\_\_
9. \_\_\_\_\_
10. \_\_\_\_\_
11. \_\_\_\_\_
12. \_\_\_\_\_



Contar el número total de pequeños bloques.



**Respuestas**

1. **94**

2. **34**

3. **17**

4. **28**

5. **61**

6. **33**

7. **11**

8. **71**

9. **62**

10. **31**

11. **12**

12. **26**



Contar el número total de pequeños bloques.

62

11

33

31

61

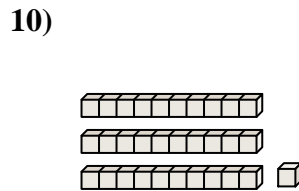
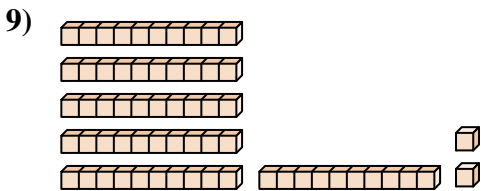
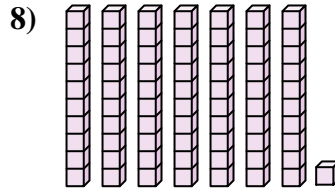
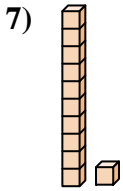
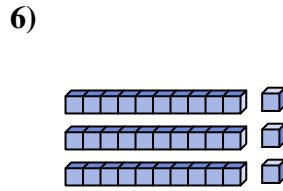
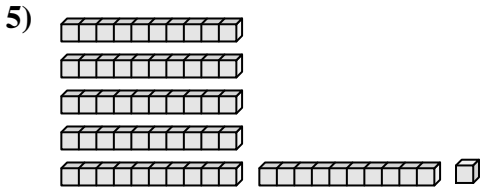
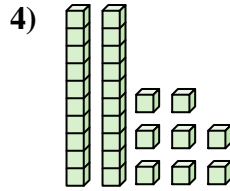
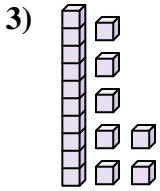
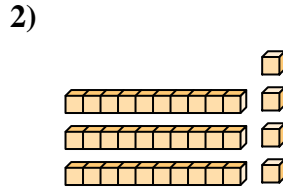
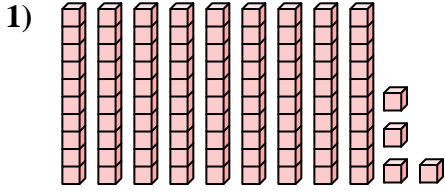
71

28

17

34

94



**Respuestas**

1. \_\_\_\_\_

2. \_\_\_\_\_

3. \_\_\_\_\_

4. \_\_\_\_\_

5. \_\_\_\_\_

6. \_\_\_\_\_

7. \_\_\_\_\_

8. \_\_\_\_\_

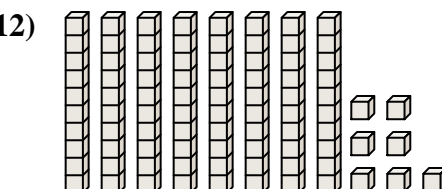
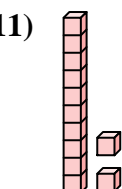
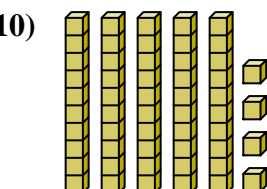
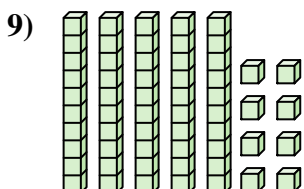
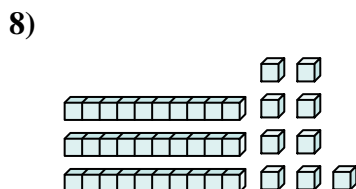
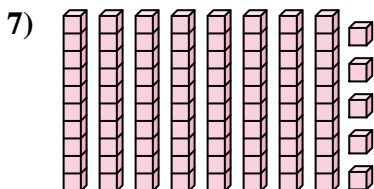
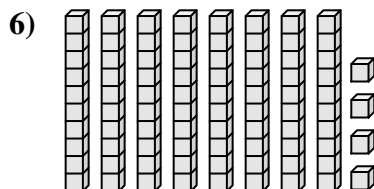
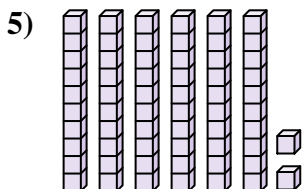
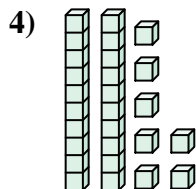
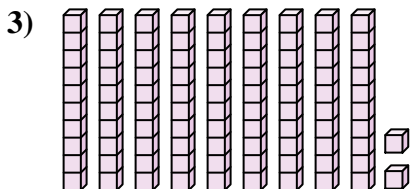
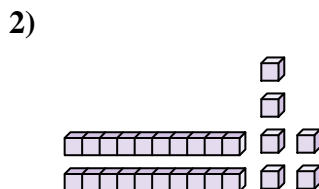
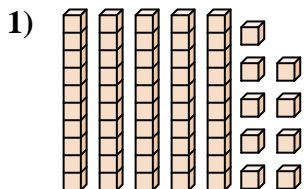
9. \_\_\_\_\_

10. \_\_\_\_\_



Contar el número total de pequeños bloques.

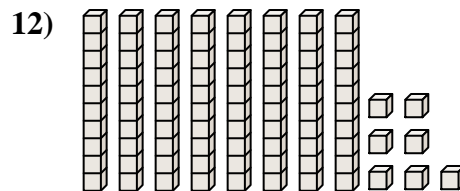
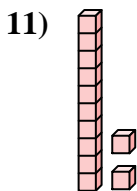
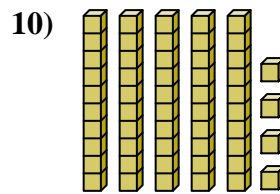
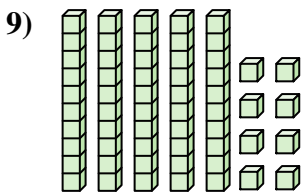
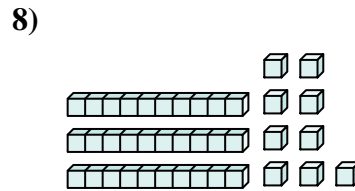
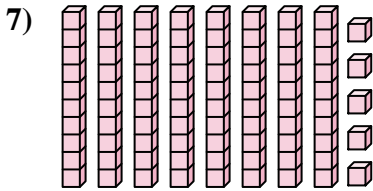
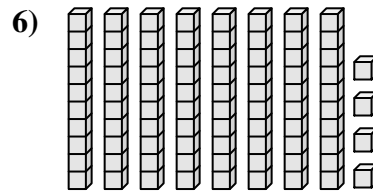
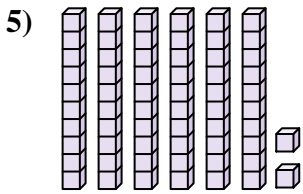
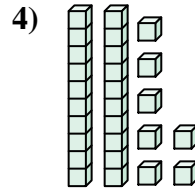
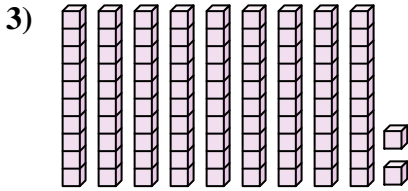
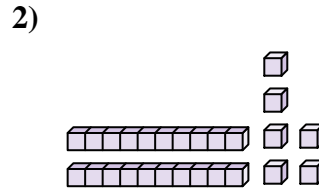
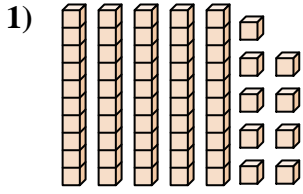
**Respuestas**



1. \_\_\_\_\_
2. \_\_\_\_\_
3. \_\_\_\_\_
4. \_\_\_\_\_
5. \_\_\_\_\_
6. \_\_\_\_\_
7. \_\_\_\_\_
8. \_\_\_\_\_
9. \_\_\_\_\_
10. \_\_\_\_\_
11. \_\_\_\_\_
12. \_\_\_\_\_



Contar el número total de pequeños bloques.



**Respuestas**

1. **59**

2. **26**

3. **92**

4. **27**

5. **62**

6. **84**

7. **85**

8. **39**

9. **58**

10. **54**

11. **12**

12. **87**





Contar el número total de pequeños bloques.

62

54

58

27

84

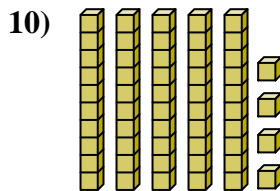
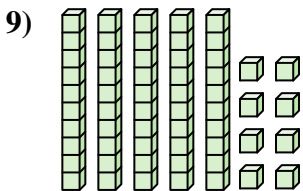
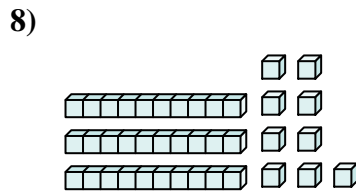

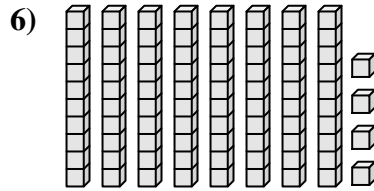
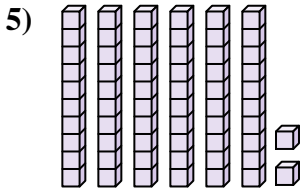
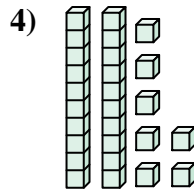
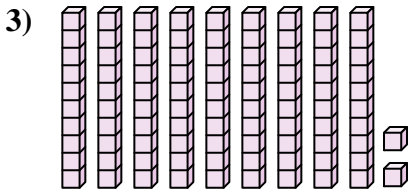
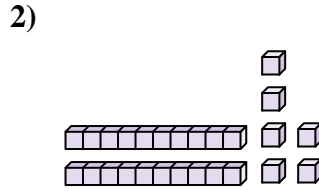
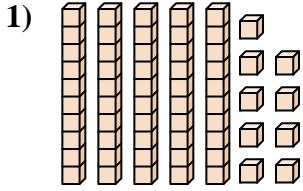
59

85

26

92

39



**Respuestas**

1. \_\_\_\_\_

2. \_\_\_\_\_

3. \_\_\_\_\_

4. \_\_\_\_\_

5. \_\_\_\_\_

6. \_\_\_\_\_

7. \_\_\_\_\_

8. \_\_\_\_\_

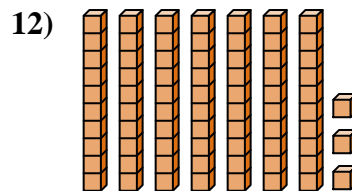
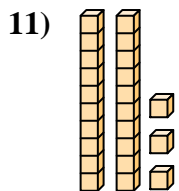
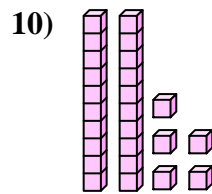
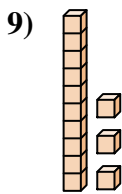
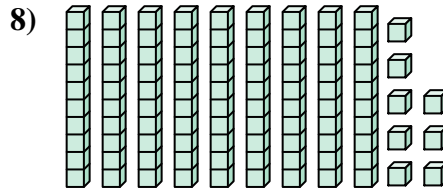
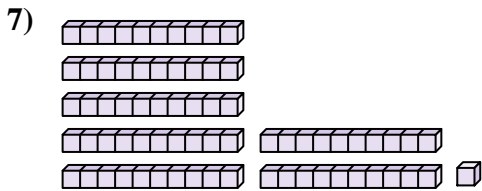
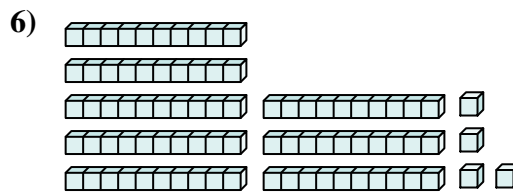
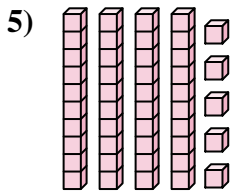
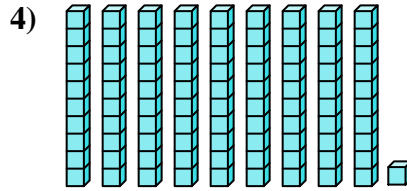
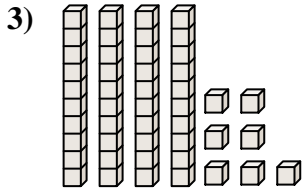
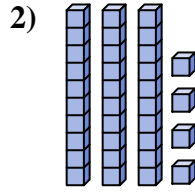
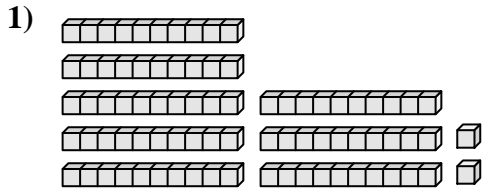
9. \_\_\_\_\_

10. \_\_\_\_\_



Contar el número total de pequeños bloques.

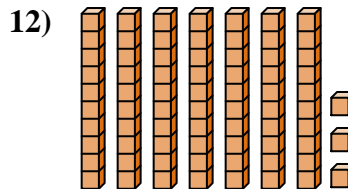
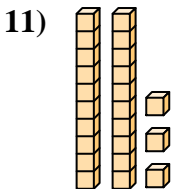
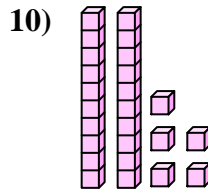
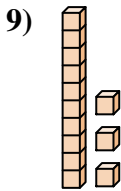
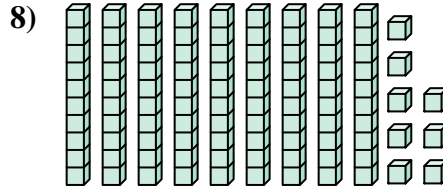
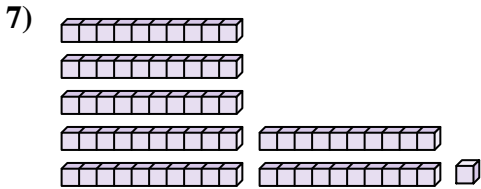
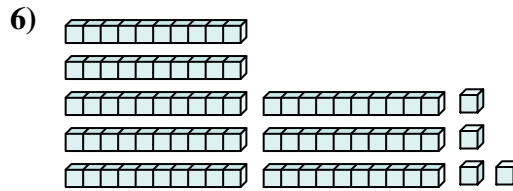
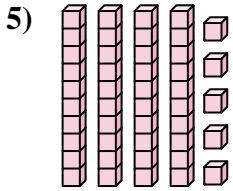
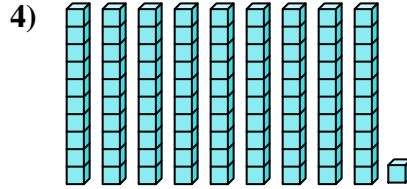
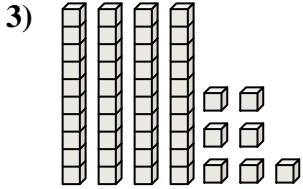
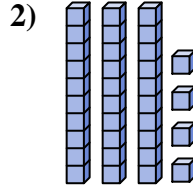
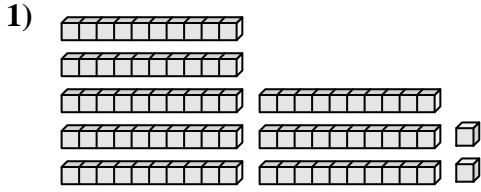
**Respuestas**



1. \_\_\_\_\_
2. \_\_\_\_\_
3. \_\_\_\_\_
4. \_\_\_\_\_
5. \_\_\_\_\_
6. \_\_\_\_\_
7. \_\_\_\_\_
8. \_\_\_\_\_
9. \_\_\_\_\_
10. \_\_\_\_\_
11. \_\_\_\_\_
12. \_\_\_\_\_



Contar el número total de pequeños bloques.



**Respuestas**

1. **82**

2. **34**

3. **47**

4. **91**

5. **45**

6. **84**

7. **71**

8. **98**

9. **13**

10. **25**

11. **23**

12. **73**



Contar el número total de pequeños bloques.

45

71

98

84

47

34

91

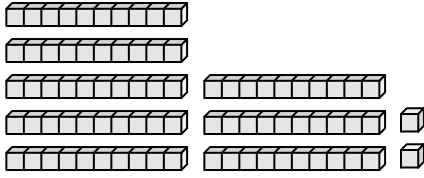
13

25

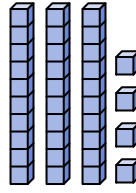
82

**Respuestas**

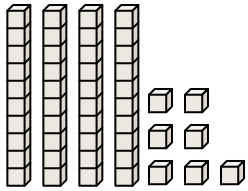
1)



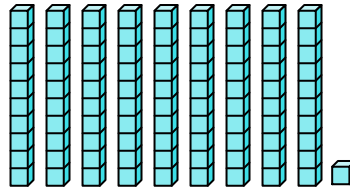
2)



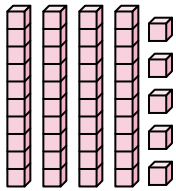
3)



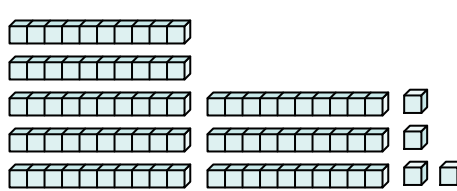
4)



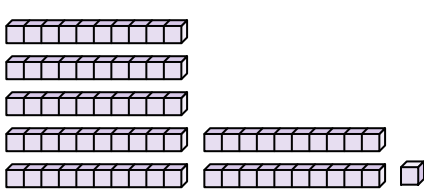
5)



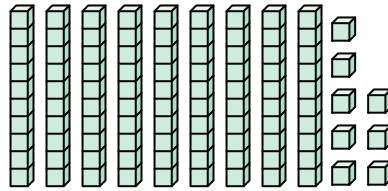
6)



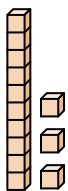
7)



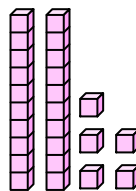
8)



9)



10)

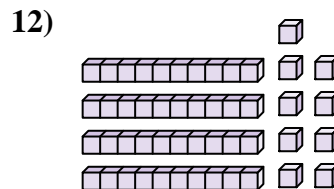
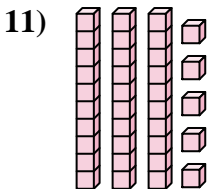
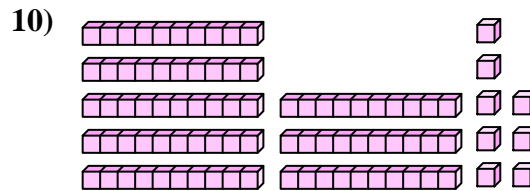
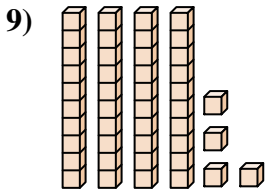
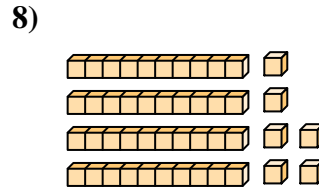
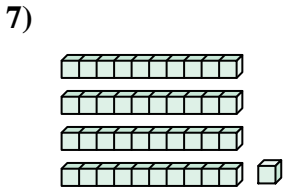
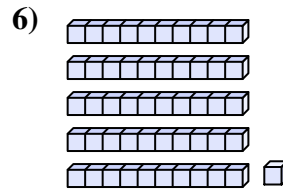
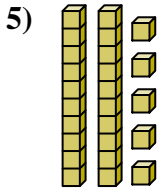
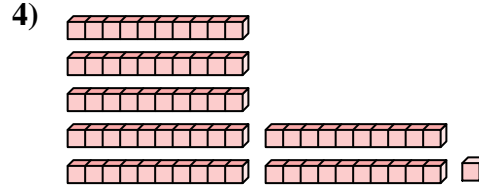
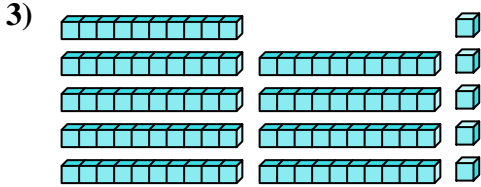
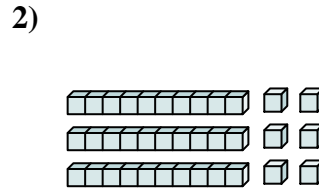
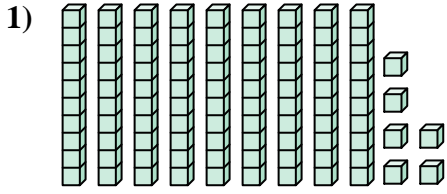


1. \_\_\_\_\_
2. \_\_\_\_\_
3. \_\_\_\_\_
4. \_\_\_\_\_
5. \_\_\_\_\_
6. \_\_\_\_\_
7. \_\_\_\_\_
8. \_\_\_\_\_
9. \_\_\_\_\_
10. \_\_\_\_\_



Contar el número total de pequeños bloques.

**Respuestas**



1. \_\_\_\_\_

2. \_\_\_\_\_

3. \_\_\_\_\_

4. \_\_\_\_\_

5. \_\_\_\_\_

6. \_\_\_\_\_

7. \_\_\_\_\_

8. \_\_\_\_\_

9. \_\_\_\_\_

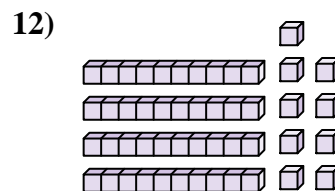
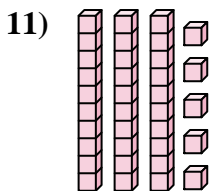
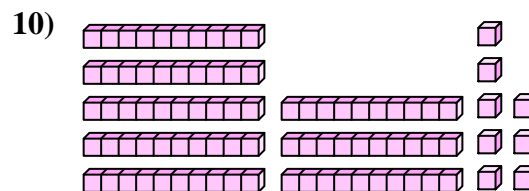
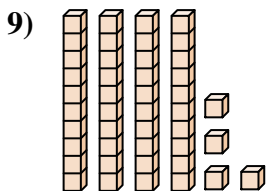
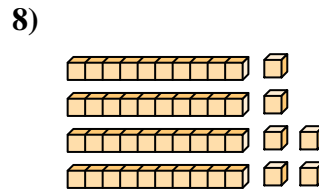
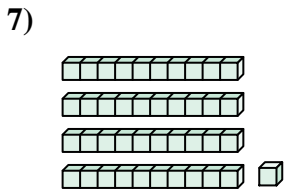
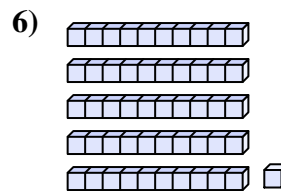
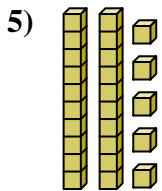
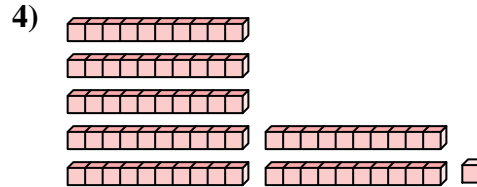
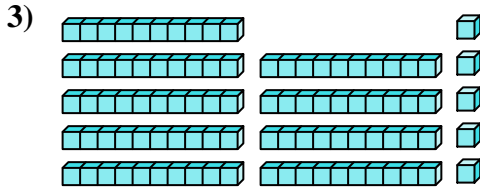
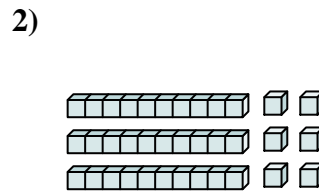
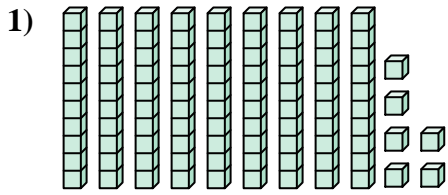
10. \_\_\_\_\_

11. \_\_\_\_\_

12. \_\_\_\_\_



Contar el número total de pequeños bloques.



**Respuestas**

1. 96

2. 36

3. 95

4. 71

5. 25

6. 51

7. 41

8. 46

9. 44

10. 88

11. 35

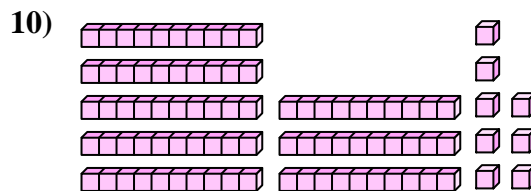
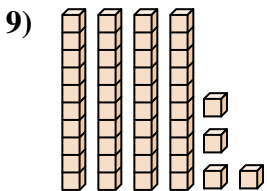
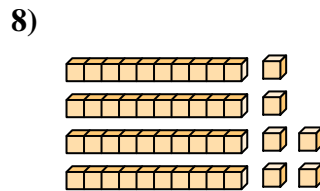
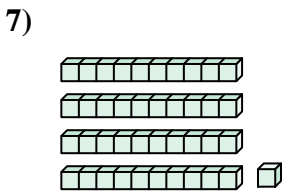
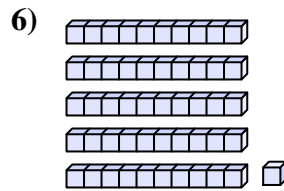
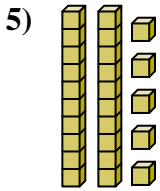
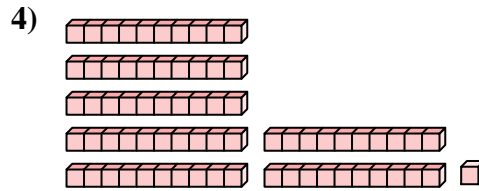
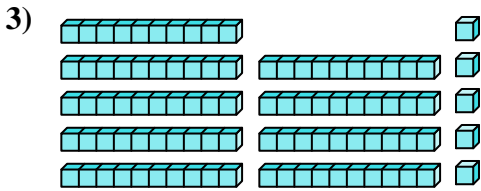
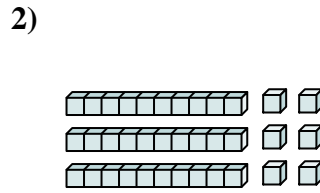
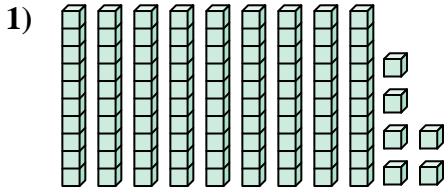
12. 49



Contar el número total de pequeños bloques.

88	25	36	44	46
41	51	96	71	95

**Respuestas**

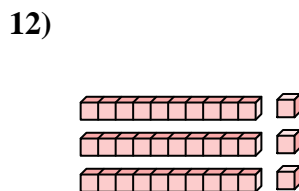
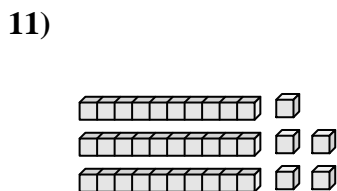
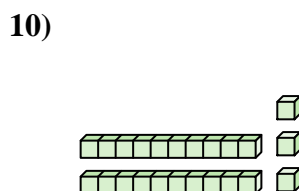
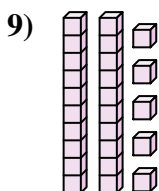
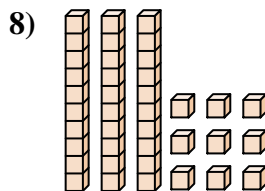
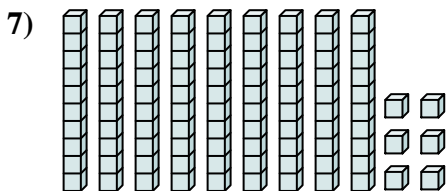
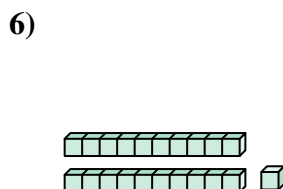
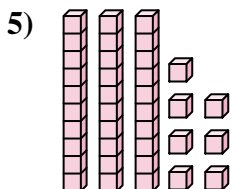
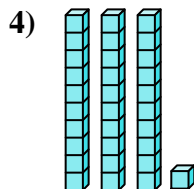
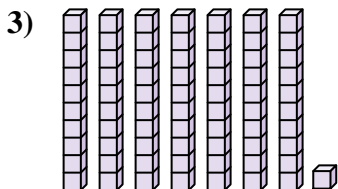
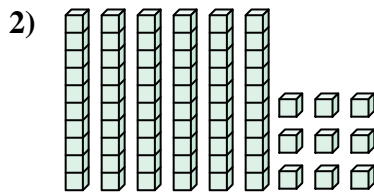
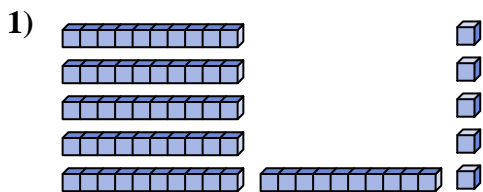


1. \_\_\_\_\_
2. \_\_\_\_\_
3. \_\_\_\_\_
4. \_\_\_\_\_
5. \_\_\_\_\_
6. \_\_\_\_\_
7. \_\_\_\_\_
8. \_\_\_\_\_
9. \_\_\_\_\_
10. \_\_\_\_\_



Contar el número total de pequeños bloques.

**Respuestas**

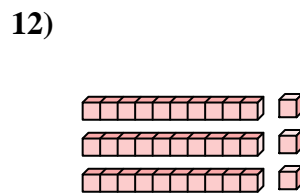
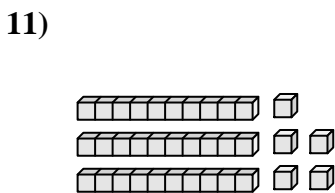
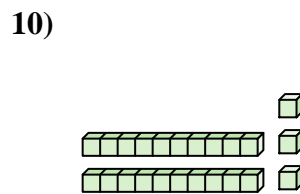
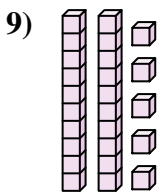
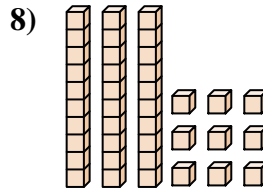
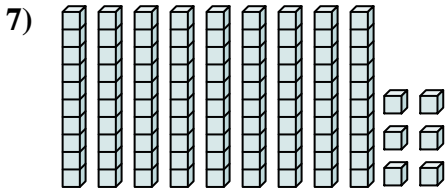
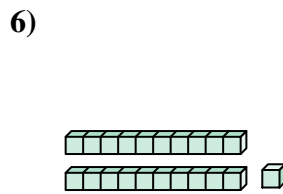
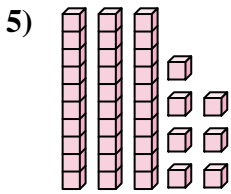
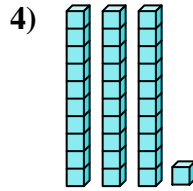
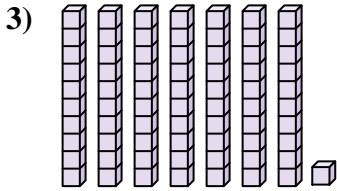
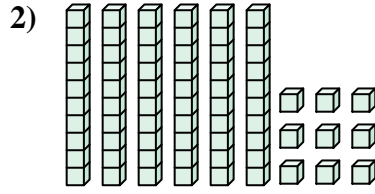
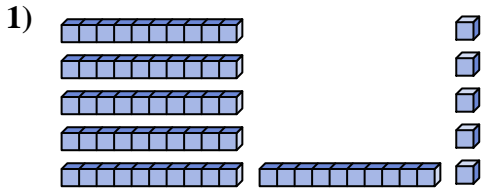


1. \_\_\_\_\_
2. \_\_\_\_\_
3. \_\_\_\_\_
4. \_\_\_\_\_
5. \_\_\_\_\_
6. \_\_\_\_\_
7. \_\_\_\_\_
8. \_\_\_\_\_
9. \_\_\_\_\_
10. \_\_\_\_\_
11. \_\_\_\_\_
12. \_\_\_\_\_





Contar el número total de pequeños bloques.



**Respuestas**

1. 65

2. 69

3. 71

4. 31

5. 37

6. 21

7. 96

8. 39

9. 25

10. 23

11. 35

12. 33



Contar el número total de pequeños bloques.

**Respuestas**

23

71

65

31

69

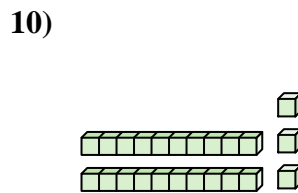
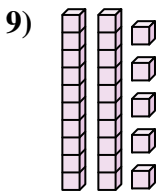
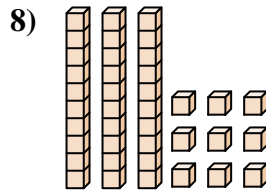
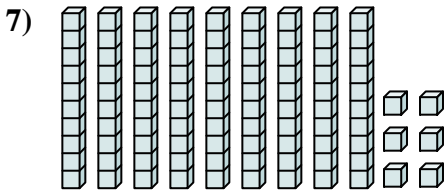
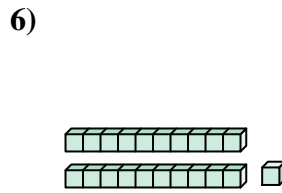
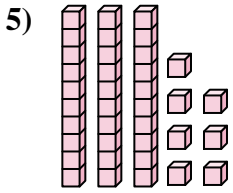
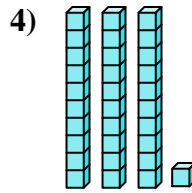
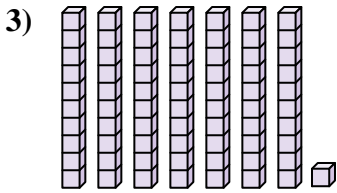
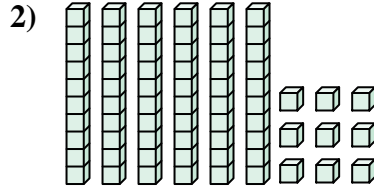
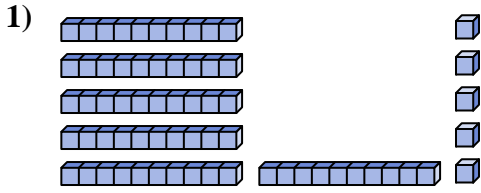
96

21

37

39

25

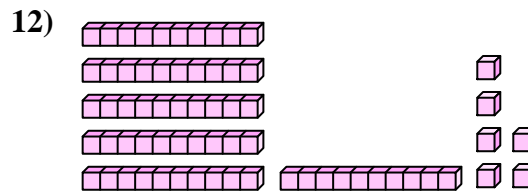
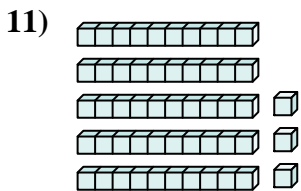
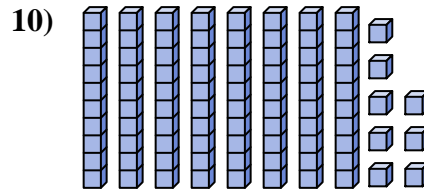
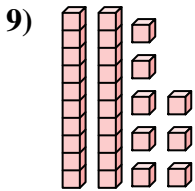
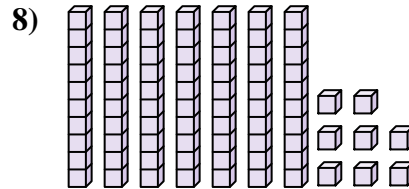
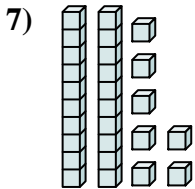
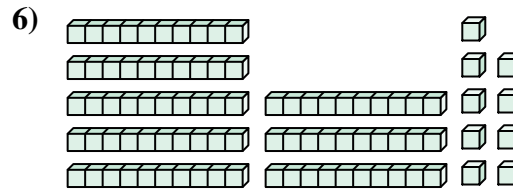
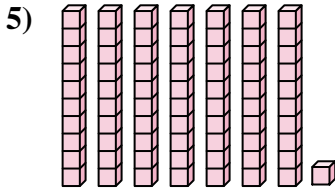
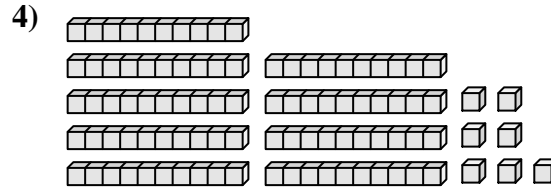
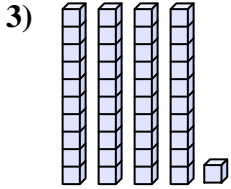
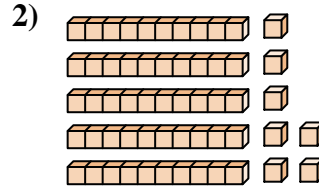
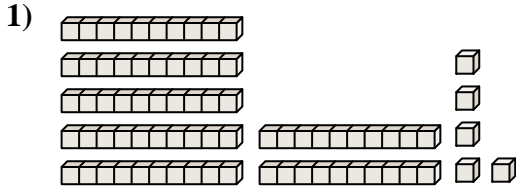


1. \_\_\_\_\_
2. \_\_\_\_\_
3. \_\_\_\_\_
4. \_\_\_\_\_
5. \_\_\_\_\_
6. \_\_\_\_\_
7. \_\_\_\_\_
8. \_\_\_\_\_
9. \_\_\_\_\_
10. \_\_\_\_\_





Contar el número total de pequeños bloques.



**Respuestas**

1. 75

2. 57

3. 41

4. 97

5. 71

6. 89

7. 27

8. 78

9. 28

10. 88

11. 53

12. 66



Contar el número total de pequeños bloques.

27

88

57

41

71

78

97

89

28

75

**Respuestas**

1. \_\_\_\_\_

2. \_\_\_\_\_

3. \_\_\_\_\_

4. \_\_\_\_\_

5. \_\_\_\_\_

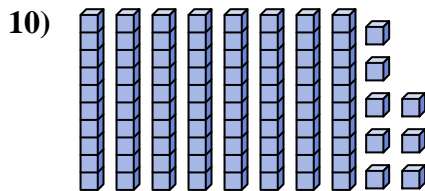
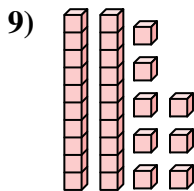
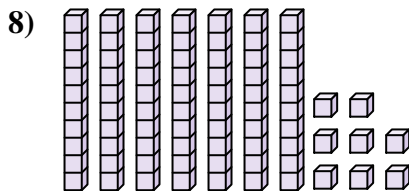
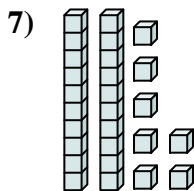
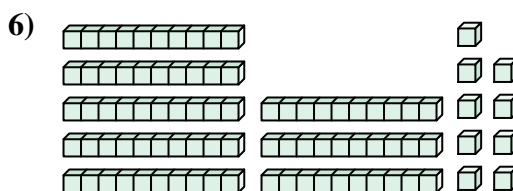

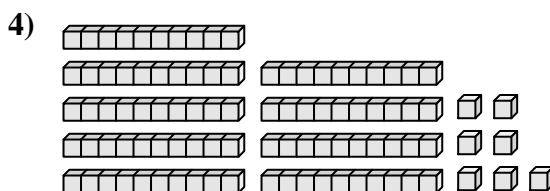
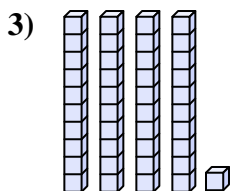
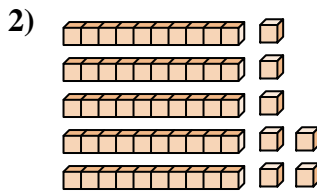
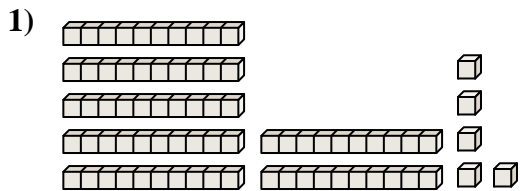
6. \_\_\_\_\_

7. \_\_\_\_\_

8. \_\_\_\_\_

9. \_\_\_\_\_

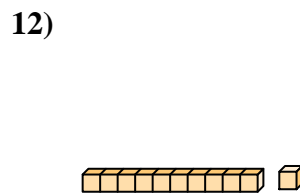
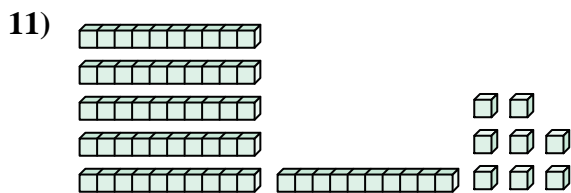
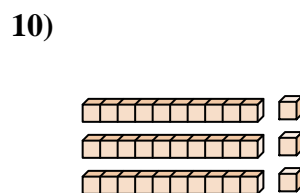
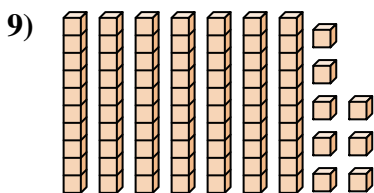
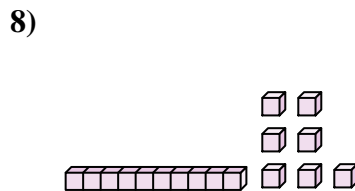
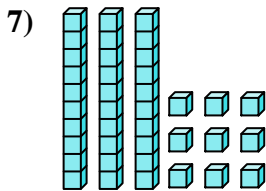
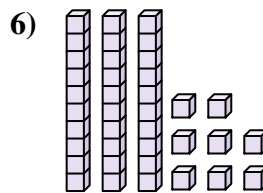
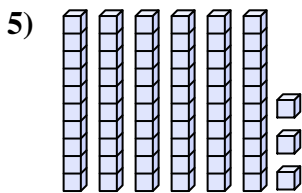
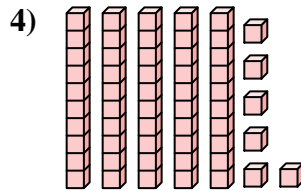
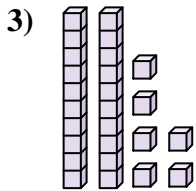
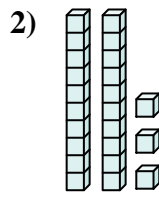
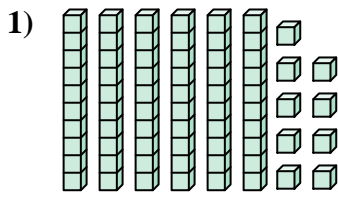
10. \_\_\_\_\_





Contar el número total de pequeños bloques.

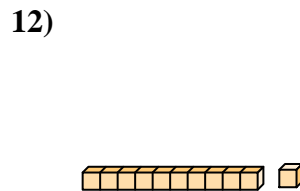
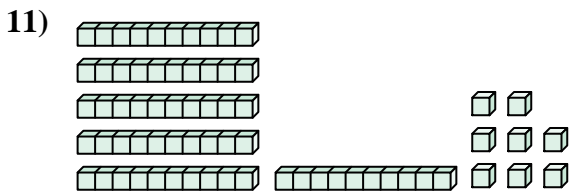
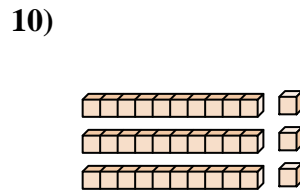
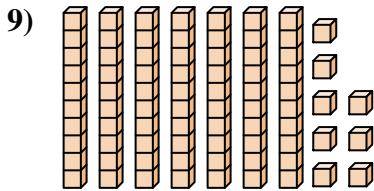
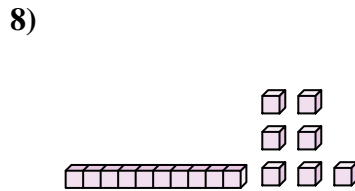
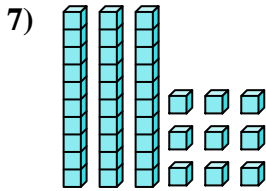
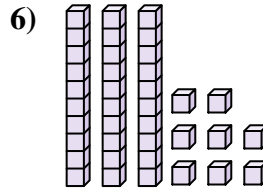
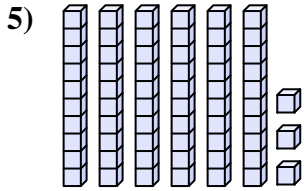
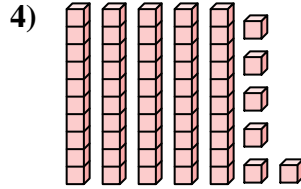
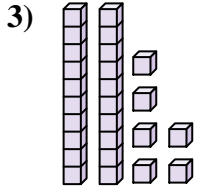
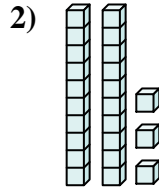
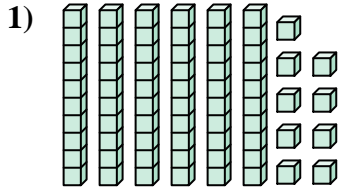
**Respuestas**



1. \_\_\_\_\_
2. \_\_\_\_\_
3. \_\_\_\_\_
4. \_\_\_\_\_
5. \_\_\_\_\_
6. \_\_\_\_\_
7. \_\_\_\_\_
8. \_\_\_\_\_
9. \_\_\_\_\_
10. \_\_\_\_\_
11. \_\_\_\_\_
12. \_\_\_\_\_



Contar el número total de pequeños bloques.



**Respuestas**

1. 69

2. 23

3. 26

4. 56

5. 63

6. 38

7. 39

8. 17

9. 78

10. 33

11. 68

12. 11



Contar el número total de pequeños bloques.

23

26

39

17

69

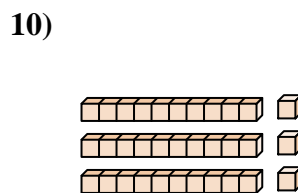
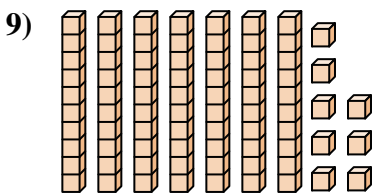
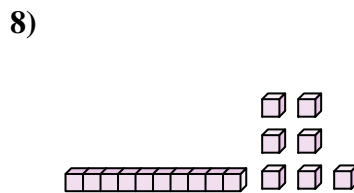
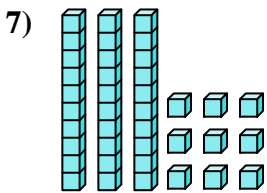
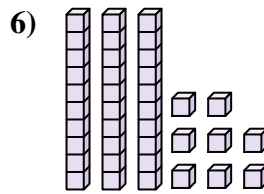
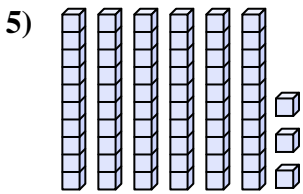
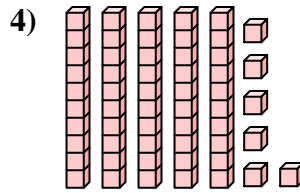
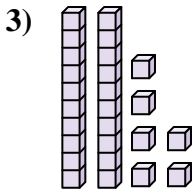
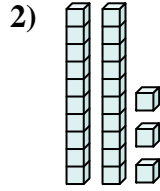
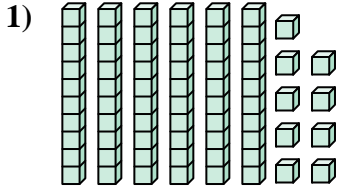
63

56

78

38

33



**Respuestas**

1. \_\_\_\_\_

2. \_\_\_\_\_

3. \_\_\_\_\_

4. \_\_\_\_\_

5. \_\_\_\_\_

6. \_\_\_\_\_

7. \_\_\_\_\_

8. \_\_\_\_\_

9. \_\_\_\_\_

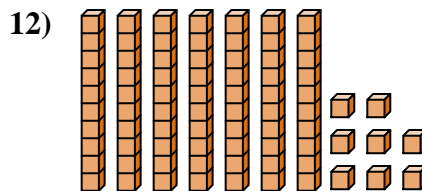
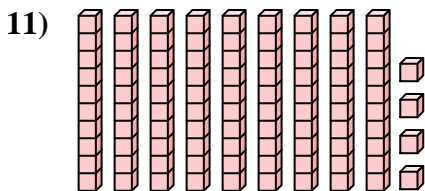
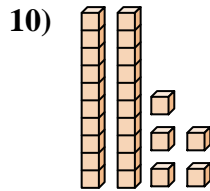
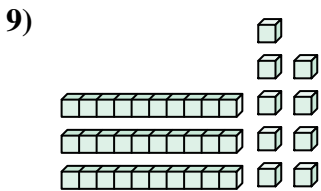
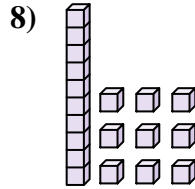
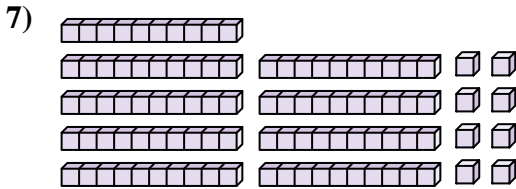
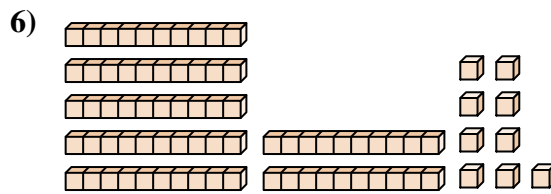
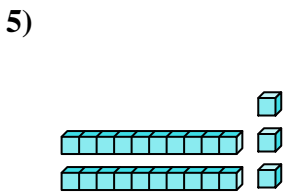
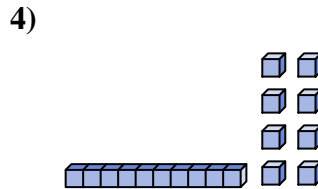
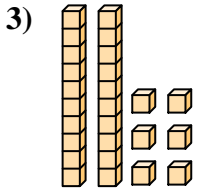
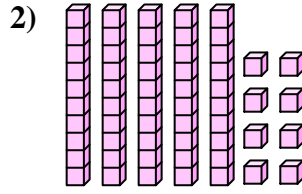
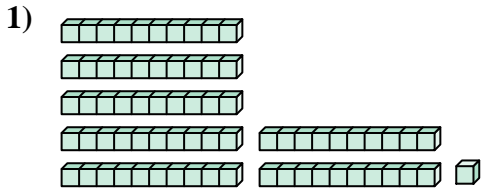
10. \_\_\_\_\_





Contar el número total de pequeños bloques.

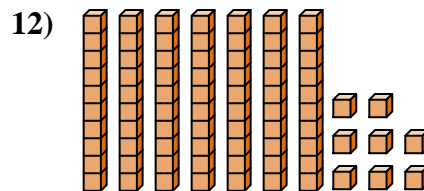
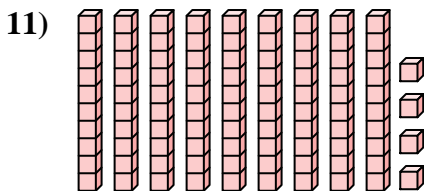
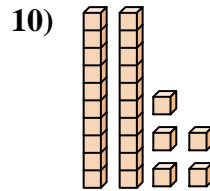
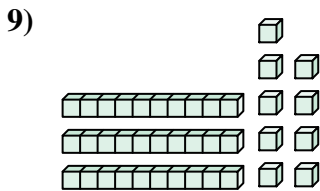
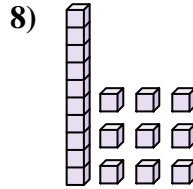
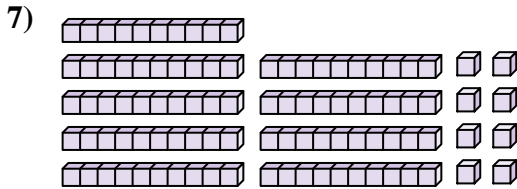
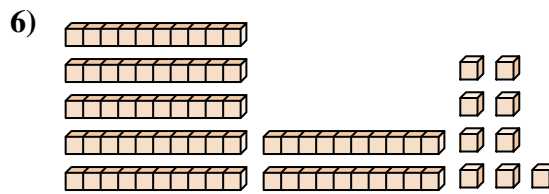
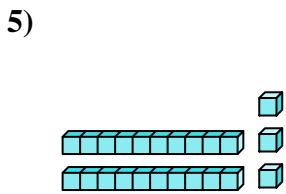
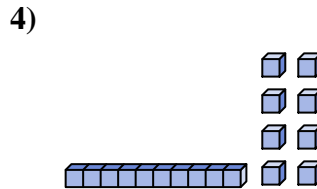
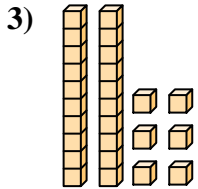
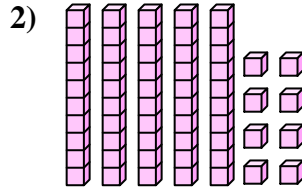
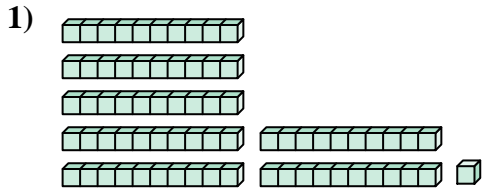
**Respuestas**



1. \_\_\_\_\_
2. \_\_\_\_\_
3. \_\_\_\_\_
4. \_\_\_\_\_
5. \_\_\_\_\_
6. \_\_\_\_\_
7. \_\_\_\_\_
8. \_\_\_\_\_
9. \_\_\_\_\_
10. \_\_\_\_\_
11. \_\_\_\_\_
12. \_\_\_\_\_



Contar el número total de pequeños bloques.



**Respuestas**

1. **71**

2. **58**

3. **26**

4. **18**

5. **23**

6. **79**

7. **98**

8. **19**

9. **39**

10. **25**

11. **94**

12. **78**



Contar el número total de pequeños bloques.

**Respuestas**

19

26

79

58

23

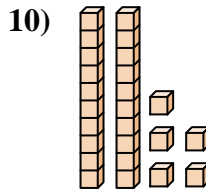
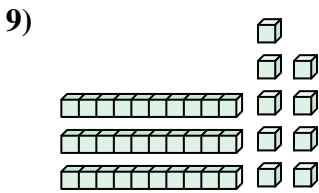
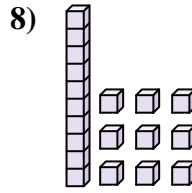
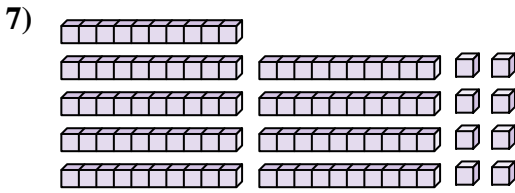
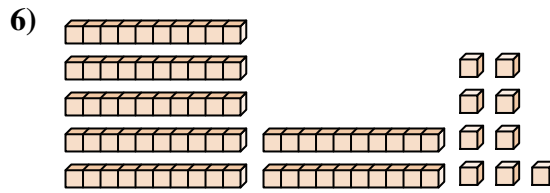
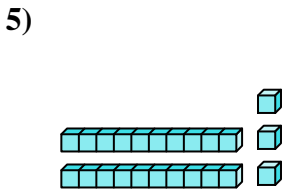
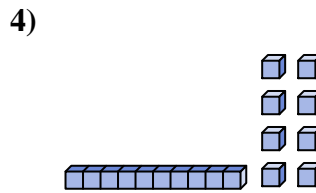
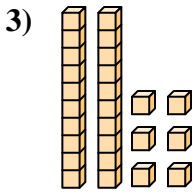
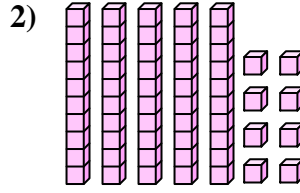
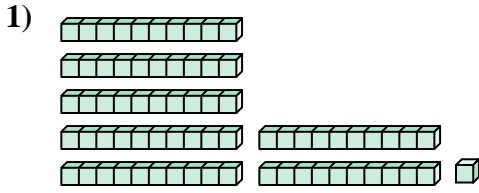
98

39

25

71

18

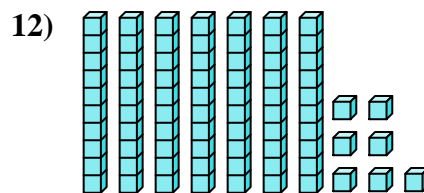
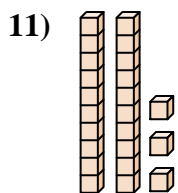
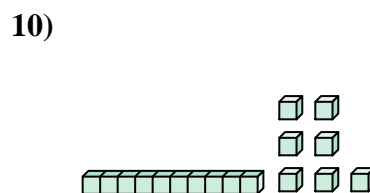
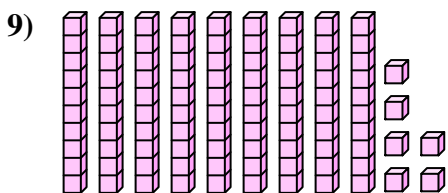
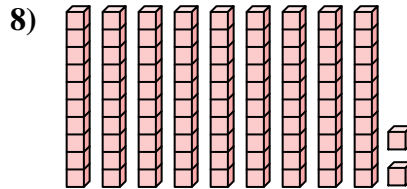
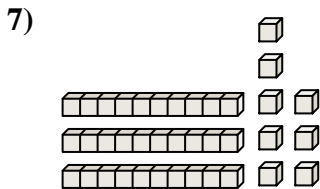
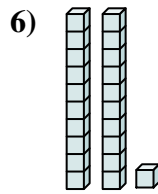
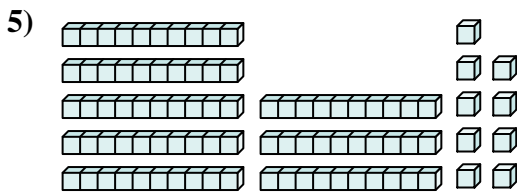
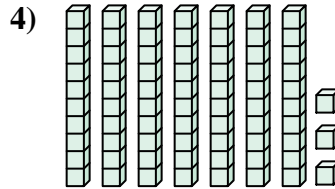
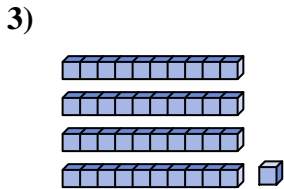
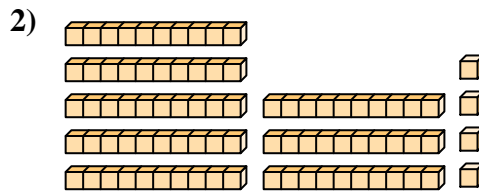
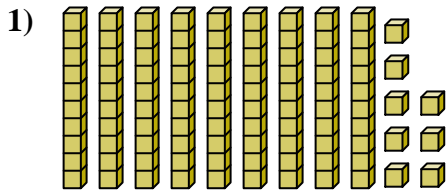


1. \_\_\_\_\_
2. \_\_\_\_\_
3. \_\_\_\_\_
4. \_\_\_\_\_
5. \_\_\_\_\_
6. \_\_\_\_\_
7. \_\_\_\_\_
8. \_\_\_\_\_
9. \_\_\_\_\_
10. \_\_\_\_\_



Contar el número total de pequeños bloques.

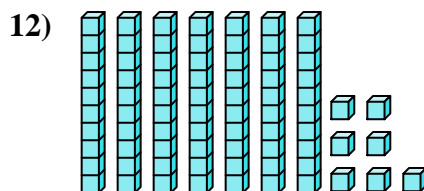
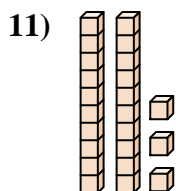
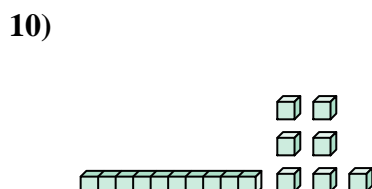
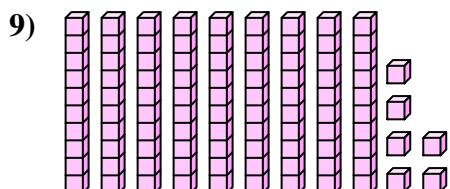
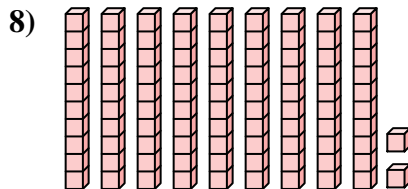
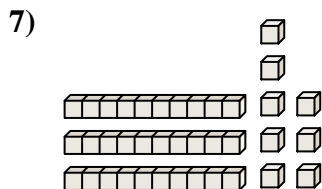
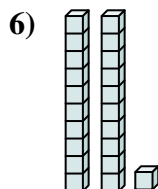
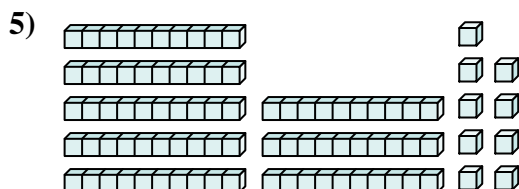
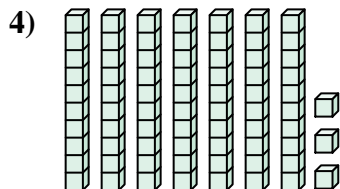
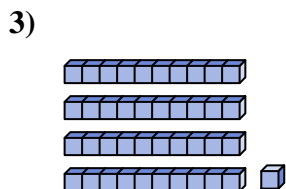
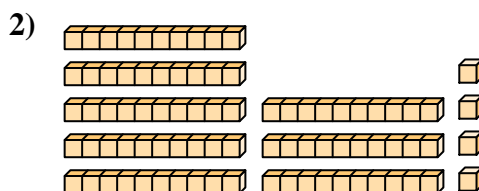
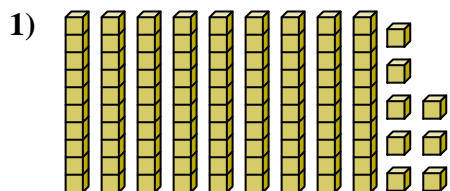
**Respuestas**



1. \_\_\_\_\_
2. \_\_\_\_\_
3. \_\_\_\_\_
4. \_\_\_\_\_
5. \_\_\_\_\_
6. \_\_\_\_\_
7. \_\_\_\_\_
8. \_\_\_\_\_
9. \_\_\_\_\_
10. \_\_\_\_\_
11. \_\_\_\_\_
12. \_\_\_\_\_



Contar el número total de pequeños bloques.



**Respuestas**

1. **98**

2. **84**

3. **41**

4. **73**

5. **89**

6. **21**

7. **38**

8. **92**

9. **96**

10. **17**

11. **23**

12. **77**



Contar el número total de pequeños bloques.

38

96

98

92

21

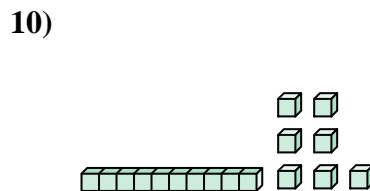
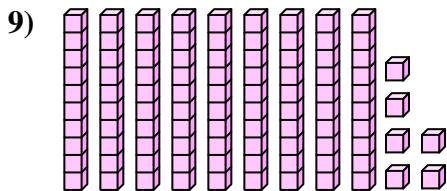
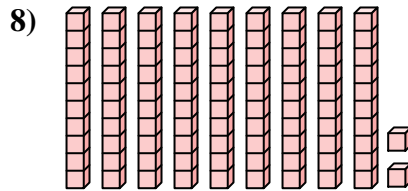
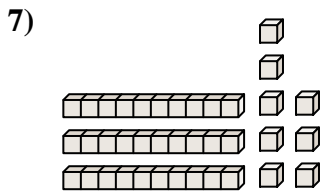
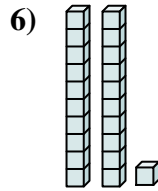
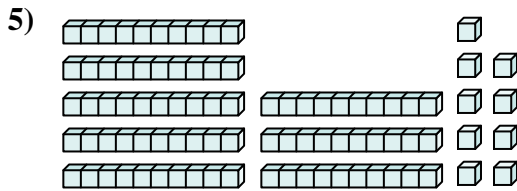
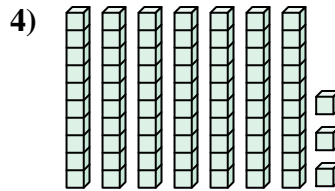
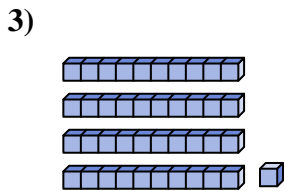
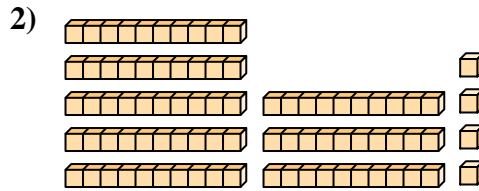
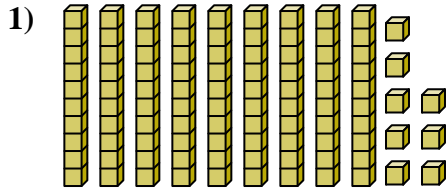
41

89

84

73

17



**Respuestas**

1. \_\_\_\_\_
2. \_\_\_\_\_
3. \_\_\_\_\_
4. \_\_\_\_\_
5. \_\_\_\_\_
6. \_\_\_\_\_
7. \_\_\_\_\_
8. \_\_\_\_\_
9. \_\_\_\_\_
10. \_\_\_\_\_