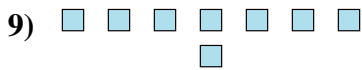
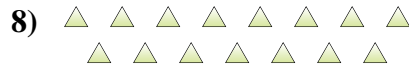
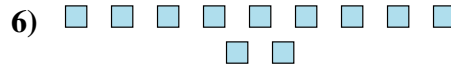
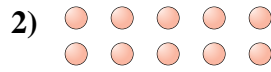





Determinar si el número de figuras en la caja es par o impar.




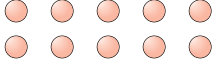
Respuestas


- 1. _____
- 2. _____
- 3. _____
- 4. _____
- 5. _____
- 6. _____
- 7. _____
- 8. _____
- 9. _____
- 10. _____



Determinar si el número de figuras en la caja es par o impar.

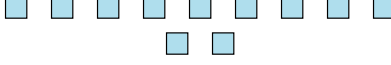
1) 
18

2) 
10

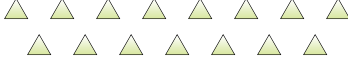
3) 
6

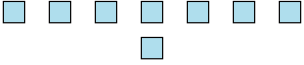
4) 
13


5) 
6

6) 
11

7) 
12

8) 
15

9) 
8

10) 
16

Respuestas

1. **Par**

2. **Par**

3. **Par**

4. **Impar**

5. **Par**

6. **Impar**

7. **Par**

8. **Impar**

9. **Par**

10. **Par**