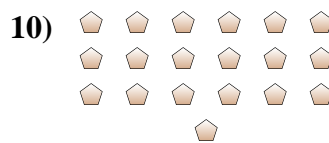
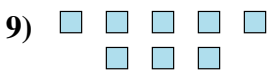
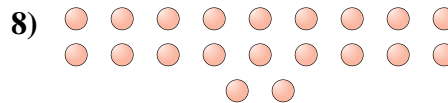
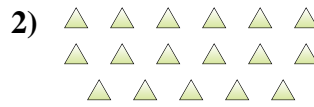
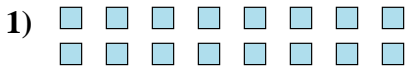




Determinar si el número de figuras en la caja es par o impar.

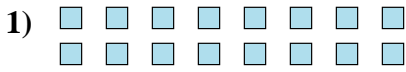


Respuestas

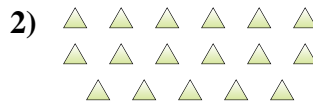
1. _____
2. _____
3. _____
4. _____
5. _____
6. _____
7. _____
8. _____
9. _____
10. _____



Determinar si el número de figuras en la caja es par o impar.



16



17



5



6



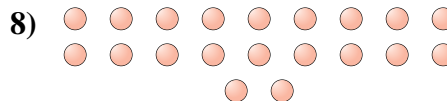
13



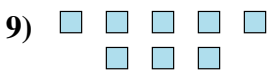
15



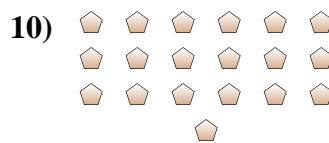
8



20



8



19

Respuestas

1. Par

2. Impar

3. Impar

4. Par

5. Impar

6. Impar

7. Par

8. Par

9. Par

10. Impar