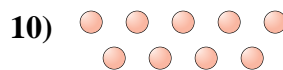
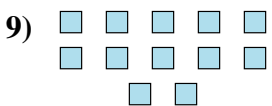

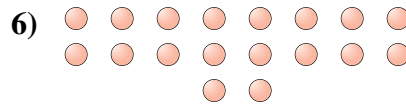

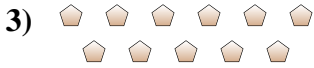
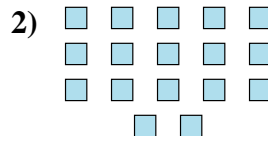
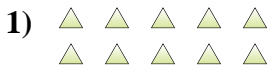




Determinar si el número de figuras en la caja es par o impar.

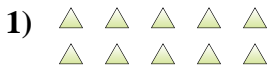
Respuestas



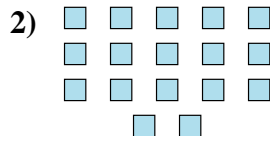
- 1. _____
- 2. _____
- 3. _____
- 4. _____
- 5. _____
- 6. _____
- 7. _____
- 8. _____
- 9. _____
- 10. _____



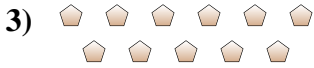
Determinar si el número de figuras en la caja es par o impar.




10



17



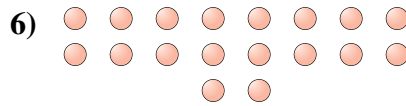
11



19



14



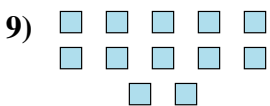
18



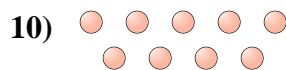
18



8



12



9

Respuestas

1. **Par**

2. **Impar**

3. **Impar**

4. **Impar**

5. **Par**

6. **Par**

7. **Par**

8. **Par**

9. **Par**

10. **Impar**