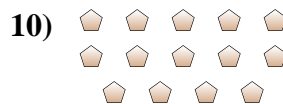
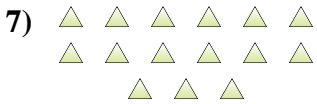
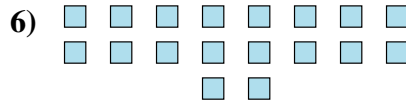
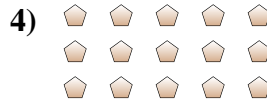

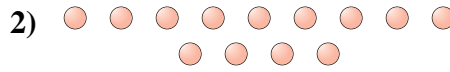




Determinar si el número de figuras en la caja es par o impar.



Respuestas

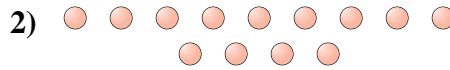
1. _____
2. _____
3. _____
4. _____
5. _____
6. _____
7. _____
8. _____
9. _____
10. _____




Determinar si el número de figuras en la caja es par o impar.



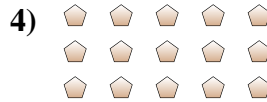
9



13



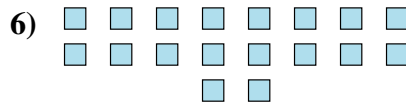
19



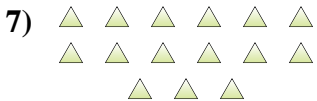
15



17



18



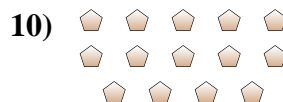
15



5



10



14

Respuestas

1. **Impar**

2. **Impar**

3. **Impar**

4. **Impar**

5. **Impar**

6. **Par**

7. **Impar**

8. **Impar**

9. **Par**

10. **Par**