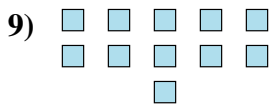
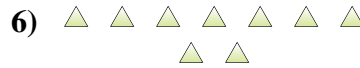
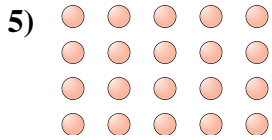




Determinar si el número de figuras en la caja es par o impar.



Respuestas

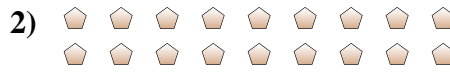
1. _____
2. _____
3. _____
4. _____
5. _____
6. _____
7. _____
8. _____
9. _____
10. _____



Determinar si el número de figuras en la caja es par o impar.



7



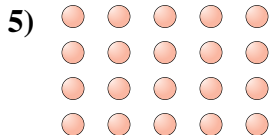
18



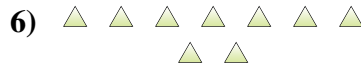
6



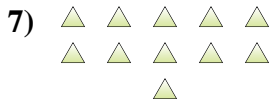
7



20



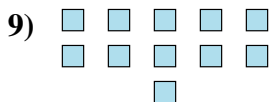
9



11



5



11



6

Respuestas

1. **Impar**

2. **Par**

3. **Par**

4. **Impar**

5. **Par**

6. **Impar**

7. **Impar**

8. **Impar**

9. **Impar**

10. **Par**