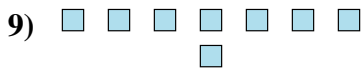
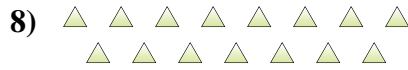
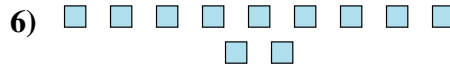
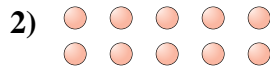





Determinar si el número de figuras en la caja es par o impar.



Respuestas

- 1. _____
- 2. _____
- 3. _____
- 4. _____
- 5. _____
- 6. _____
- 7. _____
- 8. _____
- 9. _____
- 10. _____



Determinar si el número de figuras en la caja es par o impar.

1) **18**

2) **10**

3) **6**

4) **13**

5) **6**

6) **11**

7) **12**

8) **15**

9) **8**

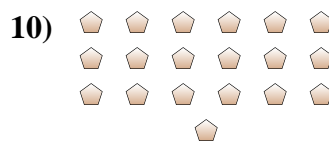
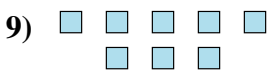
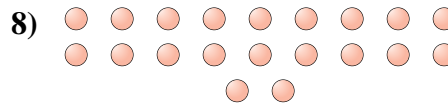
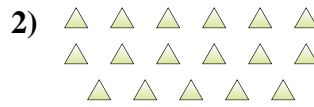
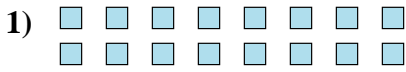
10) **16**

Respuestas

1. **Par**
2. **Par**
3. **Par**
4. **Impar**
5. **Par**
6. **Impar**
7. **Par**
8. **Impar**
9. **Par**
10. **Par**



Determinar si el número de figuras en la caja es par o impar.

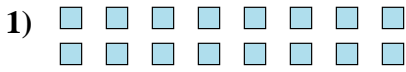


Respuestas

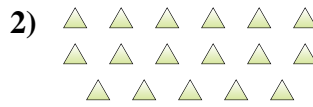
1. _____
2. _____
3. _____
4. _____
5. _____
6. _____
7. _____
8. _____
9. _____
10. _____



Determinar si el número de figuras en la caja es par o impar.



16



17



5



6



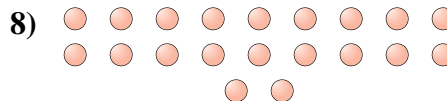
13



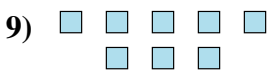
15



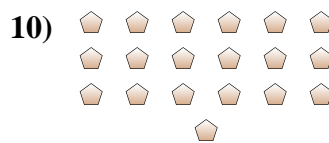
8



20



8



19

Respuestas

1. **Par**

2. **Impar**

3. **Impar**

4. **Par**

5. **Impar**

6. **Impar**

7. **Par**


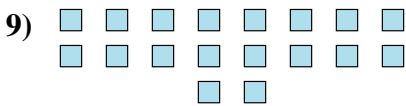
8. **Par**

9. **Par**

10. **Impar**



Determinar si el número de figuras en la caja es par o impar.



Respuestas

1. _____
2. _____
3. _____
4. _____
5. _____
6. _____
7. _____
8. _____
9. _____
10. _____



Determinar si el número de figuras en la caja es par o impar.



5



12



6



8



5



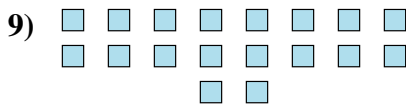
5




5



9



18



17

Respuestas

1. **Impar**

2. **Par**

3. **Par**

4. **Par**

5. **Impar**

6. **Impar**

7. **Impar**

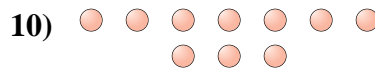
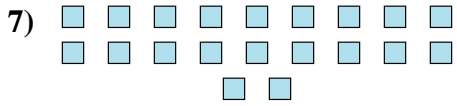
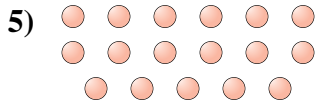
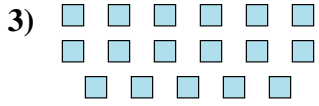
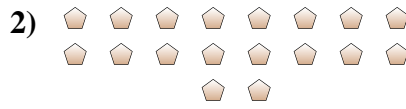
8. **Impar**

9. **Par**

10. **Impar**



Determinar si el número de figuras en la caja es par o impar.



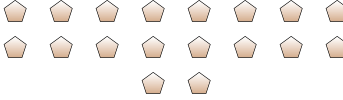
Respuestas

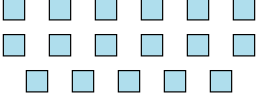
- 1. _____
- 2. _____
- 3. _____
- 4. _____
- 5. _____
- 6. _____
- 7. _____
- 8. _____
- 9. _____
- 10. _____




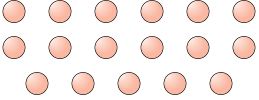
Determinar si el número de figuras en la caja es par o impar.


1) 
19

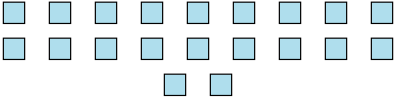
2) 
18

3) 
17

4) 
15

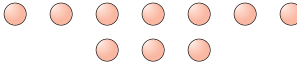
5) 
17

6) 
13

7) 
20

8) 
7

9) 
6

10) 
10

Respuestas

1. **Impar**

2. **Par**

3. **Impar**

4. **Impar**

5. **Impar**

6. **Impar**

7. **Par**

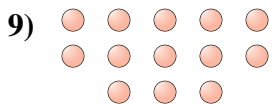
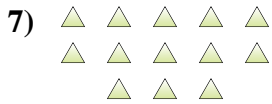

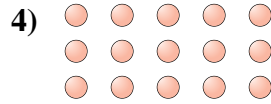
8. **Impar**

9. **Par**

10. **Par**



Determinar si el número de figuras en la caja es par o impar.



Respuestas

1. _____
2. _____
3. _____
4. _____
5. _____
6. _____
7. _____
8. _____
9. _____
10. _____



Determinar si el número de figuras en la caja es par o impar.



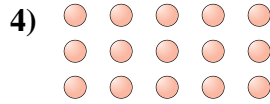
6




14



10



15



17



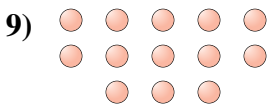
7



13



10



13



8

Respuestas

1. **Par**

2. **Par**

3. **Par**

4. **Impar**

5. **Impar**

6. **Impar**

7. **Impar**

8. **Par**

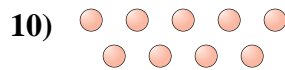
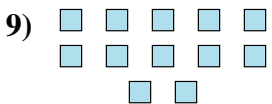

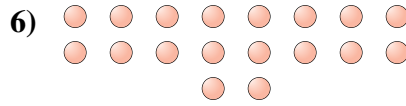

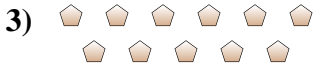
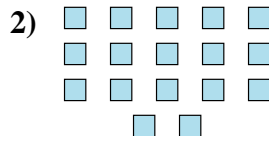
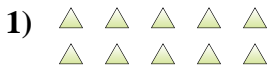
9. **Impar**

10. **Par**



Determinar si el número de figuras en la caja es par o impar.

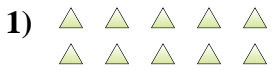
Respuestas



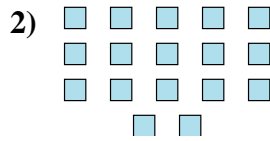
- 1. _____
- 2. _____
- 3. _____
- 4. _____
- 5. _____
- 6. _____
- 7. _____
- 8. _____
- 9. _____
- 10. _____



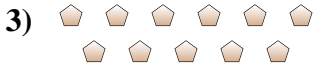
Determinar si el número de figuras en la caja es par o impar.




10



17



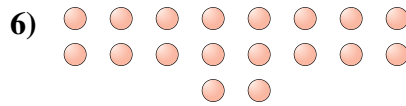
11



19



14



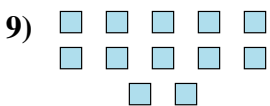
18



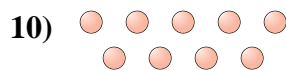
18



8



12



9

Respuestas

1. **Par**

2. **Impar**

3. **Impar**

4. **Impar**

5. **Par**

6. **Par**

7. **Par**

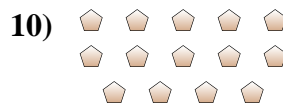
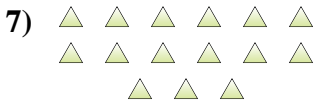
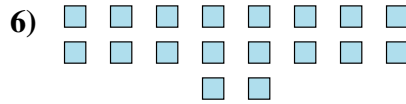
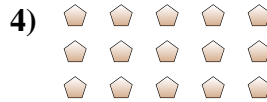

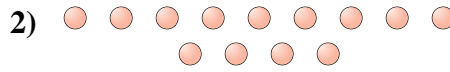
8. **Par**

9. **Par**

10. **Impar**



Determinar si el número de figuras en la caja es par o impar.



Respuestas

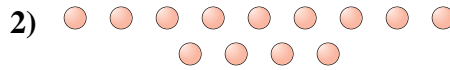
1. _____
2. _____
3. _____
4. _____
5. _____
6. _____
7. _____
8. _____
9. _____
10. _____




Determinar si el número de figuras en la caja es par o impar.



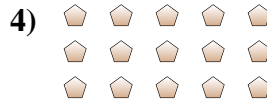
9



13



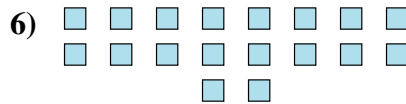
19



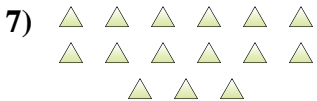
15



17



18



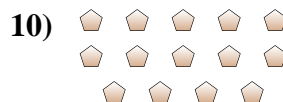
15



5



10



14

Respuestas

1. **Impar**

2. **Impar**

3. **Impar**

4. **Impar**

5. **Impar**

6. **Par**

7. **Impar**

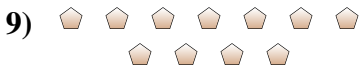
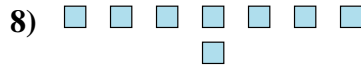
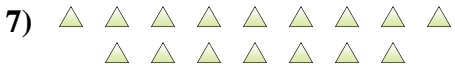
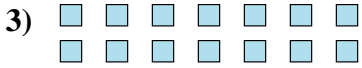
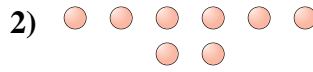
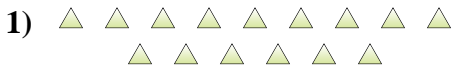
8. **Impar**

9. **Par**

10. **Par**



Determinar si el número de figuras en la caja es par o impar.

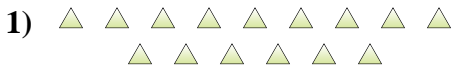


Respuestas

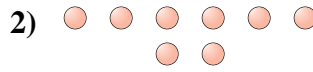
- 1. _____
- 2. _____
- 3. _____
- 4. _____
- 5. _____
- 6. _____
- 7. _____
- 8. _____
- 9. _____
- 10. _____



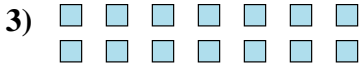
Determinar si el número de figuras en la caja es par o impar.



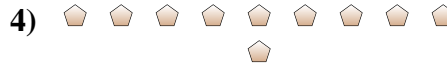
15



8



14



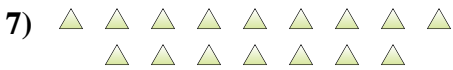
10



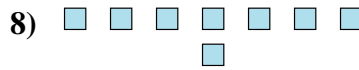
12



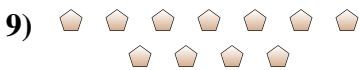
8



16



8



11



7

Respuestas

1. **Impar**

2. **Par**

3. **Par**

4. **Par**

5. **Par**

6. **Par**

7. **Par**

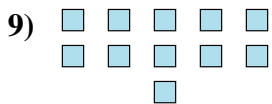
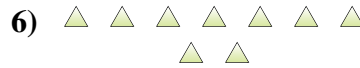
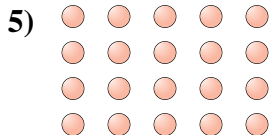
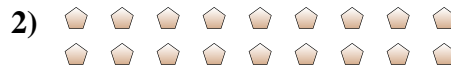
8. **Par**

9. **Impar**

10. **Impar**



Determinar si el número de figuras en la caja es par o impar.



Respuestas

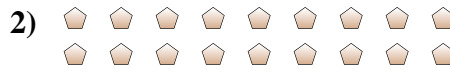
- 1. _____
- 2. _____
- 3. _____
- 4. _____
- 5. _____
- 6. _____
- 7. _____
- 8. _____
- 9. _____
- 10. _____



Determinar si el número de figuras en la caja es par o impar.



7



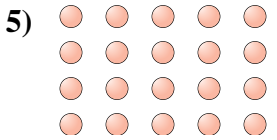
18



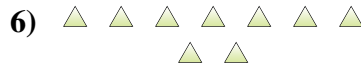
6



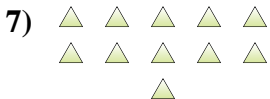
7



20



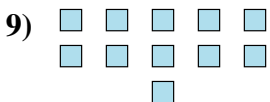
9



11



5



11



6

Respuestas

1. **Impar**

2. **Par**

3. **Par**

4. **Impar**

5. **Par**

6. **Impar**

7. **Impar**

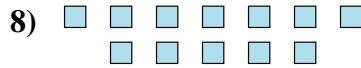
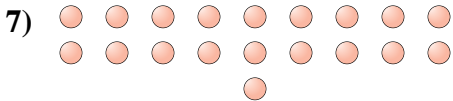
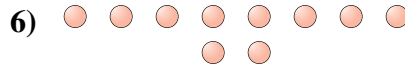
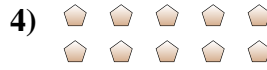

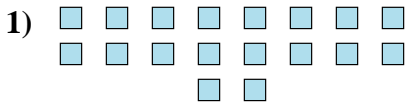
8. **Impar**

9. **Impar**

10. **Par**



Determinar si el número de figuras en la caja es par o impar.

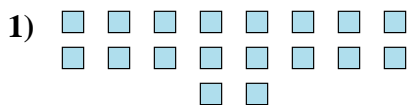


Respuestas


1. _____
2. _____
3. _____
4. _____
5. _____
6. _____
7. _____
8. _____
9. _____
10. _____



Determinar si el número de figuras en la caja es par o impar.



18



20



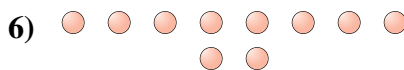
14



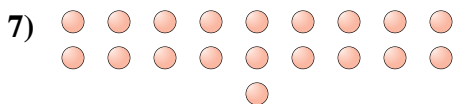
10



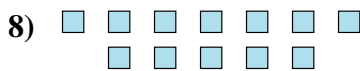
12



10



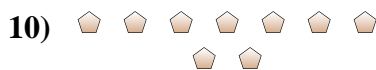
19



12



7



9

Respuestas

1. **Par**

2. **Par**

3. **Par**

4. **Par**

5. **Par**

6. **Par**

7. **Impar**

8. **Par**

9. **Impar**

10. **Impar**