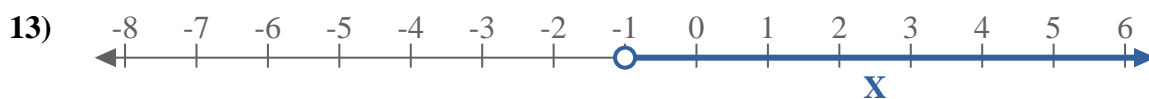
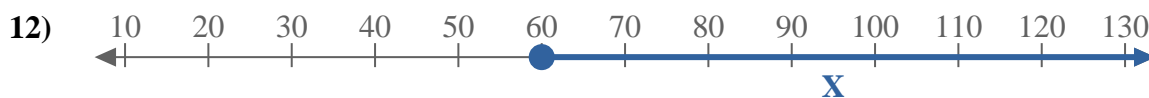
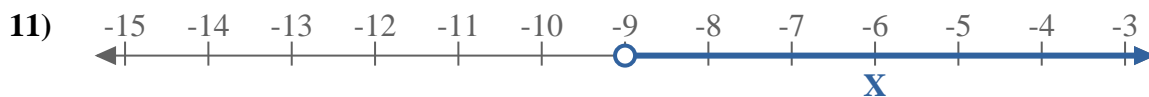
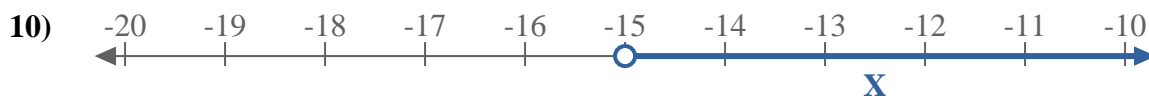
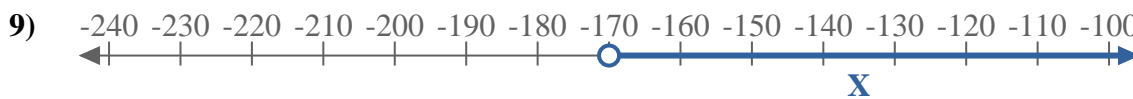
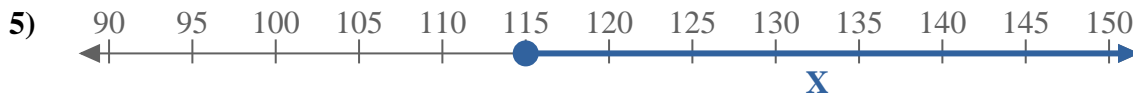
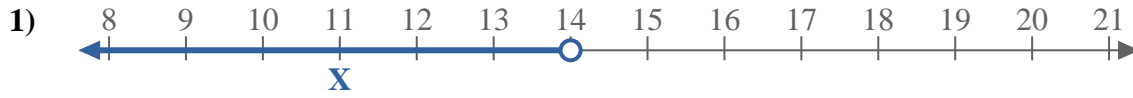




Escribe una desigualdad para expresar la línea de número.



Respuestas

Ej. $X \geq -3$

1. _____

2. _____

3. _____

4. _____

5. _____

6. _____

7. _____

8. _____

9. _____

10. _____

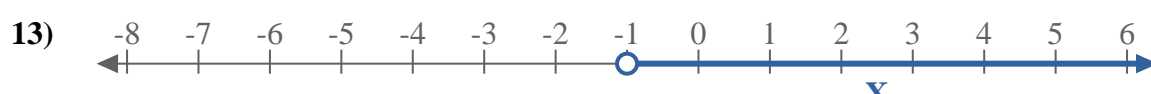
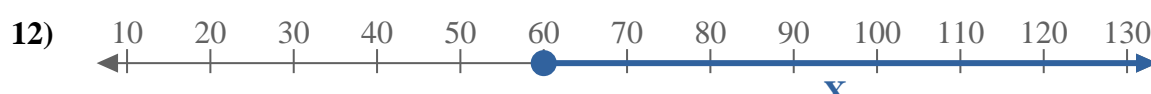
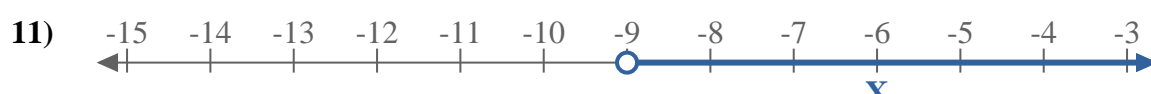
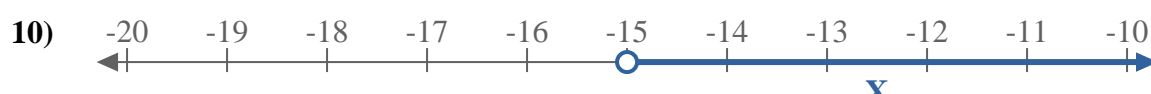
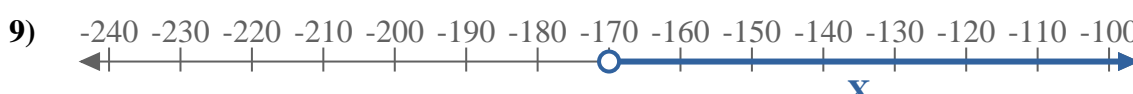
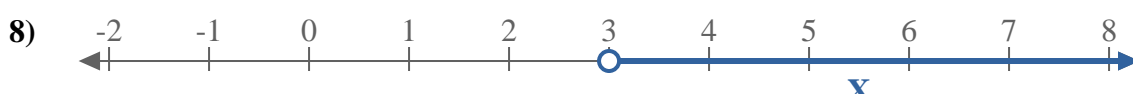
11. _____

12. _____

13. _____



Escribe una desigualdad para expresar la línea de número.



Respuestas

Ej. $x \geq -3$

1. $x < 14$

2. $x \leq 5$

3. $x \leq -19$

4. $x < -120$

5. $x \geq 115$

6. $x \leq 5$

7. $x \geq -70$

8. $x > 3$

9. $x > -170$

10. $x > -15$

11. $x > -9$

12. $x \geq 60$

13. $x > -1$