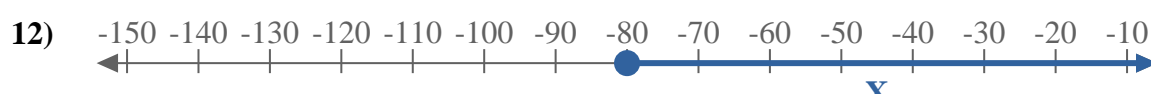
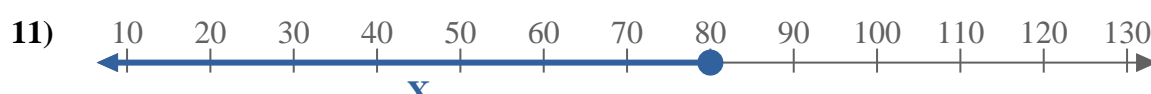

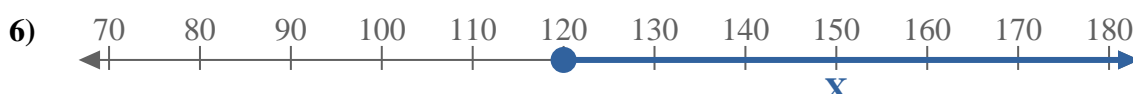
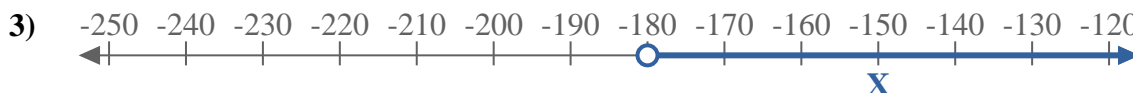
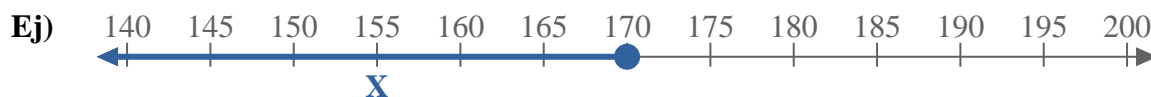




Escribe una desigualdad para expresar la línea de número.



Respuestas

Ej. $X \leq 170$

1. _____

2. _____

3. _____

4. _____

5. _____

6. _____

7. _____

8. _____

9. _____

10. _____

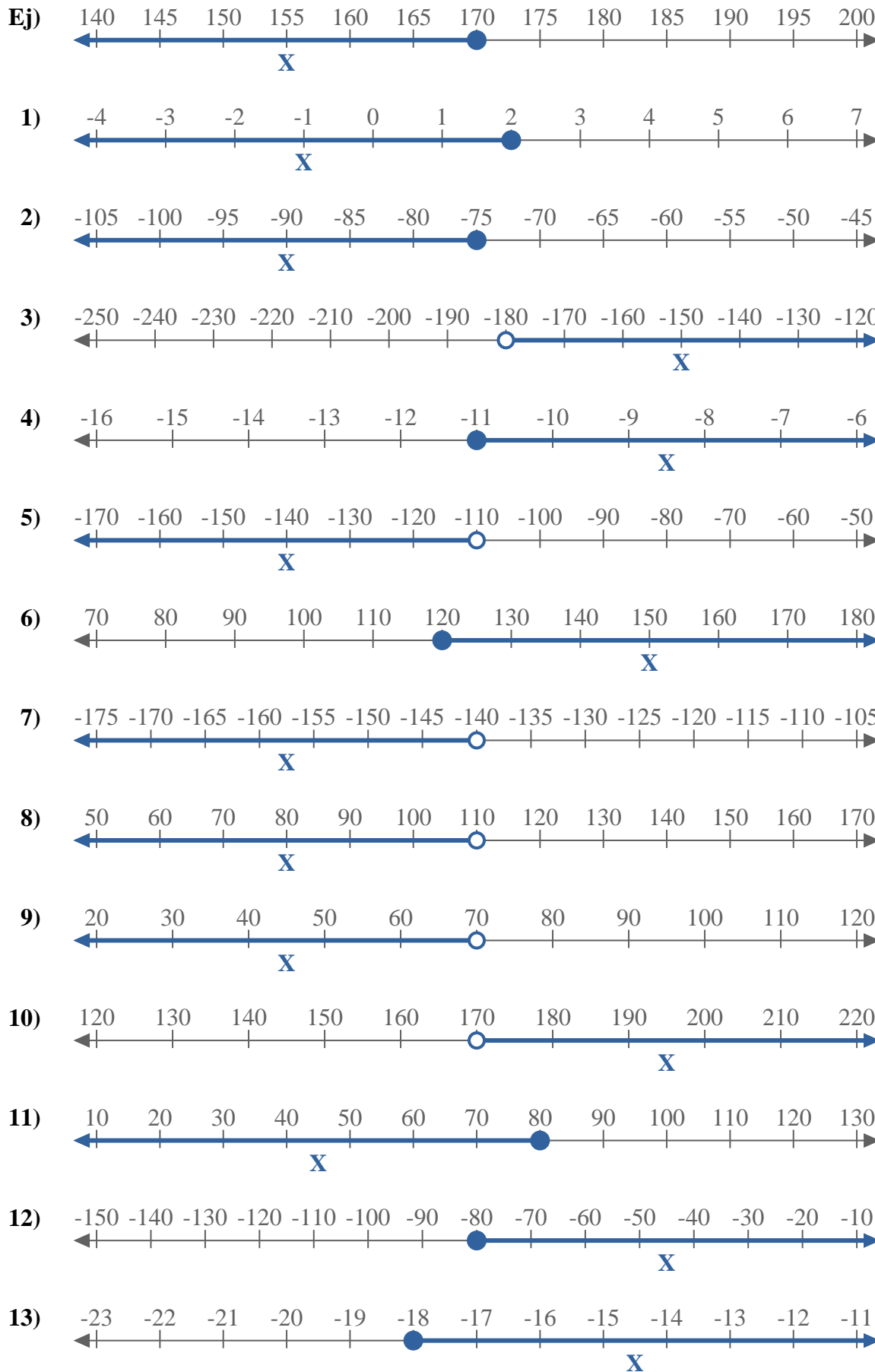
11. _____

12. _____

13. _____



Escribe una desigualdad para expresar la línea de número.



Respuestas

- Ej. $X \leq 170$
1. $X \leq 2$
2. $X \leq -75$
3. $X > -180$
4. $X \geq -11$
5. $X < -110$
6. $X \geq 120$
7. $X < -140$
8. $X < 110$
9. $X < 70$
10. $X > 170$
11. $X \leq 80$
12. $X \geq -80$
13. $X \geq -18$