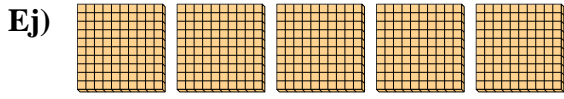
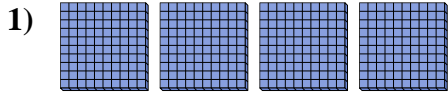




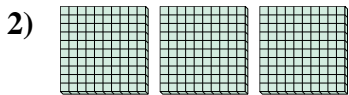
Utilice los bloques para determinar las cantidades totales.




5 centenas = 50 decenas = 500 unos



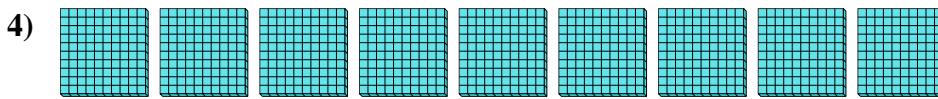
\_\_\_\_\_ centenas = \_\_\_\_\_ decenas = \_\_\_\_\_ unos



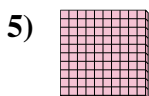
\_\_\_\_\_ centenas = \_\_\_\_\_ decenas = \_\_\_\_\_ unos



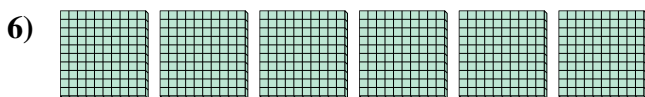
\_\_\_\_\_ centenas = \_\_\_\_\_ decenas = \_\_\_\_\_ unos



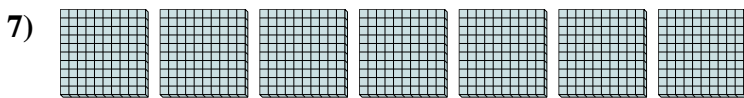
\_\_\_\_\_ centenas = \_\_\_\_\_ decenas = \_\_\_\_\_ unos



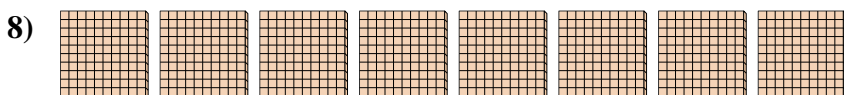
\_\_\_\_\_ centenas = \_\_\_\_\_ decenas = \_\_\_\_\_ unos



\_\_\_\_\_ centenas = \_\_\_\_\_ decenas = \_\_\_\_\_ unos



\_\_\_\_\_ centenas = \_\_\_\_\_ decenas = \_\_\_\_\_ unos



\_\_\_\_\_ centenas = \_\_\_\_\_ decenas = \_\_\_\_\_ unos

**Respuestas**

Ej. 5    50    500

1. \_\_\_\_\_

2. \_\_\_\_\_

3. \_\_\_\_\_

4. \_\_\_\_\_

5. \_\_\_\_\_


6. \_\_\_\_\_

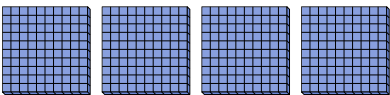
7. \_\_\_\_\_


8. \_\_\_\_\_





Utilice los bloques para determinar las cantidades totales.


Ej)   
5 centenas = 50 decenas = 500 unos

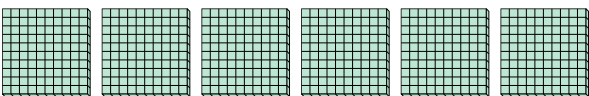
1)   
4 centenas = 40 decenas = 400 unos


2)   
3 centenas = 30 decenas = 300 unos

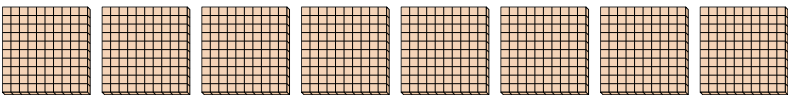
3)   
2 centenas = 20 decenas = 200 unos

4)   
9 centenas = 90 decenas = 900 unos

5)   
1 centenas = 10 decenas = 100 unos

6)   
6 centenas = 60 decenas = 600 unos

7)   
7 centenas = 70 decenas = 700 unos

8)   
8 centenas = 80 decenas = 800 unos

**Respuestas**

Ej.	<u>5</u>	<u>50</u>	<u>500</u>
1.	<u>4</u>	<u>40</u>	<u>400</u>
2.	<u>3</u>	<u>30</u>	<u>300</u>
3.	<u>2</u>	<u>20</u>	<u>200</u>
4.	<u>9</u>	<u>90</u>	<u>900</u>
5.	<u>1</u>	<u>10</u>	<u>100</u>
6.	<u>6</u>	<u>60</u>	<u>600</u>
7.	<u>7</u>	<u>70</u>	<u>700</u>
8.	<u>8</u>	<u>80</u>	<u>800</u>