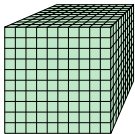
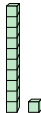
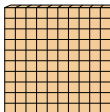
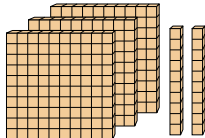
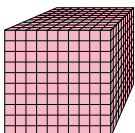
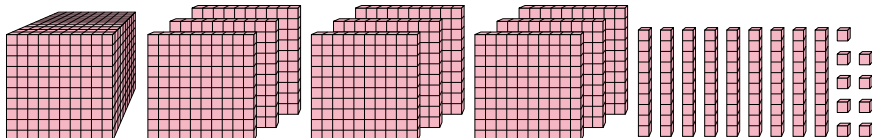


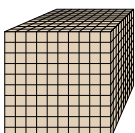
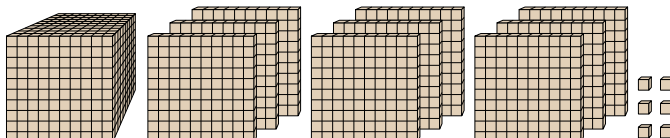


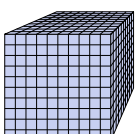
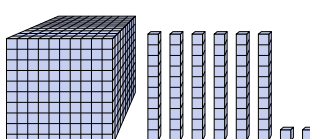
Utilice el bloque de la izquierda para encontrar el valor del conjunto de bloques de la derecha.

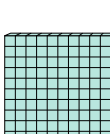
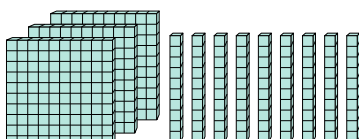
1)  = 1 

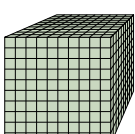
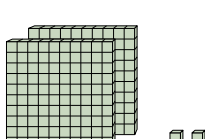
2)  = 1 

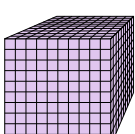
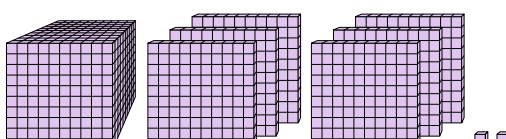
3)  = 1 

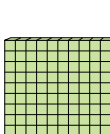
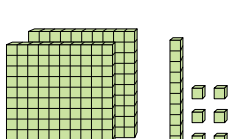
4)  = 1 

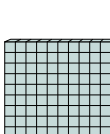
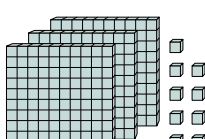
5)  = 1 

6)  = 1 

7)  = 1 

8)  = 1 

9)  = 1 

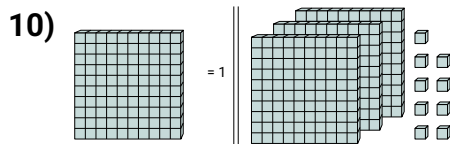
10)  = 1 

Respuestas

1. _____
2. _____
3. _____
4. _____
5. _____
6. _____
7. _____
8. _____
9. _____
10. _____



Respuestas



10 **3.09**