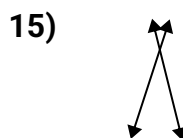
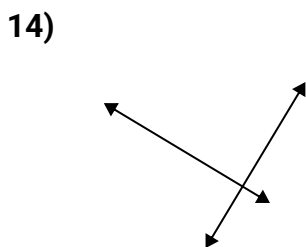
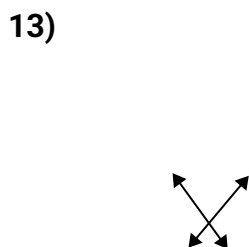
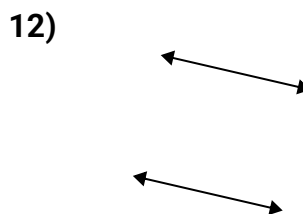
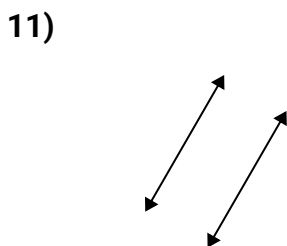
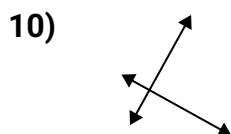
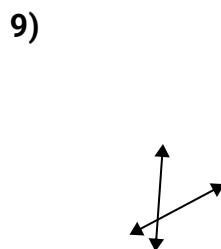
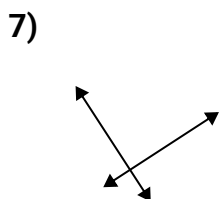
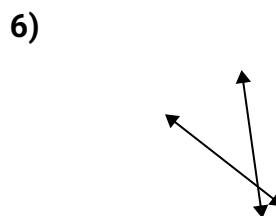
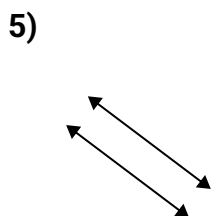
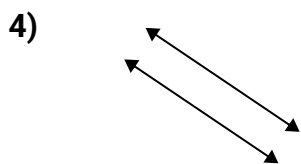
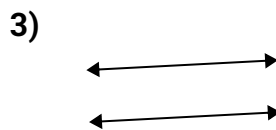
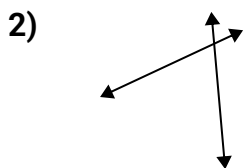
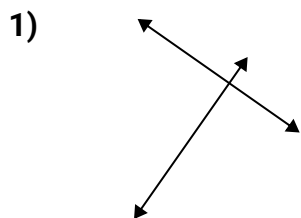




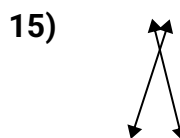
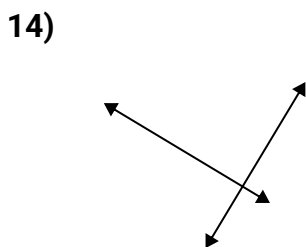
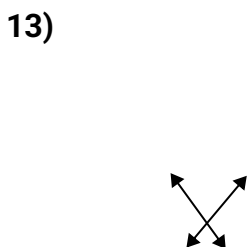
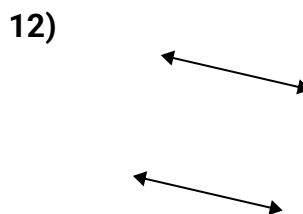
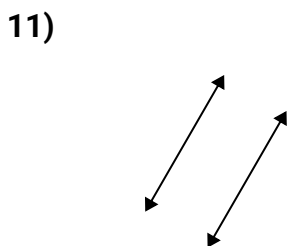
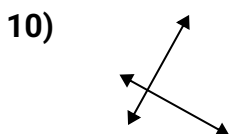
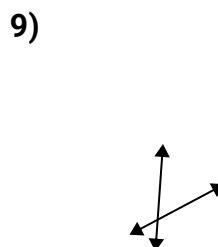
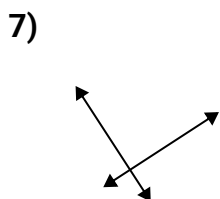
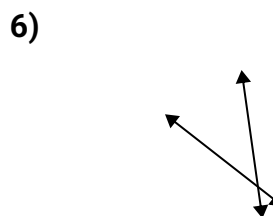
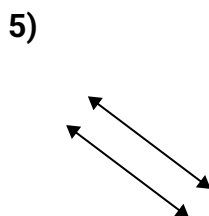
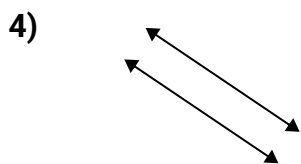
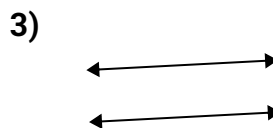
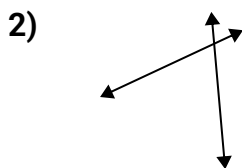
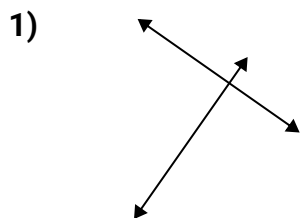
Utilice 'paralelo', 'perpendicular' (perpendicular) o 'inter' (intersección) para describir las líneas.

**Respuestas**

1. _____
2. _____
3. _____
4. _____
5. _____
6. _____
7. _____
8. _____
9. _____
10. _____
11. _____
12. _____
13. _____
14. _____
15. _____



Utilice 'paralelo', 'perpendicular' (perpendicular) o 'inter' (intersección) para describir las líneas.

**Respuestas**1. **perp y inter**2. **inter**3. **paralelo**4. **paralelo**5. **paralelo**6. **inter**7. **perp y inter**8. **perp y inter**9. **inter**10. **perp y inter**11. **paralelo**12. **paralelo**13. **inter**14. **perp y inter**15. **inter**